

SOLUTIONS MANUAL



UNIVERSITY
CALCULUS

HASS WEIR THOMAS

ALTERNATE EDITION

CHAPTER 2 LIMITS AND CONTINUITY

2.1 RATES OF CHANGE AND TANGENTS TO CURVES

1. (a) $\frac{\Delta f}{\Delta x} = \frac{f(3) - f(2)}{3 - 2} = \frac{28 - 9}{1} = 19$

(b) $\frac{\Delta f}{\Delta x} = \frac{f(1) - f(-1)}{1 - (-1)} = \frac{2 - 0}{2} = 1$

2. (a) $\frac{\Delta g}{\Delta x} = \frac{g(1) - g(-1)}{1 - (-1)} = \frac{1 - 1}{2} = 0$

(b) $\frac{\Delta g}{\Delta x} = \frac{g(0) - g(-2)}{0 - (-2)} = \frac{0 - 4}{2} = -2$

3. (a) $\frac{\Delta h}{\Delta t} = \frac{h(\frac{3\pi}{4}) - h(\frac{\pi}{4})}{\frac{3\pi}{4} - \frac{\pi}{4}} = \frac{-1 - 1}{\frac{\pi}{2}} = -\frac{4}{\pi}$

(b) $\frac{\Delta h}{\Delta t} = \frac{h(\frac{\pi}{3}) - h(\frac{\pi}{6})}{\frac{\pi}{3} - \frac{\pi}{6}} = \frac{0 - \sqrt{3}}{\frac{\pi}{6}} = \frac{-3\sqrt{3}}{\pi}$

4. (a) $\frac{\Delta g}{\Delta t} = \frac{g(\pi) - g(0)}{\pi - 0} = \frac{(2 - 1) - (2 + 1)}{\pi - 0} = -\frac{2}{\pi}$

(b) $\frac{\Delta g}{\Delta t} = \frac{g(\pi) - g(-\pi)}{\pi - (-\pi)} = \frac{(2 - 1) - (2 - 1)}{2\pi} = 0$

5. $\frac{\Delta R}{\Delta \theta} = \frac{R(2) - R(0)}{2 - 0} = \frac{\sqrt{8+1} - \sqrt{1}}{2} = \frac{3-1}{2} = 1$

6. $\frac{\Delta P}{\Delta \theta} = \frac{P(2) - P(1)}{2 - 1} = \frac{(8 - 16 + 10) - (1 - 4 + 5)}{1} = 2 - 2 = 0$

7. (a)

Q	Slope of PQ = $\frac{\Delta P}{\Delta t}$
Q ₁ (10, 225)	$\frac{650 - 225}{20 - 10} = 42.5$ m/sec
Q ₂ (14, 375)	$\frac{650 - 375}{20 - 14} = 45.83$ m/sec
Q ₃ (16.5, 475)	$\frac{650 - 475}{20 - 16.5} = 50.00$ m/sec
Q ₄ (18, 550)	$\frac{650 - 550}{20 - 18} = 50.00$ m/sec

(b) At $t = 20$, the sportscar was traveling approximately 50 m/sec or 180 km/h.

8. (a)

Q	Slope of PQ = $\frac{\Delta P}{\Delta t}$
Q ₁ (5, 20)	$\frac{80 - 20}{10 - 5} = 12$ m/sec
Q ₂ (7, 39)	$\frac{80 - 39}{10 - 7} = 13.7$ m/sec
Q ₃ (8.5, 58)	$\frac{80 - 58}{10 - 8.5} = 14.7$ m/sec
Q ₄ (9.5, 72)	$\frac{80 - 72}{10 - 9.5} = 16$ m/sec

(b) Approximately 16 m/sec

9. (a) $\frac{\Delta y}{\Delta x} = \frac{((2+h)^2 - 3) - (2^2 - 3)}{h} = \frac{4 + 4h + h^2 - 3 - 1}{h} = \frac{4h + h^2}{h} = 4 + 4h$. As $h \rightarrow 0$, $4 + 4h \rightarrow 4 \Rightarrow$ at $P(2, 1)$ the slope is 4.

(b) $y - 1 = 4(x - 2) \Rightarrow y - 1 = 4x - 8 \Rightarrow y = 4x - 7$

10. (a) $\frac{\Delta y}{\Delta x} = \frac{(5 - (1+h)^2) - (5 - 1^2)}{h} = \frac{5 - 1 - 2h - h^2 - 4}{h} = \frac{-2h - h^2}{h} = -2 - h$. As $h \rightarrow 0$, $-2 - h \rightarrow -2 \Rightarrow$ at $P(1, 4)$ the slope is -2 .

(b) $y - 4 = (-2)(x - 1) \Rightarrow y - 4 = -2x + 2 \Rightarrow y = -2x + 6$

11. (a) $\frac{\Delta y}{\Delta x} = \frac{((2+h)^2 - 2(2+h) - 3) - (2^2 - 2(2) - 3)}{h} = \frac{4 + 4h + h^2 - 4 - 2h - 3 - (-3)}{h} = \frac{2h + h^2}{h} = 2 + h$. As $h \rightarrow 0$, $2 + h \rightarrow 2 \Rightarrow$ at $P(2, -3)$ the slope is 2.

(b) $y - (-3) = 2(x - 2) \Rightarrow y + 3 = 2x - 4 \Rightarrow y = 2x - 7$.

46 Chapter 2 Limits and Continuity

12. (a) $\frac{\Delta y}{\Delta x} = \frac{((1+h)^2 - 4(1+h)) - (1^2 - 4(1))}{h} = \frac{1+2h+h^2-4-4h-(-3)}{h} = \frac{h^2-2h}{h} = h-2$. As $h \rightarrow 0$, $h-2 \rightarrow -2 \Rightarrow$ at $P(1, -3)$ the slope is -2 .

(b) $y - (-3) = (-2)(x - 1) \Rightarrow y + 3 = -2x + 2 \Rightarrow y = -2x - 1$.

13. (a) $\frac{\Delta y}{\Delta x} = \frac{(2+h)^3 - 2^3}{h} = \frac{8+12h+4h^2+h^3-8}{h} = \frac{12h+4h^2+h^3}{h} = 12+4h+h^2$. As $h \rightarrow 0$, $12+4h+h^2 \rightarrow 12$, \Rightarrow at $P(2, 8)$ the slope is 12 .

(b) $y - 8 = 12(x - 2) \Rightarrow y - 8 = 12x - 24 \Rightarrow y = 12x - 16$.

14. (a) $\frac{\Delta y}{\Delta x} = \frac{2-(1+h)^3 - (2-1^3)}{h} = \frac{2-1-3h-3h^2-h^3-1}{h} = \frac{-3h-3h^2-h^3}{h} = -3-3h-h^2$. As $h \rightarrow 0$, $-3-3h-h^2 \rightarrow -3$, \Rightarrow at $P(1, 1)$ the slope is -3 .

(b) $y - 1 = (-3)(x - 1) \Rightarrow y - 1 = -3x + 3 \Rightarrow y = -3x + 4$.

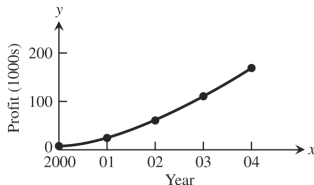
15. (a) $\frac{\Delta y}{\Delta x} = \frac{(1+h)^3 - 12(1+h) - (1^3 - 12(1))}{h} = \frac{1+3h+3h^2+h^3-12-12h-(-11)}{h} = \frac{-9h+3h^2+h^3}{h} = -9+3h+h^2$. As $h \rightarrow 0$, $-9+3h+h^2 \rightarrow -9 \Rightarrow$ at $P(1, -11)$ the slope is -9 .

(b) $y - (-11) = (-9)(x - 1) \Rightarrow y + 11 = -9x + 9 \Rightarrow y = -9x - 2$.

16. (a) $\frac{\Delta y}{\Delta x} = \frac{(2+h)^3 - 3(2+h)^2 + 4 - (2^3 - 3(2)^2 + 4)}{h} = \frac{8+12h+6h^2+h^3-12-12h-3h^2+4-0}{h} = \frac{3h^2+h^3}{h} = 3h+h^2$. As $h \rightarrow 0$, $3h+h^2 \rightarrow 0 \Rightarrow$ at $P(2, 0)$ the slope is 0 .

(b) $y - 0 = 0(x - 2) \Rightarrow y = 0$.

17. (a)



(b) $\frac{\Delta p}{\Delta t} = \frac{174-62}{2004-2002} = \frac{112}{2} = 56$ thousand dollars per year

(c) The average rate of change from 2001 to 2002 is $\frac{\Delta p}{\Delta t} = \frac{62-27}{2002-2001} = 35$ thousand dollars per year.

The average rate of change from 2002 to 2003 is $\frac{\Delta p}{\Delta t} = \frac{111-62}{2003-2002} = 49$ thousand dollars per year.

So, the rate at which profits were changing in 2002 is approximately $\frac{1}{2}(35 + 49) = 42$ thousand dollars per year.

18. (a) $F(x) = (x + 2)/(x - 2)$

x	1.2	1.1	1.01	1.001	1.0001	1
F(x)	-4.0	-3.4	-3.04	-3.004	-3.0004	-3

$\frac{\Delta F}{\Delta x} = \frac{-4.0 - (-3)}{1.2 - 1} = -5.0$;

$\frac{\Delta F}{\Delta x} = \frac{-3.4 - (-3)}{1.1 - 1} = -4.4$;

$\frac{\Delta F}{\Delta x} = \frac{-3.04 - (-3)}{1.01 - 1} = -4.04$;

$\frac{\Delta F}{\Delta x} = \frac{-3.004 - (-3)}{1.001 - 1} = -4.004$;

$\frac{\Delta F}{\Delta x} = \frac{-3.0004 - (-3)}{1.0001 - 1} = -4.0004$;

(b) The rate of change of $F(x)$ at $x = 1$ is -4 .

19. (a) $\frac{\Delta g}{\Delta x} = \frac{g(2) - g(1)}{2 - 1} = \frac{\sqrt{2} - 1}{2 - 1} \approx 0.414213$

$\frac{\Delta g}{\Delta x} = \frac{g(1.5) - g(1)}{1.5 - 1} = \frac{\sqrt{1.5} - 1}{0.5} \approx 0.449489$

$\frac{\Delta g}{\Delta x} = \frac{g(1+h) - g(1)}{(1+h) - 1} = \frac{\sqrt{1+h} - 1}{h}$

(b) $g(x) = \sqrt{x}$

$1+h$	1.1	1.01	1.001	1.0001	1.00001	1.000001
$\sqrt{1+h}$	1.04880	1.004987	1.0004998	1.0000499	1.000005	1.0000005
$(\sqrt{1+h}-1)/h$	0.4880	0.4987	0.4998	0.499	0.5	0.5

(c) The rate of change of $g(x)$ at $x = 1$ is 0.5.(d) The calculator gives $\lim_{h \rightarrow 0} \frac{\sqrt{1+h}-1}{h} = \frac{1}{2}$.

20. (a) i) $\frac{f(3)-f(2)}{3-2} = \frac{\frac{1}{3}-\frac{1}{2}}{1} = \frac{-\frac{1}{6}}{1} = -\frac{1}{6}$

ii) $\frac{f(T)-f(2)}{T-2} = \frac{\frac{1}{T}-\frac{1}{2}}{T-2} = \frac{\frac{2-T}{2T}}{T-2} = \frac{2-T}{-2T(T-2)} = -\frac{1}{2T}, T \neq 2$

T	2.1	2.01	2.001	2.0001	2.00001	2.000001
f(T)	0.476190	0.497512	0.499750	0.4999750	0.499997	0.499999
$(f(T)-f(2))/(T-2)$	-0.2381	-0.2488	-0.2500	-0.2500	-0.2500	-0.2500

(c) The table indicates the rate of change is -0.25 at $t = 2$.

(d) $\lim_{T \rightarrow 2} \left(\frac{1}{-2T}\right) = -\frac{1}{4}$

2.2 LIMIT OF A FUNCTION AND LIMIT LAWS1. (a) Does not exist. As x approaches 1 from the right, $g(x)$ approaches 0. As x approaches 1 from the left, $g(x)$ approaches 1. There is no single number L that all the values $g(x)$ get arbitrarily close to as $x \rightarrow 1$.

(b) 1

(c) 0

2. (a) 0

(b) -1 (c) Does not exist. As t approaches 0 from the left, $f(t)$ approaches -1 . As t approaches 0 from the right, $f(t)$ approaches 1. There is no single number L that $f(t)$ gets arbitrarily close to as $t \rightarrow 0$.

3. (a) True

(b) True

(c) False

(d) False

(e) False

(f) True

4. (a) False

(b) False

(c) True

(d) True

(e) True

5. $\lim_{x \rightarrow 0} \frac{x}{|x|}$ does not exist because $\frac{x}{|x|} = \frac{x}{x} = 1$ if $x > 0$ and $\frac{x}{|x|} = \frac{x}{-x} = -1$ if $x < 0$. As x approaches 0 from the left, $\frac{x}{|x|}$ approaches -1 . As x approaches 0 from the right, $\frac{x}{|x|}$ approaches 1. There is no single number L that all the function values get arbitrarily close to as $x \rightarrow 0$.6. As x approaches 1 from the left, the values of $\frac{1}{x-1}$ become increasingly large and negative. As x approaches 1 from the right, the values become increasingly large and positive. There is no one number L that all the function values get arbitrarily close to as $x \rightarrow 1$, so $\lim_{x \rightarrow 1} \frac{1}{x-1}$ does not exist.7. Nothing can be said about $f(x)$ because the existence of a limit as $x \rightarrow x_0$ does not depend on how the function is defined at x_0 . In order for a limit to exist, $f(x)$ must be arbitrarily close to a single real number L when x is close enough to x_0 . That is, the existence of a limit depends on the values of $f(x)$ for x near x_0 , not on the definition of $f(x)$ at x_0 itself.

48 Chapter 2 Limits and Continuity

8. Nothing can be said. In order for $\lim_{x \rightarrow 0} f(x)$ to exist, $f(x)$ must close to a single value for x near 0 regardless of the value $f(0)$ itself.

9. No, the definition does not require that f be defined at $x = 1$ in order for a limiting value to exist there. If $f(1)$ is defined, it can be any real number, so we can conclude nothing about $f(1)$ from $\lim_{x \rightarrow 1} f(x) = 5$.

10. No, because the existence of a limit depends on the values of $f(x)$ when x is near 1, not on $f(1)$ itself. If $\lim_{x \rightarrow 1} f(x)$ exists, its value may be some number other than $f(1) = 5$. We can conclude nothing about $\lim_{x \rightarrow 1} f(x)$, whether it exists or what its value is if it does exist, from knowing the value of $f(1)$ alone.

11. $\lim_{x \rightarrow -7} (2x + 5) = 2(-7) + 5 = -14 + 5 = -9$ 12. $\lim_{x \rightarrow 12} (10 - 3x) = 10 - 3(12) = 10 - 36 = -26$

13. $\lim_{x \rightarrow 2} (-x^2 + 5x - 2) = -(2)^2 + 5(2) - 2 = -4 + 10 - 2 = 4$

14. $\lim_{x \rightarrow -2} (x^3 - 2x^2 + 4x + 8) = (-2)^3 - 2(-2)^2 + 4(-2) + 8 = -8 - 8 - 8 + 8 = -16$

15. $\lim_{t \rightarrow 6} 8(t - 5)(t - 7) = 8(6 - 5)(6 - 7) = -8$ 16. $\lim_{s \rightarrow \frac{2}{3}} 3s(2s - 1) = 3\left(\frac{2}{3}\right) \left[2\left(\frac{2}{3}\right) - 1\right] = 2\left(\frac{4}{3} - 1\right) = \frac{2}{3}$

17. $\lim_{x \rightarrow 2} \frac{x+3}{x+6} = \frac{2+3}{2+6} = \frac{5}{8}$ 18. $\lim_{x \rightarrow 5} \frac{4}{x-7} = \frac{4}{5-7} = \frac{4}{-2} = -2$

19. $\lim_{y \rightarrow -5} \frac{y^2}{5-y} = \frac{(-5)^2}{5-(-5)} = \frac{25}{10} = \frac{5}{2}$

20. $\lim_{y \rightarrow 2} \frac{y+2}{y^2+5y+6} = \frac{2+2}{(2)^2+5(2)+6} = \frac{4}{4+10+6} = \frac{4}{20} = \frac{1}{5}$

21. $\lim_{x \rightarrow -1} 3(2x - 1)^2 = 3(2(-1) - 1)^2 = 3(-3)^2 = 27$

22. $\lim_{x \rightarrow -4} (x + 3)^{1984} = (-4 + 3)^{1984} = (-1)^{1984} = 1$

23. $\lim_{y \rightarrow -3} (5 - y)^{4/3} = [5 - (-3)]^{4/3} = (8)^{4/3} = ((8)^{1/3})^4 = 2^4 = 16$

24. $\lim_{z \rightarrow 0} (2z - 8)^{1/3} = (2(0) - 8)^{1/3} = (-8)^{1/3} = -2$

25. $\lim_{h \rightarrow 0} \frac{3}{\sqrt{3h+1}+1} = \frac{3}{\sqrt{3(0)+1}+1} = \frac{3}{\sqrt{1}+1} = \frac{3}{2}$

26. $\lim_{h \rightarrow 0} \frac{5}{\sqrt{5h+4}+2} = \frac{5}{\sqrt{5(0)+4}+2} = \frac{5}{\sqrt{4}+2} = \frac{5}{4}$

27. $\lim_{h \rightarrow 0} \frac{\sqrt{3h+1}-1}{h} = \lim_{h \rightarrow 0} \frac{\sqrt{3h+1}-1}{h} \cdot \frac{\sqrt{3h+1}+1}{\sqrt{3h+1}+1} = \lim_{h \rightarrow 0} \frac{(3h+1)-1}{h(\sqrt{3h+1}+1)} = \lim_{h \rightarrow 0} \frac{3h}{h(\sqrt{3h+1}+1)} = \lim_{h \rightarrow 0} \frac{3}{\sqrt{3h+1}+1} = \frac{3}{\sqrt{1}+1} = \frac{3}{2}$

$$28. \lim_{h \rightarrow 0} \frac{\sqrt{5h+4}-2}{h} = \lim_{h \rightarrow 0} \frac{\sqrt{5h+4}-2}{h} \cdot \frac{\sqrt{5h+4}+2}{\sqrt{5h+4}+2} = \lim_{h \rightarrow 0} \frac{(5h+4)-4}{h(\sqrt{5h+4}+2)} = \lim_{h \rightarrow 0} \frac{5h}{h(\sqrt{5h+4}+2)} = \lim_{h \rightarrow 0} \frac{5}{\sqrt{5h+4}+2} \\ = \frac{5}{\sqrt{4+2}} = \frac{5}{4}$$

$$29. \lim_{x \rightarrow 5} \frac{x-5}{x^2-25} = \lim_{x \rightarrow 5} \frac{x-5}{(x+5)(x-5)} = \lim_{x \rightarrow 5} \frac{1}{x+5} = \frac{1}{5+5} = \frac{1}{10}$$

$$30. \lim_{x \rightarrow -3} \frac{x+3}{x^2+4x+3} = \lim_{x \rightarrow -3} \frac{x+3}{(x+3)(x+1)} = \lim_{x \rightarrow -3} \frac{1}{x+1} = \frac{1}{-3+1} = -\frac{1}{2}$$

$$31. \lim_{x \rightarrow -5} \frac{x^2+3x-10}{x+5} = \lim_{x \rightarrow -5} \frac{(x+5)(x-2)}{x+5} = \lim_{x \rightarrow -5} (x-2) = -5-2 = -7$$

$$32. \lim_{x \rightarrow 2} \frac{x^2-7x+10}{x-2} = \lim_{x \rightarrow 2} \frac{(x-5)(x-2)}{x-2} = \lim_{x \rightarrow 2} (x-5) = 2-5 = -3$$

$$33. \lim_{t \rightarrow 1} \frac{t^2+t-2}{t^2-1} = \lim_{t \rightarrow 1} \frac{(t+2)(t-1)}{(t-1)(t+1)} = \lim_{t \rightarrow 1} \frac{t+2}{t+1} = \frac{1+2}{1+1} = \frac{3}{2}$$

$$34. \lim_{t \rightarrow -1} \frac{t^2+3t+2}{t^2-t-2} = \lim_{t \rightarrow -1} \frac{(t+2)(t+1)}{(t-2)(t+1)} = \lim_{t \rightarrow -1} \frac{t+2}{t-2} = \frac{-1+2}{-1-2} = -\frac{1}{3}$$

$$35. \lim_{x \rightarrow -2} \frac{-2x-4}{x^3+2x^2} = \lim_{x \rightarrow -2} \frac{-2(x+2)}{x^2(x+2)} = \lim_{x \rightarrow -2} \frac{-2}{x^2} = \frac{-2}{4} = -\frac{1}{2}$$

$$36. \lim_{y \rightarrow 0} \frac{5y^3+8y^2}{3y^4-16y^2} = \lim_{y \rightarrow 0} \frac{y^2(5y+8)}{y^2(3y^2-16)} = \lim_{y \rightarrow 0} \frac{5y+8}{3y^2-16} = \frac{8}{-16} = -\frac{1}{2}$$

$$37. \lim_{u \rightarrow 1} \frac{u^4-1}{u^3-1} = \lim_{u \rightarrow 1} \frac{(u^2+1)(u+1)(u-1)}{(u^2+u+1)(u-1)} = \lim_{u \rightarrow 1} \frac{(u^2+1)(u+1)}{u^2+u+1} = \frac{(1+1)(1+1)}{1+1+1} = \frac{4}{3}$$

$$38. \lim_{v \rightarrow 2} \frac{v^3-8}{v^4-16} = \lim_{v \rightarrow 2} \frac{(v-2)(v^2+2v+4)}{(v-2)(v+2)(v^2+4)} = \lim_{v \rightarrow 2} \frac{v^2+2v+4}{(v+2)(v^2+4)} = \frac{4+4+4}{(4)(8)} = \frac{12}{32} = \frac{3}{8}$$

$$39. \lim_{x \rightarrow 9} \frac{\sqrt{x}-3}{x-9} = \lim_{x \rightarrow 9} \frac{\sqrt{x}-3}{(\sqrt{x}-3)(\sqrt{x}+3)} = \lim_{x \rightarrow 9} \frac{1}{\sqrt{x}+3} = \frac{1}{\sqrt{9}+3} = \frac{1}{6}$$

$$40. \lim_{x \rightarrow 4} \frac{4x-x^2}{2-\sqrt{x}} = \lim_{x \rightarrow 4} \frac{x(4-x)}{2-\sqrt{x}} = \lim_{x \rightarrow 4} \frac{x(2+\sqrt{x})(2-\sqrt{x})}{2-\sqrt{x}} = \lim_{x \rightarrow 4} x(2+\sqrt{x}) = 4(2+2) = 16$$

$$41. \lim_{x \rightarrow 1} \frac{x-1}{\sqrt{x+3}-2} = \lim_{x \rightarrow 1} \frac{(x-1)(\sqrt{x+3}+2)}{(\sqrt{x+3}-2)(\sqrt{x+3}+2)} = \lim_{x \rightarrow 1} \frac{(x-1)(\sqrt{x+3}+2)}{(x+3)-4} = \lim_{x \rightarrow 1} (\sqrt{x+3}+2) \\ = \sqrt{4}+2 = 4$$

$$42. \lim_{x \rightarrow -1} \frac{\sqrt{x^2+8}-3}{x+1} = \lim_{x \rightarrow -1} \frac{(\sqrt{x^2+8}-3)(\sqrt{x^2+8}+3)}{(x+1)(\sqrt{x^2+8}+3)} = \lim_{x \rightarrow -1} \frac{(x^2+8)-9}{(x+1)(\sqrt{x^2+8}+3)} \\ = \lim_{x \rightarrow -1} \frac{(x+1)(x-1)}{(x+1)(\sqrt{x^2+8}+3)} = \lim_{x \rightarrow -1} \frac{x-1}{\sqrt{x^2+8}+3} = \frac{-2}{3+3} = -\frac{1}{3}$$

$$43. \lim_{x \rightarrow 2} \frac{\sqrt{x^2+12}-4}{x-2} = \lim_{x \rightarrow 2} \frac{(\sqrt{x^2+12}-4)(\sqrt{x^2+12}+4)}{(x-2)(\sqrt{x^2+12}+4)} = \lim_{x \rightarrow 2} \frac{(x^2+12)-16}{(x-2)(\sqrt{x^2+12}+4)} \\ = \lim_{x \rightarrow 2} \frac{(x-2)(x+2)}{(x-2)(\sqrt{x^2+12}+4)} = \lim_{x \rightarrow 2} \frac{x+2}{\sqrt{x^2+12}+4} = \frac{4}{\sqrt{16}+4} = \frac{1}{2}$$

50 Chapter 2 Limits and Continuity

$$44. \lim_{x \rightarrow -2} \frac{x+2}{\sqrt{x^2+5}-3} = \lim_{x \rightarrow -2} \frac{(x+2)(\sqrt{x^2+5}+3)}{(\sqrt{x^2+5}-3)(\sqrt{x^2+5}+3)} = \lim_{x \rightarrow -2} \frac{(x+2)(\sqrt{x^2+5}+3)}{(x^2+5)-9}$$

$$= \lim_{x \rightarrow -2} \frac{(x+2)(\sqrt{x^2+5}+3)}{(x+2)(x-2)} = \lim_{x \rightarrow -2} \frac{\sqrt{x^2+5}+3}{x-2} = \frac{\sqrt{9}+3}{-4} = -\frac{3}{2}$$

$$45. \lim_{x \rightarrow -3} \frac{2-\sqrt{x^2-5}}{x+3} = \lim_{x \rightarrow -3} \frac{(2-\sqrt{x^2-5})(2+\sqrt{x^2-5})}{(x+3)(2+\sqrt{x^2-5})} = \lim_{x \rightarrow -3} \frac{4-(x^2-5)}{(x+3)(2+\sqrt{x^2-5})}$$

$$= \lim_{x \rightarrow -3} \frac{9-x^2}{(x+3)(2+\sqrt{x^2-5})} = \lim_{x \rightarrow -3} \frac{(3-x)(3+x)}{(x+3)(2+\sqrt{x^2-5})} = \lim_{x \rightarrow -3} \frac{3-x}{2+\sqrt{x^2-5}} = \frac{6}{2+\sqrt{4}} = \frac{3}{2}$$

$$46. \lim_{x \rightarrow 4} \frac{4-x}{5-\sqrt{x^2+9}} = \lim_{x \rightarrow 4} \frac{(4-x)(5+\sqrt{x^2+9})}{(5-\sqrt{x^2+9})(5+\sqrt{x^2+9})} = \lim_{x \rightarrow 4} \frac{(4-x)(5+\sqrt{x^2+9})}{25-(x^2+9)}$$

$$= \lim_{x \rightarrow 4} \frac{(4-x)(5+\sqrt{x^2+9})}{16-x^2} = \lim_{x \rightarrow 4} \frac{(4-x)(5+\sqrt{x^2+9})}{(4-x)(4+x)} = \lim_{x \rightarrow 4} \frac{5+\sqrt{x^2+9}}{4+x} = \frac{5+\sqrt{25}}{8} = \frac{5}{4}$$

$$47. \lim_{x \rightarrow 0} (2\sin x - 1) = 2\sin 0 - 1 = 0 - 1 = -1$$

$$48. \lim_{x \rightarrow 0} \sin^2 x = \left(\lim_{x \rightarrow 0} \sin x \right)^2 = (\sin 0)^2 = 0^2 = 0$$

$$49. \lim_{x \rightarrow 0} \sec x = \lim_{x \rightarrow 0} \frac{1}{\cos x} = \frac{1}{\cos 0} = \frac{1}{1} = 1$$

$$50. \lim_{x \rightarrow 0} \tan x = \lim_{x \rightarrow 0} \frac{\sin x}{\cos x} = \frac{\sin 0}{\cos 0} = \frac{0}{1} = 0$$

$$51. \lim_{x \rightarrow 0} \frac{1+x+\sin x}{3\cos x} = \frac{1+0+\sin 0}{3\cos 0} = \frac{1+0+0}{3} = \frac{1}{3}$$

$$52. \lim_{x \rightarrow 0} (x^2 - 1)(2 - \cos x) = (0^2 - 1)(2 - \cos 0) = (-1)(2 - 1) = (-1)(1) = -1$$

$$53. \lim_{x \rightarrow 0} \sqrt{x+1} \cos^{1/3} x = \lim_{x \rightarrow 0} \sqrt{x+1} \cdot \sqrt[3]{\cos x} = \sqrt{0+1} \cdot \sqrt[3]{\cos 0} = \sqrt{1} \cdot \sqrt[3]{1} = 1 \cdot 1 = 1$$

$$54. \lim_{x \rightarrow 0} \sqrt{1 + \cos^2 x} = \sqrt{\lim_{x \rightarrow 0} (1 + \cos^2 x)} = \sqrt{1 + \cos^2 0} = \sqrt{1 + (1)^2} = \sqrt{2}$$

55. (a) quotient rule
 (b) difference and power rules
 (c) sum and constant multiple rules

56. (a) quotient rule
 (b) power and product rules
 (c) difference and constant multiple rules

57. (a) $\lim_{x \rightarrow c} f(x)g(x) = \left[\lim_{x \rightarrow c} f(x) \right] \left[\lim_{x \rightarrow c} g(x) \right] = (5)(-2) = -10$
 (b) $\lim_{x \rightarrow c} 2f(x)g(x) = 2 \left[\lim_{x \rightarrow c} f(x) \right] \left[\lim_{x \rightarrow c} g(x) \right] = 2(5)(-2) = -20$
 (c) $\lim_{x \rightarrow c} [f(x) + 3g(x)] = \lim_{x \rightarrow c} f(x) + 3 \lim_{x \rightarrow c} g(x) = 5 + 3(-2) = -1$

$$(d) \lim_{x \rightarrow c} \frac{f(x)}{f(x) - g(x)} = \frac{\lim_{x \rightarrow c} f(x)}{\lim_{x \rightarrow c} f(x) - \lim_{x \rightarrow c} g(x)} = \frac{5}{5 - (-2)} = \frac{5}{7}$$

$$58. (a) \lim_{x \rightarrow 4} [g(x) + 3] = \lim_{x \rightarrow 4} g(x) + \lim_{x \rightarrow 4} 3 = -3 + 3 = 0$$

$$(b) \lim_{x \rightarrow 4} xf(x) = \lim_{x \rightarrow 4} x \cdot \lim_{x \rightarrow 4} f(x) = (4)(0) = 0$$

$$(c) \lim_{x \rightarrow 4} [g(x)]^2 = \left[\lim_{x \rightarrow 4} g(x) \right]^2 = [-3]^2 = 9$$

$$(d) \lim_{x \rightarrow 4} \frac{g(x)}{f(x) - 1} = \frac{\lim_{x \rightarrow 4} g(x)}{\lim_{x \rightarrow 4} f(x) - \lim_{x \rightarrow 4} 1} = \frac{-3}{0 - 1} = 3$$

$$59. (a) \lim_{x \rightarrow b} [f(x) + g(x)] = \lim_{x \rightarrow b} f(x) + \lim_{x \rightarrow b} g(x) = 7 + (-3) = 4$$

$$(b) \lim_{x \rightarrow b} f(x) \cdot g(x) = \left[\lim_{x \rightarrow b} f(x) \right] \left[\lim_{x \rightarrow b} g(x) \right] = (7)(-3) = -21$$

$$(c) \lim_{x \rightarrow b} 4g(x) = \left[\lim_{x \rightarrow b} 4 \right] \left[\lim_{x \rightarrow b} g(x) \right] = (4)(-3) = -12$$

$$(d) \lim_{x \rightarrow b} f(x)/g(x) = \lim_{x \rightarrow b} f(x) / \lim_{x \rightarrow b} g(x) = \frac{7}{-3} = -\frac{7}{3}$$

$$60. (a) \lim_{x \rightarrow -2} [p(x) + r(x) + s(x)] = \lim_{x \rightarrow -2} p(x) + \lim_{x \rightarrow -2} r(x) + \lim_{x \rightarrow -2} s(x) = 4 + 0 + (-3) = 1$$

$$(b) \lim_{x \rightarrow -2} p(x) \cdot r(x) \cdot s(x) = \left[\lim_{x \rightarrow -2} p(x) \right] \left[\lim_{x \rightarrow -2} r(x) \right] \left[\lim_{x \rightarrow -2} s(x) \right] = (4)(0)(-3) = 0$$

$$(c) \lim_{x \rightarrow -2} [-4p(x) + 5r(x)]/s(x) = \left[-4 \lim_{x \rightarrow -2} p(x) + 5 \lim_{x \rightarrow -2} r(x) \right] / \lim_{x \rightarrow -2} s(x) = [-4(4) + 5(0)] / -3 = \frac{16}{3}$$

$$61. \lim_{h \rightarrow 0} \frac{(1+h)^2 - 1^2}{h} = \lim_{h \rightarrow 0} \frac{1+2h+h^2-1}{h} = \lim_{h \rightarrow 0} \frac{h(2+h)}{h} = \lim_{h \rightarrow 0} (2+h) = 2$$

$$62. \lim_{h \rightarrow 0} \frac{(-2+h)^2 - (-2)^2}{h} = \lim_{h \rightarrow 0} \frac{4-4h+h^2-4}{h} = \lim_{h \rightarrow 0} \frac{h(h-4)}{h} = \lim_{h \rightarrow 0} (h-4) = -4$$

$$63. \lim_{h \rightarrow 0} \frac{[3(2+h)-4] - [3(2)-4]}{h} = \lim_{h \rightarrow 0} \frac{3h}{h} = 3$$

$$64. \lim_{h \rightarrow 0} \frac{\left(\frac{1}{-2+h}\right) - \left(\frac{1}{-2}\right)}{h} = \lim_{h \rightarrow 0} \frac{\frac{-2}{-2+h} - 1}{-2h} = \lim_{h \rightarrow 0} \frac{-2 - (-2+h)}{-2h(-2+h)} = \lim_{h \rightarrow 0} \frac{-h}{h(4-2h)} = -\frac{1}{4}$$

$$65. \lim_{h \rightarrow 0} \frac{\sqrt{7+h} - \sqrt{7}}{h} = \lim_{h \rightarrow 0} \frac{(\sqrt{7+h} - \sqrt{7})(\sqrt{7+h} + \sqrt{7})}{h(\sqrt{7+h} + \sqrt{7})} = \lim_{h \rightarrow 0} \frac{(7+h) - 7}{h(\sqrt{7+h} + \sqrt{7})}$$

$$= \lim_{h \rightarrow 0} \frac{h}{h(\sqrt{7+h} + \sqrt{7})} = \lim_{h \rightarrow 0} \frac{1}{\sqrt{7+h} + \sqrt{7}} = \frac{1}{2\sqrt{7}}$$

$$66. \lim_{h \rightarrow 0} \frac{\sqrt{3(0+h)+1} - \sqrt{3(0)+1}}{h} = \lim_{h \rightarrow 0} \frac{(\sqrt{3h+1}-1)(\sqrt{3h+1}+1)}{h(\sqrt{3h+1}+1)} = \lim_{h \rightarrow 0} \frac{(3h+1)-1}{h(\sqrt{3h+1}+1)}$$

$$= \lim_{h \rightarrow 0} \frac{3h}{h(\sqrt{3h+1}+1)} = \lim_{h \rightarrow 0} \frac{3}{\sqrt{3h+1}+1} = \frac{3}{2}$$

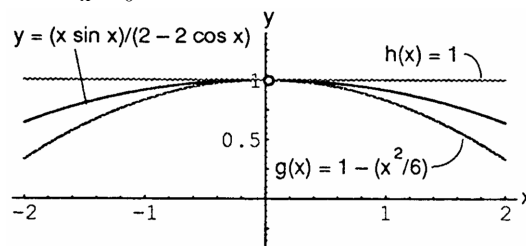
$$67. \lim_{x \rightarrow 0} \sqrt{5 - 2x^2} = \sqrt{5 - 2(0)^2} = \sqrt{5} \text{ and } \lim_{x \rightarrow 0} \sqrt{5 - x^2} = \sqrt{5 - (0)^2} = \sqrt{5}; \text{ by the sandwich theorem,}$$

$$\lim_{x \rightarrow 0} f(x) = \sqrt{5}$$

$$68. \lim_{x \rightarrow 0} (2 - x^2) = 2 - 0 = 2 \text{ and } \lim_{x \rightarrow 0} 2 \cos x = 2(1) = 2; \text{ by the sandwich theorem, } \lim_{x \rightarrow 0} g(x) = 2$$

69. (a) $\lim_{x \rightarrow 0} \left(1 - \frac{x^2}{6}\right) = 1 - \frac{0}{6} = 1$ and $\lim_{x \rightarrow 0} 1 = 1$; by the sandwich theorem, $\lim_{x \rightarrow 0} \frac{x \sin x}{2 - 2 \cos x} = 1$

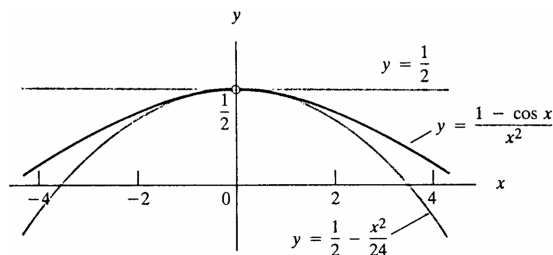
(b) For $x \neq 0$, $y = (x \sin x)/(2 - 2 \cos x)$ lies between the other two graphs in the figure, and the graphs converge as $x \rightarrow 0$.



70. (a) $\lim_{x \rightarrow 0} \left(\frac{1}{2} - \frac{x^2}{24}\right) = \lim_{x \rightarrow 0} \frac{1}{2} - \lim_{x \rightarrow 0} \frac{x^2}{24} = \frac{1}{2} - 0 = \frac{1}{2}$ and $\lim_{x \rightarrow 0} \frac{1}{2} = \frac{1}{2}$; by the sandwich theorem,

$$\lim_{x \rightarrow 0} \frac{1 - \cos x}{x^2} = \frac{1}{2}.$$

(b) For all $x \neq 0$, the graph of $f(x) = (1 - \cos x)/x^2$ lies between the line $y = \frac{1}{2}$ and the parabola $y = \frac{1}{2} - x^2/24$, and the graphs converge as $x \rightarrow 0$.



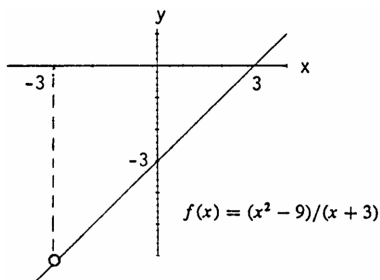
71. (a) $f(x) = (x^2 - 9)/(x + 3)$

x	-3.1	-3.01	-3.001	-3.0001	-3.00001	-3.000001
f(x)	-6.1	-6.01	-6.001	-6.0001	-6.00001	-6.000001

x	-2.9	-2.99	-2.999	-2.9999	-2.99999	-2.999999
f(x)	-5.9	-5.99	-5.999	-5.9999	-5.99999	-5.999999

The estimate is $\lim_{x \rightarrow -3} f(x) = -6$.

(b)

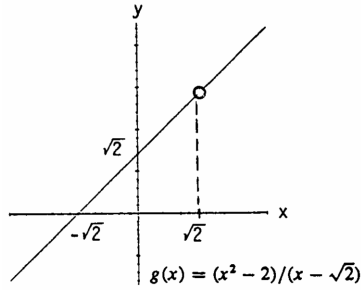


(c) $f(x) = \frac{x^2 - 9}{x + 3} = \frac{(x + 3)(x - 3)}{x + 3} = x - 3$ if $x \neq -3$, and $\lim_{x \rightarrow -3} (x - 3) = -3 - 3 = -6$.

72. (a) $g(x) = (x^2 - 2)/(x - \sqrt{2})$

x	1.4	1.41	1.414	1.4142	1.41421	1.414213
g(x)	2.81421	2.82421	2.82821	2.828413	2.828423	2.828426

(b)



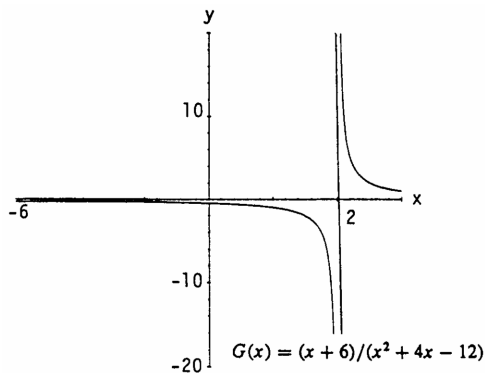
(c) $g(x) = \frac{x^2 - 2}{x - \sqrt{2}} = \frac{(x + \sqrt{2})(x - \sqrt{2})}{(x - \sqrt{2})} = x + \sqrt{2}$ if $x \neq \sqrt{2}$, and $\lim_{x \rightarrow \sqrt{2}} (x + \sqrt{2}) = \sqrt{2} + \sqrt{2} = 2\sqrt{2}$.

73. (a) $G(x) = (x + 6)/(x^2 + 4x - 12)$

x	-5.9	-5.99	-5.999	-5.9999	-5.99999	-5.999999
G(x)	-.126582	-.1251564	-.1250156	-.1250015	-.1250001	-.1250000

x	-6.1	-6.01	-6.001	-6.0001	-6.00001	-6.000001
G(x)	-.123456	-.124843	-.124984	-.124998	-.124999	-.124999

(b)



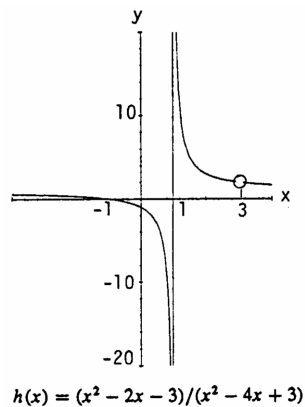
(c) $G(x) = \frac{x+6}{(x^2+4x-12)} = \frac{x+6}{(x+6)(x-2)} = \frac{1}{x-2}$ if $x \neq -6$, and $\lim_{x \rightarrow -6} \frac{1}{x-2} = \frac{1}{-6-2} = -\frac{1}{8} = -0.125$.

74. (a) $h(x) = (x^2 - 2x - 3)/(x^2 - 4x + 3)$

x	2.9	2.99	2.999	2.9999	2.99999	2.999999
h(x)	2.052631	2.005025	2.000500	2.000050	2.000005	2.0000005

x	3.1	3.01	3.001	3.0001	3.00001	3.000001
h(x)	1.952380	1.995024	1.999500	1.999950	1.999995	1.999999

(b)



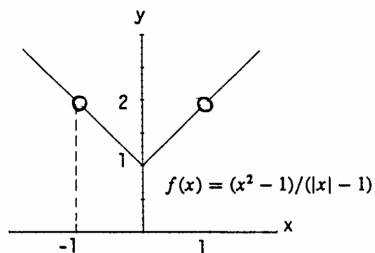
(c) $h(x) = \frac{x^2 - 2x - 3}{x^2 - 4x + 3} = \frac{(x-3)(x+1)}{(x-3)(x-1)} = \frac{x+1}{x-1}$ if $x \neq 3$, and $\lim_{x \rightarrow 3} \frac{x+1}{x-1} = \frac{3+1}{3-1} = \frac{4}{2} = 2$.

75. (a) $f(x) = (x^2 - 1) / (|x| - 1)$

x	-1.1	-1.01	-1.001	-1.0001	-1.00001	-1.000001
f(x)	2.1	2.01	2.001	2.0001	2.00001	2.000001

x	-0.9	-0.99	-0.999	-0.9999	-0.99999	-0.999999
f(x)	1.9	1.99	1.999	1.9999	1.99999	1.999999

(b)



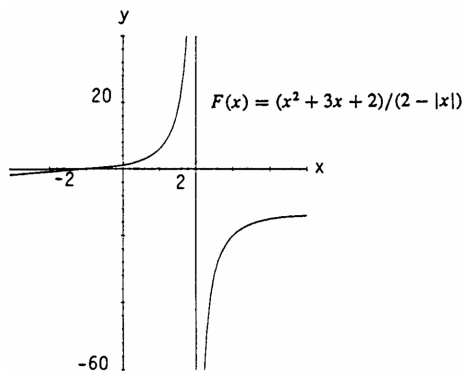
(c) $f(x) = \frac{x^2 - 1}{|x| - 1} = \begin{cases} \frac{(x+1)(x-1)}{x-1} = x + 1, & x \geq 0 \text{ and } x \neq 1 \\ \frac{(x+1)(x-1)}{-(x+1)} = 1 - x, & x < 0 \text{ and } x \neq -1 \end{cases}$, and $\lim_{x \rightarrow -1} (1 - x) = 1 - (-1) = 2$.

76. (a) $F(x) = (x^2 + 3x + 2) / (2 - |x|)$

x	-2.1	-2.01	-2.001	-2.0001	-2.00001	-2.000001
F(x)	-1.1	-1.01	-1.001	-1.0001	-1.00001	-1.000001

x	-1.9	-1.99	-1.999	-1.9999	-1.99999	-1.999999
F(x)	-0.9	-0.99	-0.999	-0.9999	-0.99999	-0.999999

(b)



(c) $F(x) = \frac{x^2 + 3x + 2}{2 - |x|} = \begin{cases} \frac{(x+2)(x+1)}{2-x}, & x \geq 0 \\ \frac{(x+2)(x+1)}{2+x} = x + 1, & x < 0 \text{ and } x \neq -2 \end{cases}$, and $\lim_{x \rightarrow -2} (x + 1) = -2 + 1 = -1$.

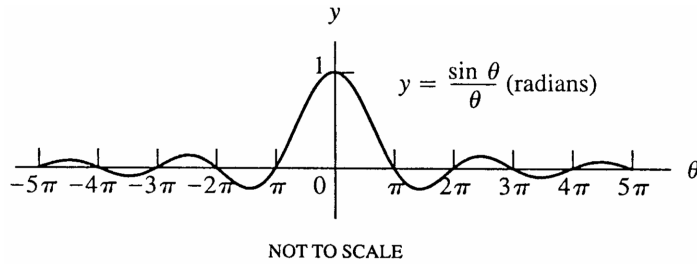
77. (a) $g(\theta) = (\sin \theta) / \theta$

θ	.1	.01	.001	.0001	.00001	.000001
$g(\theta)$.998334	.999983	.999999	.999999	.999999	.999999

θ	-.1	-.01	-.001	-.0001	-.00001	-.000001
$g(\theta)$.998334	.999983	.999999	.999999	.999999	.999999

$\lim_{\theta \rightarrow 0} g(\theta) = 1$

(b)



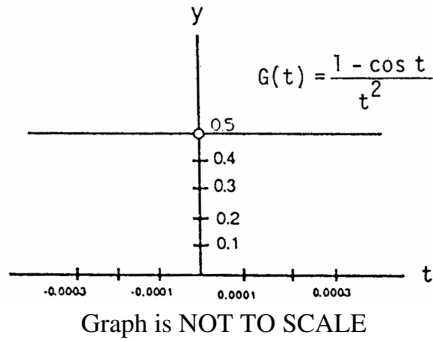
78. (a) $G(t) = (1 - \cos t)/t^2$

t	.1	.01	.001	.0001	.00001	.000001
G(t)	.499583	.499995	.499999	.5	.5	.5

t	-.1	-.01	-.001	-.0001	-.00001	-.000001
G(t)	.499583	.499995	.499999	.5	.5	.5

$\lim_{t \rightarrow 0} G(t) = 0.5$

(b)



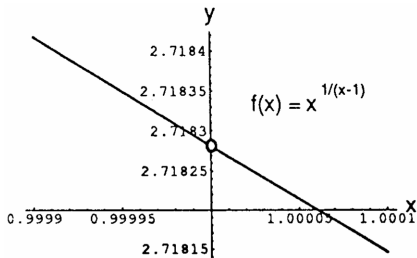
79. (a) $f(x) = x^{1/(1-x)}$

x	.9	.99	.999	.9999	.99999	.999999
f(x)	.348678	.366032	.367695	.367861	.367877	.367879

x	1.1	1.01	1.001	1.0001	1.00001	1.000001
f(x)	.385543	.369711	.368063	.367897	.367881	.367878

$\lim_{x \rightarrow 1} f(x) \approx 0.36788$

(b)



Graph is NOT TO SCALE. Also the intersection of the axes is not the origin: the axes intersect at the point (1, 2.71820).

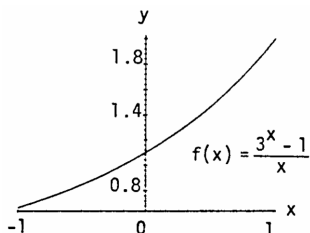
80. (a) $f(x) = (3^x - 1)/x$

x	.1	.01	.001	.0001	.00001	.000001
f(x)	1.161231	1.104669	1.099215	1.098672	1.098618	1.098612

x	-.1	-.01	-.001	-.0001	-.00001	-.000001
f(x)	1.040415	1.092599	1.098009	1.098551	1.098606	1.098611

$\lim_{x \rightarrow 0} f(x) \approx 1.0986$

(b)



81. $\lim_{x \rightarrow c} f(x)$ exists at those points c where $\lim_{x \rightarrow c} x^4 = \lim_{x \rightarrow c} x^2$. Thus, $c^4 = c^2 \Rightarrow c^2(1 - c^2) = 0$

$\Rightarrow c = 0, 1, \text{ or } -1$. Moreover, $\lim_{x \rightarrow 0} f(x) = \lim_{x \rightarrow 0} x^2 = 0$ and $\lim_{x \rightarrow -1} f(x) = \lim_{x \rightarrow 1} f(x) = 1$.

82. Nothing can be concluded about the values of $f, g,$ and h at $x = 2$. Yes, $f(2)$ could be 0. Since the conditions of the sandwich theorem are satisfied, $\lim_{x \rightarrow 2} f(x) = -5 \neq 0$.

83. $1 = \lim_{x \rightarrow 4} \frac{f(x)-5}{x-2} = \frac{\lim_{x \rightarrow 4} f(x) - \lim_{x \rightarrow 4} 5}{\lim_{x \rightarrow 4} x - \lim_{x \rightarrow 4} 2} = \frac{\lim_{x \rightarrow 4} f(x) - 5}{4 - 2} \Rightarrow \lim_{x \rightarrow 4} f(x) - 5 = 2(1) \Rightarrow \lim_{x \rightarrow 4} f(x) = 2 + 5 = 7$.

84. (a) $1 = \lim_{x \rightarrow -2} \frac{f(x)}{x^2} = \frac{\lim_{x \rightarrow -2} f(x)}{\lim_{x \rightarrow -2} x^2} = \frac{\lim_{x \rightarrow -2} f(x)}{4} \Rightarrow \lim_{x \rightarrow -2} f(x) = 4$.

(b) $1 = \lim_{x \rightarrow -2} \frac{f(x)}{x^2} = \left[\lim_{x \rightarrow -2} \frac{f(x)}{x} \right] \left[\lim_{x \rightarrow -2} \frac{1}{x} \right] = \left[\lim_{x \rightarrow -2} \frac{f(x)}{x} \right] \left(\frac{1}{-2} \right) \Rightarrow \lim_{x \rightarrow -2} \frac{f(x)}{x} = -2$.

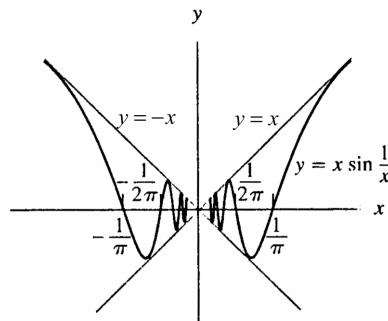
85. (a) $0 = 3 \cdot 0 = \left[\lim_{x \rightarrow 2} \frac{f(x)-5}{x-2} \right] \left[\lim_{x \rightarrow 2} (x-2) \right] = \lim_{x \rightarrow 2} \left[\left(\frac{f(x)-5}{x-2} \right) (x-2) \right] = \lim_{x \rightarrow 2} [f(x) - 5] = \lim_{x \rightarrow 2} f(x) - 5$
 $\Rightarrow \lim_{x \rightarrow 2} f(x) = 5$.

(b) $0 = 4 \cdot 0 = \left[\lim_{x \rightarrow 2} \frac{f(x)-5}{x-2} \right] \left[\lim_{x \rightarrow 2} (x-2) \right] \Rightarrow \lim_{x \rightarrow 2} f(x) = 5$ as in part (a).

86. (a) $0 = 1 \cdot 0 = \left[\lim_{x \rightarrow 0} \frac{f(x)}{x^2} \right] \left[\lim_{x \rightarrow 0} x \right]^2 = \left[\lim_{x \rightarrow 0} \frac{f(x)}{x^2} \right] \left[\lim_{x \rightarrow 0} x^2 \right] = \lim_{x \rightarrow 0} \left[\frac{f(x)}{x^2} \cdot x^2 \right] = \lim_{x \rightarrow 0} f(x)$. That is, $\lim_{x \rightarrow 0} f(x) = 0$.

(b) $0 = 1 \cdot 0 = \left[\lim_{x \rightarrow 0} \frac{f(x)}{x^2} \right] \left[\lim_{x \rightarrow 0} x \right] = \lim_{x \rightarrow 0} \left[\frac{f(x)}{x^2} \cdot x \right] = \lim_{x \rightarrow 0} \frac{f(x)}{x}$. That is, $\lim_{x \rightarrow 0} \frac{f(x)}{x} = 0$.

87. (a) $\lim_{x \rightarrow 0} x \sin \frac{1}{x} = 0$

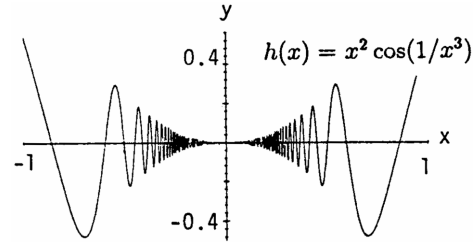


(b) $-1 \leq \sin \frac{1}{x} \leq 1$ for $x \neq 0$:

$$x > 0 \Rightarrow -x \leq x \sin \frac{1}{x} \leq x \Rightarrow \lim_{x \rightarrow 0^+} x \sin \frac{1}{x} = 0 \text{ by the sandwich theorem;}$$

$$x < 0 \Rightarrow -x \geq x \sin \frac{1}{x} \geq x \Rightarrow \lim_{x \rightarrow 0^-} x \sin \frac{1}{x} = 0 \text{ by the sandwich theorem.}$$

88. (a) $\lim_{x \rightarrow 0} x^2 \cos \left(\frac{1}{x^3} \right) = 0$



(b) $-1 \leq \cos \left(\frac{1}{x^3} \right) \leq 1$ for $x \neq 0 \Rightarrow -x^2 \leq x^2 \cos \left(\frac{1}{x^3} \right) \leq x^2 \Rightarrow \lim_{x \rightarrow 0} x^2 \cos \left(\frac{1}{x^3} \right) = 0$ by the sandwich theorem since $\lim_{x \rightarrow 0} x^2 = 0$.

89-94. Example CAS commands:

Maple:

```
f := x -> (x^4 - 16)/(x - 2);
x0 := 2;
plot( f(x), x = x0-1..x0+1, color = black,
      title = "Section 2.1, #89(a)" );
limit( f(x), x = x0 );
```

In Exercise 91, note that the standard cube root, $x^{1/3}$, is not defined for $x < 0$ in many CASs. This can be overcome in Maple by entering the function as $f := x \rightarrow (\text{surd}(x+1, 3) - 1)/x$.

Mathematica: (assigned function and values for x_0 and h may vary)

```
Clear[f, x]
f[x_]:= (x^3 - x^2 - 5x - 3)/(x + 1)^2
x0 = -1; h = 0.1;
Plot[f[x], {x, x0 - h, x0 + h}]
Limit[f[x], x -> x0]
```

2.3 THE PRECISE DEFINITION OF A LIMIT

1. $\left(\begin{array}{c} \text{---} \\ | \quad | \quad | \\ 1 \quad 5 \quad 7 \end{array} \right) \rightarrow x$

Step 1: $|x - 5| < \delta \Rightarrow -\delta < x - 5 < \delta \Rightarrow -\delta + 5 < x < \delta + 5$

Step 2: $\delta + 5 = 7 \Rightarrow \delta = 2$, or $-\delta + 5 = 1 \Rightarrow \delta = 4$.


The value of δ which assures $|x - 5| < \delta \Rightarrow 1 < x < 7$ is the smaller value, $\delta = 2$.

2. $\left(\begin{array}{c} \leftarrow \text{---} \rightarrow \\ | \quad | \quad | \\ 1 \quad 2 \quad 7 \end{array} \right) \rightarrow x$

Step 1: $|x - 2| < \delta \Rightarrow -\delta < x - 2 < \delta \Rightarrow -\delta + 2 < x < \delta + 2$

Step 2: $-\delta + 2 = 1 \Rightarrow \delta = 1$, or $\delta + 2 = 7 \Rightarrow \delta = 5$.

The value of δ which assures $|x - 2| < \delta \Rightarrow 1 < x < 7$ is the smaller value, $\delta = 1$.

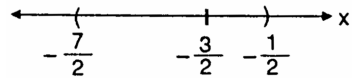
3. 

Step 1: $|x - (-3)| < \delta \Rightarrow -\delta < x + 3 < \delta \Rightarrow -\delta - 3 < x < \delta - 3$

Step 2: $-\delta - 3 = -\frac{7}{2} \Rightarrow \delta = \frac{1}{2}$, or $\delta - 3 = -\frac{1}{2} \Rightarrow \delta = \frac{5}{2}$.

The value of δ which assures $|x - (-3)| < \delta \Rightarrow -\frac{7}{2} < x < -\frac{1}{2}$ is the smaller value, $\delta = \frac{1}{2}$.

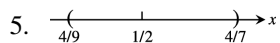
4.



Step 1: $|x - (-\frac{3}{2})| < \delta \Rightarrow -\delta < x + \frac{3}{2} < \delta \Rightarrow -\delta - \frac{3}{2} < x < \delta - \frac{3}{2}$

Step 2: $-\delta - \frac{3}{2} = -\frac{7}{2} \Rightarrow \delta = 2$, or $\delta - \frac{3}{2} = -\frac{1}{2} \Rightarrow \delta = 1$.

The value of δ which assures $|x - (-\frac{3}{2})| < \delta \Rightarrow -\frac{7}{2} < x < -\frac{1}{2}$ is the smaller value, $\delta = 1$.

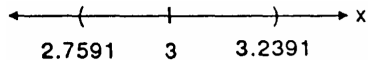
5. 

Step 1: $|x - \frac{1}{2}| < \delta \Rightarrow -\delta < x - \frac{1}{2} < \delta \Rightarrow -\delta + \frac{1}{2} < x < \delta + \frac{1}{2}$

Step 2: $-\delta + \frac{1}{2} = \frac{4}{9} \Rightarrow \delta = \frac{1}{18}$, or $\delta + \frac{1}{2} = \frac{4}{7} \Rightarrow \delta = \frac{1}{14}$.

The value of δ which assures $|x - \frac{1}{2}| < \delta \Rightarrow \frac{4}{9} < x < \frac{4}{7}$ is the smaller value, $\delta = \frac{1}{18}$.

6.



Step 1: $|x - 3| < \delta \Rightarrow -\delta < x - 3 < \delta \Rightarrow -\delta + 3 < x < \delta + 3$

Step 2: $-\delta + 3 = 2.7591 \Rightarrow \delta = 0.2409$, or $\delta + 3 = 3.2391 \Rightarrow \delta = 0.2391$.

The value of δ which assures $|x - 3| < \delta \Rightarrow 2.7591 < x < 3.2391$ is the smaller value, $\delta = 0.2391$.

7. Step 1: $|x - 5| < \delta \Rightarrow -\delta < x - 5 < \delta \Rightarrow -\delta + 5 < x < \delta + 5$

Step 2: From the graph, $-\delta + 5 = 4.9 \Rightarrow \delta = 0.1$, or $\delta + 5 = 5.1 \Rightarrow \delta = 0.1$; thus $\delta = 0.1$ in either case.

8. Step 1: $|x - (-3)| < \delta \Rightarrow -\delta < x + 3 < \delta \Rightarrow -\delta - 3 < x < \delta - 3$

Step 2: From the graph, $-\delta - 3 = -3.1 \Rightarrow \delta = 0.1$, or $\delta - 3 = -2.9 \Rightarrow \delta = 0.1$; thus $\delta = 0.1$.

9. Step 1: $|x - 1| < \delta \Rightarrow -\delta < x - 1 < \delta \Rightarrow -\delta + 1 < x < \delta + 1$

Step 2: From the graph, $-\delta + 1 = \frac{9}{16} \Rightarrow \delta = \frac{7}{16}$, or $\delta + 1 = \frac{25}{16} \Rightarrow \delta = \frac{9}{16}$; thus $\delta = \frac{7}{16}$.

10. Step 1: $|x - 3| < \delta \Rightarrow -\delta < x - 3 < \delta \Rightarrow -\delta + 3 < x < \delta + 3$

Step 2: From the graph, $-\delta + 3 = 2.61 \Rightarrow \delta = 0.39$, or $\delta + 3 = 3.41 \Rightarrow \delta = 0.41$; thus $\delta = 0.39$.

11. Step 1: $|x - 2| < \delta \Rightarrow -\delta < x - 2 < \delta \Rightarrow -\delta + 2 < x < \delta + 2$

Step 2: From the graph, $-\delta + 2 = \sqrt{3} \Rightarrow \delta = 2 - \sqrt{3} \approx 0.2679$, or $\delta + 2 = \sqrt{5} \Rightarrow \delta = \sqrt{5} - 2 \approx 0.2361$; thus $\delta = \sqrt{5} - 2$.

12. Step 1: $|x - (-1)| < \delta \Rightarrow -\delta < x + 1 < \delta \Rightarrow -\delta - 1 < x < \delta - 1$

Step 2: From the graph, $-\delta - 1 = -\frac{\sqrt{5}}{2} \Rightarrow \delta = \frac{\sqrt{5}-2}{2} \approx 0.1180$, or $\delta - 1 = -\frac{\sqrt{3}}{2} \Rightarrow \delta = \frac{2-\sqrt{3}}{2} \approx 0.1340$; thus $\delta = \frac{\sqrt{5}-2}{2}$.

13. Step 1: $|x - (-1)| < \delta \Rightarrow -\delta < x + 1 < \delta \Rightarrow -\delta - 1 < x < \delta - 1$

Step 2: From the graph, $-\delta - 1 = -\frac{16}{9} \Rightarrow \delta = \frac{7}{9} \approx 0.77$, or $\delta - 1 = -\frac{16}{25} \Rightarrow \frac{9}{25} = 0.36$; thus $\delta = \frac{9}{25} = 0.36$.

14. Step 1: $|x - \frac{1}{2}| < \delta \Rightarrow -\delta < x - \frac{1}{2} < \delta \Rightarrow -\delta + \frac{1}{2} < x < \delta + \frac{1}{2}$
 Step 2: From the graph, $-\delta + \frac{1}{2} = \frac{1}{2.01} \Rightarrow \delta = \frac{1}{2} - \frac{1}{2.01} \approx 0.00248$, or $\delta + \frac{1}{2} = \frac{1}{1.99} \Rightarrow \delta = \frac{1}{1.99} - \frac{1}{2} \approx 0.00251$; thus $\delta = 0.00248$.
15. Step 1: $|(x + 1) - 5| < 0.01 \Rightarrow |x - 4| < 0.01 \Rightarrow -0.01 < x - 4 < 0.01 \Rightarrow 3.99 < x < 4.01$
 Step 2: $|x - 4| < \delta \Rightarrow -\delta < x - 4 < \delta \Rightarrow -\delta + 4 < x < \delta + 4 \Rightarrow \delta = 0.01$.
16. Step 1: $|(2x - 2) - (-6)| < 0.02 \Rightarrow |2x + 4| < 0.02 \Rightarrow -0.02 < 2x + 4 < 0.02 \Rightarrow -4.02 < 2x < -3.98$
 $\Rightarrow -2.01 < x < -1.99$
 Step 2: $|x - (-2)| < \delta \Rightarrow -\delta < x + 2 < \delta \Rightarrow -\delta - 2 < x < \delta - 2 \Rightarrow \delta = 0.01$.
17. Step 1: $|\sqrt{x+1} - 1| < 0.1 \Rightarrow -0.1 < \sqrt{x+1} - 1 < 0.1 \Rightarrow 0.9 < \sqrt{x+1} < 1.1 \Rightarrow 0.81 < x + 1 < 1.21$
 $\Rightarrow -0.19 < x < 0.21$
 Step 2: $|x - 0| < \delta \Rightarrow -\delta < x < \delta$. Then, $-\delta = -0.19 \Rightarrow \delta = 0.19$ or $\delta = 0.21$; thus, $\delta = 0.19$.
18. Step 1: $|\sqrt{x} - \frac{1}{2}| < 0.1 \Rightarrow -0.1 < \sqrt{x} - \frac{1}{2} < 0.1 \Rightarrow 0.4 < \sqrt{x} < 0.6 \Rightarrow 0.16 < x < 0.36$
 Step 2: $|x - \frac{1}{4}| < \delta \Rightarrow -\delta < x - \frac{1}{4} < \delta \Rightarrow -\delta + \frac{1}{4} < x < \delta + \frac{1}{4}$.
 Then, $-\delta + \frac{1}{4} = 0.16 \Rightarrow \delta = 0.09$ or $\delta + \frac{1}{4} = 0.36 \Rightarrow \delta = 0.11$; thus $\delta = 0.09$.
19. Step 1: $|\sqrt{19-x} - 3| < 1 \Rightarrow -1 < \sqrt{19-x} - 3 < 1 \Rightarrow 2 < \sqrt{19-x} < 4 \Rightarrow 4 < 19 - x < 16$
 $\Rightarrow -4 > x - 19 > -16 \Rightarrow 15 > x > 3$ or $3 < x < 15$
 Step 2: $|x - 10| < \delta \Rightarrow -\delta < x - 10 < \delta \Rightarrow -\delta + 10 < x < \delta + 10$.
 Then $-\delta + 10 = 3 \Rightarrow \delta = 7$, or $\delta + 10 = 15 \Rightarrow \delta = 5$; thus $\delta = 5$.
20. Step 1: $|\sqrt{x-7} - 4| < 1 \Rightarrow -1 < \sqrt{x-7} - 4 < 1 \Rightarrow 3 < \sqrt{x-7} < 5 \Rightarrow 9 < x - 7 < 25 \Rightarrow 16 < x < 32$
 Step 2: $|x - 23| < \delta \Rightarrow -\delta < x - 23 < \delta \Rightarrow -\delta + 23 < x < \delta + 23$.
 Then $-\delta + 23 = 16 \Rightarrow \delta = 7$, or $\delta + 23 = 32 \Rightarrow \delta = 9$; thus $\delta = 7$.
21. Step 1: $|\frac{1}{x} - \frac{1}{4}| < 0.05 \Rightarrow -0.05 < \frac{1}{x} - \frac{1}{4} < 0.05 \Rightarrow 0.2 < \frac{1}{x} < 0.3 \Rightarrow \frac{10}{2} > x > \frac{10}{3}$ or $\frac{10}{3} < x < 5$.
 Step 2: $|x - 4| < \delta \Rightarrow -\delta < x - 4 < \delta \Rightarrow -\delta + 4 < x < \delta + 4$.
 Then $-\delta + 4 = \frac{10}{3}$ or $\delta = \frac{2}{3}$, or $\delta + 4 = 5$ or $\delta = 1$; thus $\delta = \frac{2}{3}$.
22. Step 1: $|x^2 - 3| < 0.1 \Rightarrow -0.1 < x^2 - 3 < 0.1 \Rightarrow 2.9 < x^2 < 3.1 \Rightarrow \sqrt{2.9} < x < \sqrt{3.1}$
 Step 2: $|x - \sqrt{3}| < \delta \Rightarrow -\delta < x - \sqrt{3} < \delta \Rightarrow -\delta + \sqrt{3} < x < \delta + \sqrt{3}$.
 Then $-\delta + \sqrt{3} = \sqrt{2.9} \Rightarrow \delta = \sqrt{3} - \sqrt{2.9} \approx 0.0291$, or $\delta + \sqrt{3} = \sqrt{3.1} \Rightarrow \delta = \sqrt{3.1} - \sqrt{3} \approx 0.0286$; thus $\delta = 0.0286$.
23. Step 1: $|x^2 - 4| < 0.5 \Rightarrow -0.5 < x^2 - 4 < 0.5 \Rightarrow 3.5 < x^2 < 4.5 \Rightarrow \sqrt{3.5} < |x| < \sqrt{4.5} \Rightarrow -\sqrt{4.5} < x < -\sqrt{3.5}$, for x near -2 .
 Step 2: $|x - (-2)| < \delta \Rightarrow -\delta < x + 2 < \delta \Rightarrow -\delta - 2 < x < \delta - 2$.
 Then $-\delta - 2 = -\sqrt{4.5} \Rightarrow \delta = \sqrt{4.5} - 2 \approx 0.1213$, or $\delta - 2 = -\sqrt{3.5} \Rightarrow \delta = 2 - \sqrt{3.5} \approx 0.1292$; thus $\delta = \sqrt{4.5} - 2 \approx 0.12$.

60 Chapter 2 Limits and Continuity

24. Step 1: $|\frac{1}{x} - (-1)| < 0.1 \Rightarrow -0.1 < \frac{1}{x} + 1 < 0.1 \Rightarrow -\frac{11}{10} < \frac{1}{x} < -\frac{9}{10} \Rightarrow -\frac{10}{11} > x > -\frac{10}{9}$ or $-\frac{10}{9} < x < -\frac{10}{11}$.
 Step 2: $|x - (-1)| < \delta \Rightarrow -\delta < x + 1 < \delta \Rightarrow -\delta - 1 < x < \delta - 1$.
 Then $-\delta - 1 = -\frac{10}{9} \Rightarrow \delta = \frac{1}{9}$, or $\delta - 1 = -\frac{10}{11} \Rightarrow \delta = \frac{1}{11}$; thus $\delta = \frac{1}{11}$.

25. Step 1: $|(x^2 - 5) - 11| < 1 \Rightarrow |x^2 - 16| < 1 \Rightarrow -1 < x^2 - 16 < 1 \Rightarrow 15 < x^2 < 17 \Rightarrow \sqrt{15} < x < \sqrt{17}$.
 Step 2: $|x - 4| < \delta \Rightarrow -\delta < x - 4 < \delta \Rightarrow -\delta + 4 < x < \delta + 4$.
 Then $-\delta + 4 = \sqrt{15} \Rightarrow \delta = 4 - \sqrt{15} \approx 0.1270$, or $\delta + 4 = \sqrt{17} \Rightarrow \delta = \sqrt{17} - 4 \approx 0.1231$;
 thus $\delta = \sqrt{17} - 4 \approx 0.12$.

26. Step 1: $|\frac{120}{x} - 5| < 1 \Rightarrow -1 < \frac{120}{x} - 5 < 1 \Rightarrow 4 < \frac{120}{x} < 6 \Rightarrow \frac{1}{4} > \frac{x}{120} > \frac{1}{6} \Rightarrow 30 > x > 20$ or $20 < x < 30$.
 Step 2: $|x - 24| < \delta \Rightarrow -\delta < x - 24 < \delta \Rightarrow -\delta + 24 < x < \delta + 24$.
 Then $-\delta + 24 = 20 \Rightarrow \delta = 4$, or $\delta + 24 = 30 \Rightarrow \delta = 6$; thus $\delta = 4$.

27. Step 1: $|mx - 2m| < 0.03 \Rightarrow -0.03 < mx - 2m < 0.03 \Rightarrow -0.03 + 2m < mx < 0.03 + 2m \Rightarrow 2 - \frac{0.03}{m} < x < 2 + \frac{0.03}{m}$.
 Step 2: $|x - 2| < \delta \Rightarrow -\delta < x - 2 < \delta \Rightarrow -\delta + 2 < x < \delta + 2$.
 Then $-\delta + 2 = 2 - \frac{0.03}{m} \Rightarrow \delta = \frac{0.03}{m}$, or $\delta + 2 = 2 + \frac{0.03}{m} \Rightarrow \delta = \frac{0.03}{m}$. In either case, $\delta = \frac{0.03}{m}$.

28. Step 1: $|mx - 3m| < c \Rightarrow -c < mx - 3m < c \Rightarrow -c + 3m < mx < c + 3m \Rightarrow 3 - \frac{c}{m} < x < 3 + \frac{c}{m}$.
 Step 2: $|x - 3| < \delta \Rightarrow -\delta < x - 3 < \delta \Rightarrow -\delta + 3 < x < \delta + 3$.
 Then $-\delta + 3 = 3 - \frac{c}{m} \Rightarrow \delta = \frac{c}{m}$, or $\delta + 3 = 3 + \frac{c}{m} \Rightarrow \delta = \frac{c}{m}$. In either case, $\delta = \frac{c}{m}$.

29. Step 1: $|(mx + b) - (\frac{m}{2} + b)| < c \Rightarrow -c < mx - \frac{m}{2} < c \Rightarrow -c + \frac{m}{2} < mx < c + \frac{m}{2} \Rightarrow \frac{1}{2} - \frac{c}{m} < x < \frac{1}{2} + \frac{c}{m}$.
 Step 2: $|x - \frac{1}{2}| < \delta \Rightarrow -\delta < x - \frac{1}{2} < \delta \Rightarrow -\delta + \frac{1}{2} < x < \delta + \frac{1}{2}$.
 Then $-\delta + \frac{1}{2} = \frac{1}{2} - \frac{c}{m} \Rightarrow \delta = \frac{c}{m}$, or $\delta + \frac{1}{2} = \frac{1}{2} + \frac{c}{m} \Rightarrow \delta = \frac{c}{m}$. In either case, $\delta = \frac{c}{m}$.

30. Step 1: $|(mx + b) - (m + b)| < 0.05 \Rightarrow -0.05 < mx - m < 0.05 \Rightarrow -0.05 + m < mx < 0.05 + m \Rightarrow 1 - \frac{0.05}{m} < x < 1 + \frac{0.05}{m}$.
 Step 2: $|x - 1| < \delta \Rightarrow -\delta < x - 1 < \delta \Rightarrow -\delta + 1 < x < \delta + 1$.
 Then $-\delta + 1 = 1 - \frac{0.05}{m} \Rightarrow \delta = \frac{0.05}{m}$, or $\delta + 1 = 1 + \frac{0.05}{m} \Rightarrow \delta = \frac{0.05}{m}$. In either case, $\delta = \frac{0.05}{m}$.

31. $\lim_{x \rightarrow 3} (3 - 2x) = 3 - 2(3) = -3$

Step 1: $|(3 - 2x) - (-3)| < 0.02 \Rightarrow -0.02 < 6 - 2x < 0.02 \Rightarrow -6.02 < -2x < -5.98 \Rightarrow 3.01 > x > 2.99$ or $2.99 < x < 3.01$.

Step 2: $0 < |x - 3| < \delta \Rightarrow -\delta < x - 3 < \delta \Rightarrow -\delta + 3 < x < \delta + 3$.

Then $-\delta + 3 = 2.99 \Rightarrow \delta = 0.01$, or $\delta + 3 = 3.01 \Rightarrow \delta = 0.01$; thus $\delta = 0.01$.

32. $\lim_{x \rightarrow -1} (-3x - 2) = (-3)(-1) - 2 = 1$

Step 1: $|(-3x - 2) - 1| < 0.03 \Rightarrow -0.03 < -3x - 3 < 0.03 \Rightarrow 0.01 > x + 1 > -0.01 \Rightarrow -1.01 < x < -0.99$.

Step 2: $|x - (-1)| < \delta \Rightarrow -\delta < x + 1 < \delta \Rightarrow -\delta - 1 < x < \delta - 1$.

Then $-\delta - 1 = -1.01 \Rightarrow \delta = 0.01$, or $\delta - 1 = -0.99 \Rightarrow \delta = 0.01$; thus $\delta = 0.01$.

33. $\lim_{x \rightarrow 2} \frac{x^2 - 4}{x - 2} = \lim_{x \rightarrow 2} \frac{(x + 2)(x - 2)}{(x - 2)} = \lim_{x \rightarrow 2} (x + 2) = 2 + 2 = 4, x \neq 2$

Step 1: $\left| \left(\frac{x^2 - 4}{x - 2} \right) - 4 \right| < 0.05 \Rightarrow -0.05 < \frac{(x + 2)(x - 2)}{(x - 2)} - 4 < 0.05 \Rightarrow 3.95 < x + 2 < 4.05, x \neq 2 \Rightarrow 1.95 < x < 2.05, x \neq 2$.

Step 2: $|x - 2| < \delta \Rightarrow -\delta < x - 2 < \delta \Rightarrow -\delta + 2 < x < \delta + 2$.
Then $-\delta + 2 = 1.95 \Rightarrow \delta = 0.05$, or $\delta + 2 = 2.05 \Rightarrow \delta = 0.05$; thus $\delta = 0.05$.

$$34. \lim_{x \rightarrow -5} \frac{x^2 + 6x + 5}{x + 5} = \lim_{x \rightarrow -5} \frac{(x+5)(x+1)}{(x+5)} = \lim_{x \rightarrow -5} (x + 1) = -4, x \neq -5.$$

Step 1: $\left| \left(\frac{x^2 + 6x + 5}{x + 5} \right) - (-4) \right| < 0.05 \Rightarrow -0.05 < \frac{(x+5)(x+1)}{(x+5)} + 4 < 0.05 \Rightarrow -4.05 < x + 1 < -3.95, x \neq -5$
 $\Rightarrow -5.05 < x < -4.95, x \neq -5$.

Step 2: $|x - (-5)| < \delta \Rightarrow -\delta < x + 5 < \delta \Rightarrow -\delta - 5 < x < \delta - 5$.
Then $-\delta - 5 = -5.05 \Rightarrow \delta = 0.05$, or $\delta - 5 = -4.95 \Rightarrow \delta = 0.05$; thus $\delta = 0.05$.

$$35. \lim_{x \rightarrow -3} \sqrt{1 - 5x} = \sqrt{1 - 5(-3)} = \sqrt{16} = 4$$

Step 1: $|\sqrt{1 - 5x} - 4| < 0.5 \Rightarrow -0.5 < \sqrt{1 - 5x} - 4 < 0.5 \Rightarrow 3.5 < \sqrt{1 - 5x} < 4.5 \Rightarrow 12.25 < 1 - 5x < 20.25$
 $\Rightarrow 11.25 < -5x < 19.25 \Rightarrow -3.85 < x < -2.25$.

Step 2: $|x - (-3)| < \delta \Rightarrow -\delta < x + 3 < \delta \Rightarrow -\delta - 3 < x < \delta - 3$.
Then $-\delta - 3 = -3.85 \Rightarrow \delta = 0.85$, or $\delta - 3 = -2.25 \Rightarrow \delta = 0.75$; thus $\delta = 0.75$.

$$36. \lim_{x \rightarrow 2} \frac{4}{x} = \frac{4}{2} = 2$$

Step 1: $\left| \frac{4}{x} - 2 \right| < 0.4 \Rightarrow -0.4 < \frac{4}{x} - 2 < 0.4 \Rightarrow 1.6 < \frac{4}{x} < 2.4 \Rightarrow \frac{10}{16} > \frac{x}{4} > \frac{10}{24} \Rightarrow \frac{10}{4} > x > \frac{10}{6}$ or $\frac{5}{3} < x < \frac{5}{2}$.

Step 2: $|x - 2| < \delta \Rightarrow -\delta < x - 2 < \delta \Rightarrow -\delta + 2 < x < \delta + 2$.
Then $-\delta + 2 = \frac{5}{3} \Rightarrow \delta = \frac{1}{3}$, or $\delta + 2 = \frac{5}{2} \Rightarrow \delta = \frac{1}{2}$; thus $\delta = \frac{1}{3}$.

37. Step 1: $|(9 - x) - 5| < \epsilon \Rightarrow -\epsilon < 4 - x < \epsilon \Rightarrow -\epsilon - 4 < -x < \epsilon - 4 \Rightarrow \epsilon + 4 > x > 4 - \epsilon \Rightarrow 4 - \epsilon < x < 4 + \epsilon$.

Step 2: $|x - 4| < \delta \Rightarrow -\delta < x - 4 < \delta \Rightarrow -\delta + 4 < x < \delta + 4$.
Then $-\delta + 4 = \epsilon + 4 \Rightarrow \delta = \epsilon$, or $\delta + 4 = 4 - \epsilon \Rightarrow \delta = -\epsilon$. Thus choose $\delta = \epsilon$.

38. Step 1: $|(3x - 7) - 2| < \epsilon \Rightarrow -\epsilon < 3x - 9 < \epsilon \Rightarrow 9 - \epsilon < 3x < 9 + \epsilon \Rightarrow 3 - \frac{\epsilon}{3} < x < 3 + \frac{\epsilon}{3}$.

Step 2: $|x - 3| < \delta \Rightarrow -\delta < x - 3 < \delta \Rightarrow -\delta + 3 < x < \delta + 3$.
Then $-\delta + 3 = 3 - \frac{\epsilon}{3} \Rightarrow \delta = \frac{\epsilon}{3}$, or $\delta + 3 = 3 + \frac{\epsilon}{3} \Rightarrow \delta = \frac{\epsilon}{3}$. Thus choose $\delta = \frac{\epsilon}{3}$.

39. Step 1: $|\sqrt{x - 5} - 2| < \epsilon \Rightarrow -\epsilon < \sqrt{x - 5} - 2 < \epsilon \Rightarrow 2 - \epsilon < \sqrt{x - 5} < 2 + \epsilon \Rightarrow (2 - \epsilon)^2 < x - 5 < (2 + \epsilon)^2$
 $\Rightarrow (2 - \epsilon)^2 + 5 < x < (2 + \epsilon)^2 + 5$.

Step 2: $|x - 9| < \delta \Rightarrow -\delta < x - 9 < \delta \Rightarrow -\delta + 9 < x < \delta + 9$.
Then $-\delta + 9 = \epsilon^2 - 4\epsilon + 9 \Rightarrow \delta = 4\epsilon - \epsilon^2$, or $\delta + 9 = \epsilon^2 + 4\epsilon + 9 \Rightarrow \delta = 4\epsilon + \epsilon^2$. Thus choose the smaller distance, $\delta = 4\epsilon - \epsilon^2$.

40. Step 1: $|\sqrt{4 - x} - 2| < \epsilon \Rightarrow -\epsilon < \sqrt{4 - x} - 2 < \epsilon \Rightarrow 2 - \epsilon < \sqrt{4 - x} < 2 + \epsilon \Rightarrow (2 - \epsilon)^2 < 4 - x < (2 + \epsilon)^2$
 $\Rightarrow -(2 + \epsilon)^2 < x - 4 < -(2 - \epsilon)^2 \Rightarrow -(2 + \epsilon)^2 + 4 < x < -(2 - \epsilon)^2 + 4$.

Step 2: $|x - 0| < \delta \Rightarrow -\delta < x < \delta$.
Then $-\delta = -(2 + \epsilon)^2 + 4 = -\epsilon^2 - 4\epsilon \Rightarrow \delta = 4\epsilon + \epsilon^2$, or $\delta = -(2 - \epsilon)^2 + 4 = 4\epsilon - \epsilon^2$. Thus choose the smaller distance, $\delta = 4\epsilon - \epsilon^2$.

41. Step 1: For $x \neq 1$, $|x^2 - 1| < \epsilon \Rightarrow -\epsilon < x^2 - 1 < \epsilon \Rightarrow 1 - \epsilon < x^2 < 1 + \epsilon \Rightarrow \sqrt{1 - \epsilon} < |x| < \sqrt{1 + \epsilon}$
 $\Rightarrow \sqrt{1 - \epsilon} < x < \sqrt{1 + \epsilon}$ near $x = 1$.

Step 2: $|x - 1| < \delta \Rightarrow -\delta < x - 1 < \delta \Rightarrow -\delta + 1 < x < \delta + 1$.
Then $-\delta + 1 = \sqrt{1 - \epsilon} \Rightarrow \delta = 1 - \sqrt{1 - \epsilon}$, or $\delta + 1 = \sqrt{1 + \epsilon} \Rightarrow \delta = \sqrt{1 + \epsilon} - 1$. Choose $\delta = \min \left\{ 1 - \sqrt{1 - \epsilon}, \sqrt{1 + \epsilon} - 1 \right\}$, that is, the smaller of the two distances.

42. Step 1: For $x \neq -2$, $|x^2 - 4| < \epsilon \Rightarrow -\epsilon < x^2 - 4 < \epsilon \Rightarrow 4 - \epsilon < x^2 < 4 + \epsilon \Rightarrow \sqrt{4 - \epsilon} < |x| < \sqrt{4 + \epsilon}$
 $\Rightarrow -\sqrt{4 + \epsilon} < x < -\sqrt{4 - \epsilon}$ near $x = -2$.

Step 2: $|x - (-2)| < \delta \Rightarrow -\delta < x + 2 < \delta \Rightarrow -\delta - 2 < x < \delta - 2$.

Then $-\delta - 2 = -\sqrt{4 + \epsilon} \Rightarrow \delta = \sqrt{4 + \epsilon} - 2$, or $\delta - 2 = -\sqrt{4 - \epsilon} \Rightarrow \delta = 2 - \sqrt{4 - \epsilon}$. Choose $\delta = \min \left\{ \sqrt{4 + \epsilon} - 2, 2 - \sqrt{4 - \epsilon} \right\}$.

43. Step 1: $\left| \frac{1}{x} - 1 \right| < \epsilon \Rightarrow -\epsilon < \frac{1}{x} - 1 < \epsilon \Rightarrow 1 - \epsilon < \frac{1}{x} < 1 + \epsilon \Rightarrow \frac{1}{1 + \epsilon} < x < \frac{1}{1 - \epsilon}$.

Step 2: $|x - 1| < \delta \Rightarrow -\delta < x - 1 < \delta \Rightarrow 1 - \delta < x < 1 + \delta$.

Then $1 - \delta = \frac{1}{1 + \epsilon} \Rightarrow \delta = 1 - \frac{1}{1 + \epsilon} = \frac{\epsilon}{1 + \epsilon}$, or $1 + \delta = \frac{1}{1 - \epsilon} \Rightarrow \delta = \frac{1}{1 - \epsilon} - 1 = \frac{\epsilon}{1 - \epsilon}$.

Choose $\delta = \frac{\epsilon}{1 + \epsilon}$, the smaller of the two distances.

44. Step 1: $\left| \frac{1}{x^2} - \frac{1}{3} \right| < \epsilon \Rightarrow -\epsilon < \frac{1}{x^2} - \frac{1}{3} < \epsilon \Rightarrow \frac{1}{3} - \epsilon < \frac{1}{x^2} < \frac{1}{3} + \epsilon \Rightarrow \frac{1 - 3\epsilon}{3} < \frac{1}{x^2} < \frac{1 + 3\epsilon}{3} \Rightarrow \frac{3}{1 - 3\epsilon} > x^2 > \frac{3}{1 + 3\epsilon}$
 $\Rightarrow \sqrt{\frac{3}{1 + 3\epsilon}} < |x| < \sqrt{\frac{3}{1 - 3\epsilon}}$, or $\sqrt{\frac{3}{1 + 3\epsilon}} < x < \sqrt{\frac{3}{1 - 3\epsilon}}$ for x near $\sqrt{3}$.

Step 2: $|x - \sqrt{3}| < \delta \Rightarrow -\delta < x - \sqrt{3} < \delta \Rightarrow \sqrt{3} - \delta < x < \sqrt{3} + \delta$.

Then $\sqrt{3} - \delta = \sqrt{\frac{3}{1 + 3\epsilon}} \Rightarrow \delta = \sqrt{3} - \sqrt{\frac{3}{1 + 3\epsilon}}$, or $\sqrt{3} + \delta = \sqrt{\frac{3}{1 - 3\epsilon}} \Rightarrow \delta = \sqrt{\frac{3}{1 - 3\epsilon}} - \sqrt{3}$.

Choose $\delta = \min \left\{ \sqrt{3} - \sqrt{\frac{3}{1 + 3\epsilon}}, \sqrt{\frac{3}{1 - 3\epsilon}} - \sqrt{3} \right\}$.

45. Step 1: $\left| \left(\frac{x^2 - 9}{x + 3} \right) - (-6) \right| < \epsilon \Rightarrow -\epsilon < (x - 3) + 6 < \epsilon, x \neq -3 \Rightarrow -\epsilon < x + 3 < \epsilon \Rightarrow -\epsilon - 3 < x < \epsilon - 3$.

Step 2: $|x - (-3)| < \delta \Rightarrow -\delta < x + 3 < \delta \Rightarrow -\delta - 3 < x < \delta - 3$.

Then $-\delta - 3 = -\epsilon - 3 \Rightarrow \delta = \epsilon$, or $\delta - 3 = \epsilon - 3 \Rightarrow \delta = \epsilon$. Choose $\delta = \epsilon$.

46. Step 1: $\left| \left(\frac{x^2 - 1}{x - 1} \right) - 2 \right| < \epsilon \Rightarrow -\epsilon < (x + 1) - 2 < \epsilon, x \neq 1 \Rightarrow 1 - \epsilon < x < 1 + \epsilon$.

Step 2: $|x - 1| < \delta \Rightarrow -\delta < x - 1 < \delta \Rightarrow 1 - \delta < x < 1 + \delta$.

Then $1 - \delta = 1 - \epsilon \Rightarrow \delta = \epsilon$, or $1 + \delta = 1 + \epsilon \Rightarrow \delta = \epsilon$. Choose $\delta = \epsilon$.

47. Step 1: $x < 1$: $|(4 - 2x) - 2| < \epsilon \Rightarrow 0 < 2 - 2x < \epsilon$ since $x < 1$. Thus, $1 - \frac{\epsilon}{2} < x < 0$;
 $x \geq 1$: $|(6x - 4) - 2| < \epsilon \Rightarrow 0 \leq 6x - 6 < \epsilon$ since $x \geq 1$. Thus, $1 \leq x < 1 + \frac{\epsilon}{6}$.

Step 2: $|x - 1| < \delta \Rightarrow -\delta < x - 1 < \delta \Rightarrow 1 - \delta < x < 1 + \delta$.

Then $1 - \delta = 1 - \frac{\epsilon}{2} \Rightarrow \delta = \frac{\epsilon}{2}$, or $1 + \delta = 1 + \frac{\epsilon}{6} \Rightarrow \delta = \frac{\epsilon}{6}$. Choose $\delta = \frac{\epsilon}{6}$.

48. Step 1: $x < 0$: $|2x - 0| < \epsilon \Rightarrow -\epsilon < 2x < 0 \Rightarrow -\frac{\epsilon}{2} < x < 0$;

$x \geq 0$: $\left| \frac{x}{2} - 0 \right| < \epsilon \Rightarrow 0 \leq x < 2\epsilon$.

Step 2: $|x - 0| < \delta \Rightarrow -\delta < x < \delta$.

Then $-\delta = -\frac{\epsilon}{2} \Rightarrow \delta = \frac{\epsilon}{2}$, or $\delta = 2\epsilon \Rightarrow \delta = 2\epsilon$. Choose $\delta = \frac{\epsilon}{2}$.

49. By the figure, $-x \leq x \sin \frac{1}{x} \leq x$ for all $x > 0$ and $-x \geq x \sin \frac{1}{x} \geq x$ for $x < 0$. Since $\lim_{x \rightarrow 0} (-x) = \lim_{x \rightarrow 0} x = 0$, then by the sandwich theorem, in either case, $\lim_{x \rightarrow 0} x \sin \frac{1}{x} = 0$.

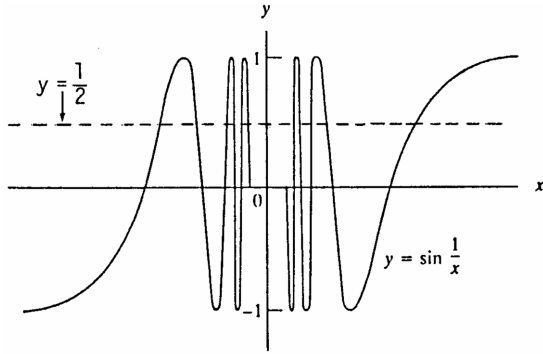
50. By the figure, $-x^2 \leq x^2 \sin \frac{1}{x} \leq x^2$ for all x except possibly at $x = 0$. Since $\lim_{x \rightarrow 0} (-x^2) = \lim_{x \rightarrow 0} x^2 = 0$, then by the sandwich theorem, $\lim_{x \rightarrow 0} x^2 \sin \frac{1}{x} = 0$.

51. As x approaches the value 0, the values of $g(x)$ approach k . Thus for every number $\epsilon > 0$, there exists a $\delta > 0$ such that $0 < |x - 0| < \delta \Rightarrow |g(x) - k| < \epsilon$.

52. Write $x = h + c$. Then $0 < |x - c| < \delta \Leftrightarrow -\delta < x - c < \delta, x \neq c \Leftrightarrow -\delta < (h + c) - c < \delta, h + c \neq c$
 $\Leftrightarrow -\delta < h < \delta, h \neq 0 \Leftrightarrow 0 < |h - 0| < \delta$.
 Thus, $\lim_{x \rightarrow c} f(x) = L \Leftrightarrow$ for any $\epsilon > 0$, there exists $\delta > 0$ such that $|f(x) - L| < \epsilon$ whenever $0 < |x - c| < \delta$
 $\Leftrightarrow |f(h + c) - L| < \epsilon$ whenever $0 < |h - 0| < \delta \Leftrightarrow \lim_{h \rightarrow 0} f(h + c) = L$.

53. Let $f(x) = x^2$. The function values do get closer to -1 as x approaches 0 , but $\lim_{x \rightarrow 0} f(x) = 0$, not -1 . The function $f(x) = x^2$ never gets arbitrarily close to -1 for x near 0 .

54. Let $f(x) = \sin x, L = \frac{1}{2}$, and $x_0 = 0$. There exists a value of x (namely, $x = \frac{\pi}{6}$) for which $|\sin x - \frac{1}{2}| < \epsilon$ for any given $\epsilon > 0$. However, $\lim_{x \rightarrow 0} \sin x = 0$, not $\frac{1}{2}$. The wrong statement does not require x to be arbitrarily close to x_0 . As another example, let $g(x) = \sin \frac{1}{x}, L = \frac{1}{2}$, and $x_0 = 0$. We can choose infinitely many values of x near 0 such that $\sin \frac{1}{x} = \frac{1}{2}$ as you can see from the accompanying figure. However, $\lim_{x \rightarrow 0} \sin \frac{1}{x}$ fails to exist. The wrong statement does not require all values of x arbitrarily close to $x_0 = 0$ to lie within $\epsilon > 0$ of $L = \frac{1}{2}$. Again you can see from the figure that there are also infinitely many values of x near 0 such that $\sin \frac{1}{x} = 0$. If we choose $\epsilon < \frac{1}{4}$ we cannot satisfy the inequality $|\sin \frac{1}{x} - \frac{1}{2}| < \epsilon$ for all values of x sufficiently near $x_0 = 0$.



55. $|A - 9| \leq 0.01 \Rightarrow -0.01 \leq \pi \left(\frac{x}{2}\right)^2 - 9 \leq 0.01 \Rightarrow 8.99 \leq \frac{\pi x^2}{4} \leq 9.01 \Rightarrow \frac{4}{\pi}(8.99) \leq x^2 \leq \frac{4}{\pi}(9.01)$
 $\Rightarrow 2\sqrt{\frac{8.99}{\pi}} \leq x \leq 2\sqrt{\frac{9.01}{\pi}}$ or $3.384 \leq x \leq 3.387$. To be safe, the left endpoint was rounded up and the right endpoint was rounded down.

56. $V = RI \Rightarrow \frac{V}{R} = I \Rightarrow \left|\frac{V}{R} - 5\right| \leq 0.1 \Rightarrow -0.1 \leq \frac{120}{R} - 5 \leq 0.1 \Rightarrow 4.9 \leq \frac{120}{R} \leq 5.1 \Rightarrow \frac{10}{49} \geq \frac{R}{120} \geq \frac{10}{51} \Rightarrow$
 $\frac{(120)(10)}{51} \leq R \leq \frac{(120)(10)}{49} \Rightarrow 23.53 \leq R \leq 24.48$.

To be safe, the left endpoint was rounded up and the right endpoint was rounded down.

57. (a) $-\delta < x - 1 < 0 \Rightarrow 1 - \delta < x < 1 \Rightarrow f(x) = x$. Then $|f(x) - 2| = |x - 2| = 2 - x > 2 - 1 = 1$. That is, $|f(x) - 2| \geq 1 \geq \frac{1}{2}$ no matter how small δ is taken when $1 - \delta < x < 1 \Rightarrow \lim_{x \rightarrow 1} f(x) \neq 2$.
 (b) $0 < x - 1 < \delta \Rightarrow 1 < x < 1 + \delta \Rightarrow f(x) = x + 1$. Then $|f(x) - 1| = |(x + 1) - 1| = |x| = x > 1$. That is, $|f(x) - 1| \geq 1$ no matter how small δ is taken when $1 < x < 1 + \delta \Rightarrow \lim_{x \rightarrow 1} f(x) \neq 1$.
 (c) $-\delta < x - 1 < 0 \Rightarrow 1 - \delta < x < 1 \Rightarrow f(x) = x$. Then $|f(x) - 1.5| = |x - 1.5| = 1.5 - x > 1.5 - 1 = 0.5$. Also, $0 < x - 1 < \delta \Rightarrow 1 < x < 1 + \delta \Rightarrow f(x) = x + 1$. Then $|f(x) - 1.5| = |(x + 1) - 1.5| = |x - 0.5| = x - 0.5 > 1 - 0.5 = 0.5$. Thus, no matter how small δ is taken, there exists a value of x such that $-\delta < x - 1 < \delta$ but $|f(x) - 1.5| \geq \frac{1}{2} \Rightarrow \lim_{x \rightarrow 1} f(x) \neq 1.5$.

58. (a) For $2 < x < 2 + \delta \Rightarrow h(x) = 2 \Rightarrow |h(x) - 4| = 2$. Thus for $\epsilon < 2, |h(x) - 4| \geq \epsilon$ whenever $2 < x < 2 + \delta$ no matter how small we choose $\delta > 0 \Rightarrow \lim_{x \rightarrow 2} h(x) \neq 4$.

- (b) For $2 < x < 2 + \delta \Rightarrow h(x) = 2 \Rightarrow |h(x) - 3| = 1$. Thus for $\epsilon < 1$, $|h(x) - 3| \geq \epsilon$ whenever $2 < x < 2 + \delta$ no matter how small we choose $\delta > 0 \Rightarrow \lim_{x \rightarrow 2} h(x) \neq 3$.
- (c) For $2 - \delta < x < 2 \Rightarrow h(x) = x^2$ so $|h(x) - 2| = |x^2 - 2|$. No matter how small $\delta > 0$ is chosen, x^2 is close to 4 when x is near 2 and to the left on the real line $\Rightarrow |x^2 - 2|$ will be close to 2. Thus if $\epsilon < 1$, $|h(x) - 2| \geq \epsilon$ whenever $2 - \delta < x < 2$ no matter how small we choose $\delta > 0 \Rightarrow \lim_{x \rightarrow 2} h(x) \neq 2$.
59. (a) For $3 - \delta < x < 3 \Rightarrow f(x) > 4.8 \Rightarrow |f(x) - 4| \geq 0.8$. Thus for $\epsilon < 0.8$, $|f(x) - 4| \geq \epsilon$ whenever $3 - \delta < x < 3$ no matter how small we choose $\delta > 0 \Rightarrow \lim_{x \rightarrow 3} f(x) \neq 4$.
- (b) For $3 < x < 3 + \delta \Rightarrow f(x) < 3 \Rightarrow |f(x) - 4.8| \geq 1.8$. Thus for $\epsilon < 1.8$, $|f(x) - 4.8| \geq \epsilon$ whenever $3 < x < 3 + \delta$ no matter how small we choose $\delta > 0 \Rightarrow \lim_{x \rightarrow 3} f(x) \neq 4.8$.
- (c) For $3 - \delta < x < 3 \Rightarrow f(x) > 4.8 \Rightarrow |f(x) - 3| \geq 1.8$. Again, for $\epsilon < 1.8$, $|f(x) - 3| \geq \epsilon$ whenever $3 - \delta < x < 3$ no matter how small we choose $\delta > 0 \Rightarrow \lim_{x \rightarrow 3} f(x) \neq 3$.
60. (a) No matter how small we choose $\delta > 0$, for x near -1 satisfying $-1 - \delta < x < -1 + \delta$, the values of $g(x)$ are near 1 $\Rightarrow |g(x) - 2|$ is near 1. Then, for $\epsilon = \frac{1}{2}$ we have $|g(x) - 2| \geq \frac{1}{2}$ for some x satisfying $-1 - \delta < x < -1 + \delta$, or $0 < |x + 1| < \delta \Rightarrow \lim_{x \rightarrow -1} g(x) \neq 2$.
- (b) Yes, $\lim_{x \rightarrow -1} g(x) = 1$ because from the graph we can find a $\delta > 0$ such that $|g(x) - 1| < \epsilon$ if $0 < |x - (-1)| < \delta$.

61-66. Example CAS commands (values of del may vary for a specified eps):

Maple:

```
f := x -> (x^4-81)/(x-3); x0 := 3;
plot( f(x), x=x0-1..x0+1, color=black, # (a)
      title="Section 2.3, #61(a)");
L := limit( f(x), x=x0 ); # (b)
epsilon := 0.2; # (c)
plot( [f(x),L-epsilon,L+epsilon], x=x0-0.01..x0+0.01,
      color=black, linestyle=[1,3,3], title="Section 2.3, #61(c)");
q := fsolve( abs( f(x)-L ) = epsilon, x=x0-1..x0+1 ); # (d)
delta := abs(x0-q);
plot( [f(x),L-epsilon,L+epsilon], x=x0-delta..x0+delta, color=black, title="Section 2.3, #61(d)");
for eps in [0.1, 0.005, 0.001 ] do # (e)
  q := fsolve( abs( f(x)-L ) = eps, x=x0-1..x0+1 );
  delta := abs(x0-q);
  head := sprintf("Section 2.3, #61(e)\n epsilon = %5f, delta = %5f\n", eps, delta);
  print(plot( [f(x),L-eps,L+eps], x=x0-delta..x0+delta,
              color=black, linestyle=[1,3,3], title=head ));
end do;
```

Mathematica (assigned function and values for x0, eps and del may vary):

```
Clear[f, x]
y1 := L - eps; y2 := L + eps; x0 = 1;
f[x_] := (3x^2 - (7x + 1)Sqrt[x] + 5)/(x - 1)
Plot[f[x], {x, x0 - 0.2, x0 + 0.2}]
L := Limit[f[x], x -> x0]
eps = 0.1; del = 0.2;
Plot[{f[x], y1, y2}, {x, x0 - del, x0 + del}, PlotRange -> {L - 2eps, L + 2eps}]
```

2.4 ONE-SIDED LIMITS AND LIMITS AT INFINITY

1. (a) True (b) True (c) False (d) True
 (e) True (f) True (g) False (h) False
 (i) False (j) False (k) True (l) False

2. (a) True (b) False (c) False (d) True
 (e) True (f) True (g) True (h) True
 (i) True (j) False (k) True

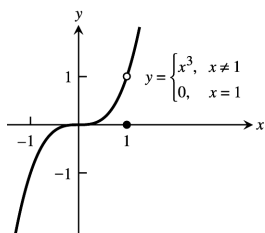
3. (a) $\lim_{x \rightarrow 2^+} f(x) = \frac{2}{2} + 1 = 2$, $\lim_{x \rightarrow 2^-} f(x) = 3 - 2 = 1$
 (b) No, $\lim_{x \rightarrow 2} f(x)$ does not exist because $\lim_{x \rightarrow 2^+} f(x) \neq \lim_{x \rightarrow 2^-} f(x)$
 (c) $\lim_{x \rightarrow 4^-} f(x) = \frac{4}{2} + 1 = 3$, $\lim_{x \rightarrow 4^+} f(x) = \frac{4}{2} + 1 = 3$
 (d) Yes, $\lim_{x \rightarrow 4} f(x) = 3$ because $3 = \lim_{x \rightarrow 4^-} f(x) = \lim_{x \rightarrow 4^+} f(x)$

4. (a) $\lim_{x \rightarrow 2^+} f(x) = \frac{2}{2} = 1$, $\lim_{x \rightarrow 2^-} f(x) = 3 - 2 = 1$, $f(2) = 2$
 (b) Yes, $\lim_{x \rightarrow 2} f(x) = 1$ because $1 = \lim_{x \rightarrow 2^+} f(x) = \lim_{x \rightarrow 2^-} f(x)$
 (c) $\lim_{x \rightarrow -1^-} f(x) = 3 - (-1) = 4$, $\lim_{x \rightarrow -1^+} f(x) = 3 - (-1) = 4$
 (d) Yes, $\lim_{x \rightarrow -1} f(x) = 4$ because $4 = \lim_{x \rightarrow -1^-} f(x) = \lim_{x \rightarrow -1^+} f(x)$

5. (a) No, $\lim_{x \rightarrow 0^+} f(x)$ does not exist since $\sin\left(\frac{1}{x}\right)$ does not approach any single value as x approaches 0
 (b) $\lim_{x \rightarrow 0^-} f(x) = \lim_{x \rightarrow 0^-} 0 = 0$
 (c) $\lim_{x \rightarrow 0} f(x)$ does not exist because $\lim_{x \rightarrow 0^+} f(x)$ does not exist

6. (a) Yes, $\lim_{x \rightarrow 0^+} g(x) = 0$ by the sandwich theorem since $-\sqrt{x} \leq g(x) \leq \sqrt{x}$ when $x > 0$
 (b) No, $\lim_{x \rightarrow 0^-} g(x)$ does not exist since \sqrt{x} is not defined for $x < 0$
 (c) No, $\lim_{x \rightarrow 0} g(x)$ does not exist since $\lim_{x \rightarrow 0^-} g(x)$ does not exist

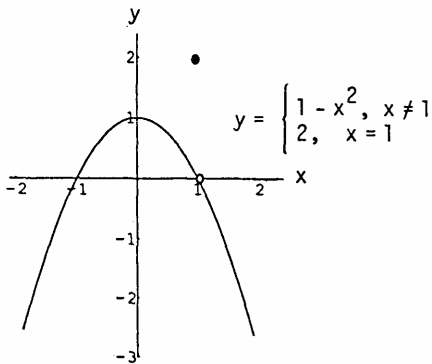
7. (a)



(b) $\lim_{x \rightarrow 1^-} f(x) = 1 = \lim_{x \rightarrow 1^+} f(x)$

- (c) Yes, $\lim_{x \rightarrow 1} f(x) = 1$ since the right-hand and left-hand limits exist and equal 1

8. (a)



(b) $\lim_{x \rightarrow 1^+} f(x) = 0 = \lim_{x \rightarrow 1^-} f(x)$

(c) Yes, $\lim_{x \rightarrow 1} f(x) = 0$ since the right-hand and left-hand limits exist and equal 0

9. (a) domain: $0 \leq x \leq 2$

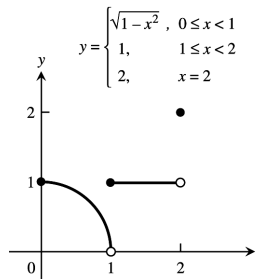
range: $0 < y \leq 1$ and $y = 2$

(b) $\lim_{x \rightarrow c} f(x)$ exists for c belonging to

$(0, 1) \cup (1, 2)$

(c) $x = 2$

(d) $x = 0$



10. (a) domain: $-\infty < x < \infty$

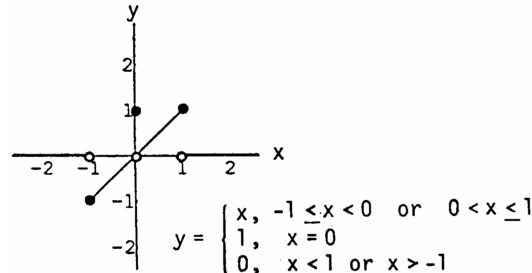
range: $-1 \leq y \leq 1$

(b) $\lim_{x \rightarrow c} f(x)$ exists for c belonging to

$(-\infty, -1) \cup (-1, 1) \cup (1, \infty)$

(c) none

(d) none



11. $\lim_{x \rightarrow -0.5^-} \sqrt{\frac{x+2}{x-1}} = \sqrt{\frac{-0.5+2}{-0.5-1}} = \sqrt{\frac{3/2}{-3/2}} = \sqrt{3}$

12. $\lim_{x \rightarrow 1^+} \sqrt{\frac{x-1}{x+2}} = \sqrt{\frac{1-1}{1+2}} = \sqrt{0} = 0$

13. $\lim_{x \rightarrow -2^+} \left(\frac{x}{x+1}\right) \left(\frac{2x+5}{x^2+x}\right) = \left(\frac{-2}{-2+1}\right) \left(\frac{2(-2)+5}{(-2)^2+(-2)}\right) = (2) \left(\frac{1}{2}\right) = 1$

14. $\lim_{x \rightarrow 1^-} \left(\frac{1}{x+1}\right) \left(\frac{x+6}{x}\right) \left(\frac{3-x}{7}\right) = \left(\frac{1}{1+1}\right) \left(\frac{1+6}{1}\right) \left(\frac{3-1}{7}\right) = \left(\frac{1}{2}\right) \left(\frac{7}{1}\right) \left(\frac{2}{7}\right) = 1$

15. $\lim_{h \rightarrow 0^+} \frac{\sqrt{h^2+4h+5}-\sqrt{5}}{h} = \lim_{h \rightarrow 0^+} \left(\frac{\sqrt{h^2+4h+5}-\sqrt{5}}{h}\right) \left(\frac{\sqrt{h^2+4h+5}+\sqrt{5}}{\sqrt{h^2+4h+5}+\sqrt{5}}\right)$
 $= \lim_{h \rightarrow 0^+} \frac{(h^2+4h+5)-5}{h(\sqrt{h^2+4h+5}+\sqrt{5})} = \lim_{h \rightarrow 0^+} \frac{h(h+4)}{h(\sqrt{h^2+4h+5}+\sqrt{5})} = \frac{0+4}{\sqrt{5}+\sqrt{5}} = \frac{2}{\sqrt{5}}$

16. $\lim_{h \rightarrow 0^-} \frac{\sqrt{6}-\sqrt{5h^2+11h+6}}{h} = \lim_{h \rightarrow 0^-} \left(\frac{\sqrt{6}-\sqrt{5h^2+11h+6}}{h}\right) \left(\frac{\sqrt{6}+\sqrt{5h^2+11h+6}}{\sqrt{6}+\sqrt{5h^2+11h+6}}\right)$
 $= \lim_{h \rightarrow 0^-} \frac{6-(5h^2+11h+6)}{h(\sqrt{6}+\sqrt{5h^2+11h+6})} = \lim_{h \rightarrow 0^-} \frac{-h(5h+11)}{h(\sqrt{6}+\sqrt{5h^2+11h+6})} = \frac{-(0+11)}{\sqrt{6}+\sqrt{6}} = -\frac{11}{2\sqrt{6}}$

17. (a) $\lim_{x \rightarrow -2^+} (x+3) \frac{|x+2|}{x+2} = \lim_{x \rightarrow -2^+} (x+3) \frac{(x+2)}{(x+2)} \quad (|x+2| = x+2 \text{ for } x > -2)$
 $= \lim_{x \rightarrow -2^+} (x+3) = (-2)+3 = 1$

$$(b) \lim_{x \rightarrow -2^-} (x+3) \frac{|x+2|}{x+2} = \lim_{x \rightarrow -2^-} (x+3) \left[\frac{-(x+2)}{(x+2)} \right] \quad (|x+2| = -(x+2) \text{ for } x < -2)$$

$$= \lim_{x \rightarrow -2^-} (x+3)(-1) = -(-2+3) = -1$$

$$18. (a) \lim_{x \rightarrow 1^+} \frac{\sqrt{2x(x-1)}}{|x-1|} = \lim_{x \rightarrow 1^+} \frac{\sqrt{2x(x-1)}}{(x-1)} \quad (|x-1| = x-1 \text{ for } x > 1)$$

$$= \lim_{x \rightarrow 1^+} \sqrt{2x} = \sqrt{2}$$

$$(b) \lim_{x \rightarrow 1^-} \frac{\sqrt{2x(x-1)}}{|x-1|} = \lim_{x \rightarrow 1^-} \frac{\sqrt{2x(x-1)}}{-(x-1)} \quad (|x-1| = -(x-1) \text{ for } x < 1)$$

$$= \lim_{x \rightarrow 1^-} -\sqrt{2x} = -\sqrt{2}$$

$$19. (a) \lim_{\theta \rightarrow 3^+} \frac{|\theta|}{\theta} = \frac{3}{3} = 1 \quad (b) \lim_{\theta \rightarrow 3^-} \frac{|\theta|}{\theta} = \frac{2}{3}$$

$$20. (a) \lim_{t \rightarrow 4^+} (t - [t]) = 4 - 4 = 0 \quad (b) \lim_{t \rightarrow 4^-} (t - [t]) = 4 - 3 = 1$$

$$21. \lim_{\theta \rightarrow 0} \frac{\sin \sqrt{2\theta}}{\sqrt{2\theta}} = \lim_{x \rightarrow 0} \frac{\sin x}{x} = 1 \quad (\text{where } x = \sqrt{2\theta})$$

$$22. \lim_{t \rightarrow 0} \frac{\sin kt}{t} = \lim_{t \rightarrow 0} \frac{k \sin kt}{kt} = \lim_{\theta \rightarrow 0} \frac{k \sin \theta}{\theta} = k \lim_{\theta \rightarrow 0} \frac{\sin \theta}{\theta} = k \cdot 1 = k \quad (\text{where } \theta = kt)$$

$$23. \lim_{y \rightarrow 0} \frac{\sin 3y}{4y} = \frac{1}{4} \lim_{y \rightarrow 0} \frac{3 \sin 3y}{3y} = \frac{3}{4} \lim_{y \rightarrow 0} \frac{\sin 3y}{3y} = \frac{3}{4} \lim_{\theta \rightarrow 0} \frac{\sin \theta}{\theta} = \frac{3}{4} \quad (\text{where } \theta = 3y)$$

$$24. \lim_{h \rightarrow 0^-} \frac{h}{\sin 3h} = \lim_{h \rightarrow 0^-} \left(\frac{1}{3} \cdot \frac{3h}{\sin 3h} \right) = \frac{1}{3} \lim_{h \rightarrow 0^-} \frac{1}{\left(\frac{\sin 3h}{3h} \right)} = \frac{1}{3} \left(\frac{1}{\lim_{\theta \rightarrow 0^-} \frac{\sin \theta}{\theta}} \right) = \frac{1}{3} \cdot 1 = \frac{1}{3} \quad (\text{where } \theta = 3h)$$

$$25. \lim_{x \rightarrow 0} \frac{\tan 2x}{x} = \lim_{x \rightarrow 0} \frac{\left(\frac{\sin 2x}{\cos 2x} \right)}{x} = \lim_{x \rightarrow 0} \frac{\sin 2x}{x \cos 2x} = \left(\lim_{x \rightarrow 0} \frac{1}{\cos 2x} \right) \left(\lim_{x \rightarrow 0} \frac{2 \sin 2x}{2x} \right) = 1 \cdot 2 = 2$$

$$26. \lim_{t \rightarrow 0} \frac{2t}{\tan t} = 2 \lim_{t \rightarrow 0} \frac{t}{\left(\frac{\sin t}{\cos t} \right)} = 2 \lim_{t \rightarrow 0} \frac{t \cos t}{\sin t} = 2 \left(\lim_{t \rightarrow 0} \cos t \right) \left(\lim_{t \rightarrow 0} \frac{1}{\frac{\sin t}{t}} \right) = 2 \cdot 1 \cdot 1 = 2$$

$$27. \lim_{x \rightarrow 0} \frac{x \csc 2x}{\cos 5x} = \lim_{x \rightarrow 0} \left(\frac{x}{\sin 2x} \cdot \frac{1}{\cos 5x} \right) = \left(\frac{1}{2} \lim_{x \rightarrow 0} \frac{2x}{\sin 2x} \right) \left(\lim_{x \rightarrow 0} \frac{1}{\cos 5x} \right) = \left(\frac{1}{2} \cdot 1 \right) (1) = \frac{1}{2}$$

$$28. \lim_{x \rightarrow 0} 6x^2(\cot x)(\csc 2x) = \lim_{x \rightarrow 0} \frac{6x^2 \cos x}{\sin x \sin 2x} = \lim_{x \rightarrow 0} \left(3 \cos x \cdot \frac{x}{\sin x} \cdot \frac{2x}{\sin 2x} \right) = 3 \cdot 1 \cdot 1 = 3$$

$$29. \lim_{x \rightarrow 0} \frac{x + x \cos x}{\sin x \cos x} = \lim_{x \rightarrow 0} \left(\frac{x}{\sin x \cos x} + \frac{x \cos x}{\sin x \cos x} \right) = \lim_{x \rightarrow 0} \left(\frac{x}{\sin x} \cdot \frac{1}{\cos x} \right) + \lim_{x \rightarrow 0} \frac{x}{\sin x}$$

$$= \lim_{x \rightarrow 0} \left(\frac{1}{\frac{\sin x}{x}} \right) \cdot \lim_{x \rightarrow 0} \left(\frac{1}{\cos x} \right) + \lim_{x \rightarrow 0} \left(\frac{1}{\frac{\sin x}{x}} \right) = (1)(1) + 1 = 2$$

$$30. \lim_{x \rightarrow 0} \frac{x^2 - x + \sin x}{2x} = \lim_{x \rightarrow 0} \left(\frac{x}{2} - \frac{1}{2} + \frac{1}{2} \left(\frac{\sin x}{x} \right) \right) = 0 - \frac{1}{2} + \frac{1}{2} (1) = 0$$

$$31. \lim_{t \rightarrow 0} \frac{\sin(1 - \cos t)}{1 - \cos t} = \lim_{\theta \rightarrow 0} \frac{\sin \theta}{\theta} = 1 \quad \text{since } \theta = 1 - \cos t \rightarrow 0 \text{ as } t \rightarrow 0$$

$$32. \lim_{h \rightarrow 0} \frac{\sin(\sin h)}{\sin h} = \lim_{\theta \rightarrow 0} \frac{\sin \theta}{\theta} = 1 \quad \text{since } \theta = \sin h \rightarrow 0 \text{ as } h \rightarrow 0$$

$$33. \lim_{\theta \rightarrow 0} \frac{\sin \theta}{\sin 2\theta} = \lim_{\theta \rightarrow 0} \left(\frac{\sin \theta}{\sin 2\theta} \cdot \frac{2\theta}{2\theta} \right) = \frac{1}{2} \lim_{\theta \rightarrow 0} \left(\frac{\sin \theta}{\theta} \cdot \frac{2\theta}{\sin 2\theta} \right) = \frac{1}{2} \cdot 1 \cdot 1 = \frac{1}{2}$$

68 Chapter 2 Limits and Continuity

$$34. \lim_{x \rightarrow 0} \frac{\sin 5x}{\sin 4x} = \lim_{x \rightarrow 0} \left(\frac{\sin 5x}{\sin 4x} \cdot \frac{4x}{5x} \cdot \frac{5}{4} \right) = \frac{5}{4} \lim_{x \rightarrow 0} \left(\frac{\sin 5x}{5x} \cdot \frac{4x}{\sin 4x} \right) = \frac{5}{4} \cdot 1 \cdot 1 = \frac{5}{4}$$

$$35. \lim_{x \rightarrow 0} \frac{\tan 3x}{\sin 8x} = \lim_{x \rightarrow 0} \left(\frac{\sin 3x}{\cos 3x} \cdot \frac{1}{\sin 8x} \right) = \lim_{x \rightarrow 0} \left(\frac{\sin 3x}{\cos 3x} \cdot \frac{1}{\sin 8x} \cdot \frac{8x}{3x} \cdot \frac{3}{8} \right) \\ = \frac{3}{8} \lim_{x \rightarrow 0} \left(\frac{1}{\cos 3x} \right) \left(\frac{\sin 3x}{3x} \right) \left(\frac{8x}{\sin 8x} \right) = \frac{3}{8} \cdot 1 \cdot 1 \cdot 1 = \frac{3}{8}$$

$$36. \lim_{y \rightarrow 0} \frac{\sin 3y \cot 4y}{y \cot 4y} = \lim_{y \rightarrow 0} \frac{\sin 3y \sin 4y \cos 5y}{y \cos 4y \sin 5y} = \lim_{y \rightarrow 0} \left(\frac{\sin 3y}{y} \right) \left(\frac{\sin 4y}{\cos 4y} \right) \left(\frac{\cos 5y}{\sin 5y} \right) \left(\frac{3 \cdot 4 \cdot 5y}{3 \cdot 4 \cdot 5y} \right) \\ = \lim_{y \rightarrow 0} \left(\frac{\sin 3y}{3y} \right) \left(\frac{\sin 4y}{4y} \right) \left(\frac{5y}{\sin 5y} \right) \left(\frac{\cos 5y}{\cos 4y} \right) \left(\frac{3 \cdot 4}{5} \right) = 1 \cdot 1 \cdot 1 \cdot 1 \cdot \frac{12}{5} = \frac{12}{5}$$

Note: In these exercises we use the result $\lim_{x \rightarrow \pm \infty} \frac{1}{x^{m/n}} = 0$ whenever $\frac{m}{n} > 0$. This result follows immediately from

Example 6 and the power rule in Theorem 8: $\lim_{x \rightarrow \pm \infty} \left(\frac{1}{x^{m/n}} \right) = \lim_{x \rightarrow \pm \infty} \left(\frac{1}{x} \right)^{m/n} = \left(\lim_{x \rightarrow \pm \infty} \frac{1}{x} \right)^{m/n} = 0^{m/n} = 0$.

$$37. \text{(a) } -3 \qquad \qquad \qquad \text{(b) } -3$$

$$38. \text{(a) } \pi \qquad \qquad \qquad \text{(b) } \pi$$

$$39. \text{(a) } \frac{1}{2} \qquad \qquad \qquad \text{(b) } \frac{1}{2}$$

$$40. \text{(a) } \frac{1}{8} \qquad \qquad \qquad \text{(b) } \frac{1}{8}$$

$$41. \text{(a) } -\frac{5}{3} \qquad \qquad \qquad \text{(b) } -\frac{5}{3}$$

$$42. \text{(a) } \frac{3}{4} \qquad \qquad \qquad \text{(b) } \frac{3}{4}$$

$$43. -\frac{1}{x} \leq \frac{\sin 2x}{x} \leq \frac{1}{x} \Rightarrow \lim_{x \rightarrow \infty} \frac{\sin 2x}{x} = 0 \text{ by the Sandwich Theorem}$$

$$44. -\frac{1}{3\theta} \leq \frac{\cos \theta}{3\theta} \leq \frac{1}{3\theta} \Rightarrow \lim_{\theta \rightarrow -\infty} \frac{\cos \theta}{3\theta} = 0 \text{ by the Sandwich Theorem}$$

$$45. \lim_{t \rightarrow \infty} \frac{2-t+\sin t}{t+\cos t} = \lim_{t \rightarrow \infty} \frac{\frac{2}{t} - 1 + \left(\frac{\sin t}{t}\right)}{1 + \left(\frac{\cos t}{t}\right)} = \frac{0-1+0}{1+0} = -1$$

$$46. \lim_{r \rightarrow \infty} \frac{r+\sin r}{2r+7-5 \sin r} = \lim_{r \rightarrow \infty} \frac{1 + \left(\frac{\sin r}{r}\right)}{2 + \frac{7}{r} - 5 \left(\frac{\sin r}{r}\right)} = \lim_{r \rightarrow \infty} \frac{1+0}{2+0-0} = \frac{1}{2}$$

$$47. -\frac{1}{e^x} \leq \frac{\sin x}{e^x} \leq \frac{1}{e^x} \Rightarrow \lim_{x \rightarrow \infty} e^{-x} \sin x = 0 \text{ by the Sandwich Theorem.}$$

$$48. \lim_{x \rightarrow \infty} (e^x) \left(\cos^{-1} \left(\frac{1}{x} \right) \right) = 0 \cdot \cos^{-1} 0 = 0 \cdot \frac{\pi}{2} = 0$$

$$49. \lim_{x \rightarrow \infty} \frac{e^x - e^{-x}}{e^x + e^{-x}} = \lim_{x \rightarrow \infty} \frac{e^x - \frac{1}{e^x}}{e^x + \frac{1}{e^x}} = \lim_{x \rightarrow \infty} \frac{\frac{e^{2x} - 1}{e^x}}{\frac{e^{2x} + 1}{e^x}} = \lim_{x \rightarrow \infty} \frac{e^{2x} - 1}{e^{2x} + 1} = \frac{0-1}{0+1} = -1$$

$$50. \lim_{x \rightarrow \infty} \frac{3x^2 + e^{-x}}{\sin(1/x) - 2x^2} = \lim_{x \rightarrow \infty} \frac{3 + \frac{1}{e^{3x}}}{\frac{\sin(1/x)}{x^2} - 2} = \frac{3+0}{0-2} = -\frac{3}{2}$$

$$51. \text{(a) } \lim_{x \rightarrow \infty} \frac{2x+3}{5x+7} = \lim_{x \rightarrow \infty} \frac{2 + \frac{3}{x}}{5 + \frac{7}{x}} = \frac{2}{5} \qquad \qquad \qquad \text{(b) } \frac{2}{5} \text{ (same process as part (a))}$$

$$52. (a) \lim_{x \rightarrow \infty} \frac{2x^3+7}{x^3-x^2+x+7} = \lim_{x \rightarrow \infty} \frac{2+\left(\frac{7}{x^3}\right)}{1-\frac{1}{x}+\frac{1}{x^2}+\frac{7}{x^3}} = 2$$

(b) 2 (same process as part (a))

$$53. (a) \lim_{x \rightarrow \infty} \frac{x+1}{x^2+3} = \lim_{x \rightarrow \infty} \frac{\frac{1}{x}+\frac{1}{x^2}}{1+\frac{3}{x^2}} = 0$$

(b) 0 (same process as part (a))

$$54. (a) \lim_{x \rightarrow \infty} \frac{3x+7}{x^2-2} = \lim_{x \rightarrow \infty} \frac{\frac{3}{x}+\frac{7}{x^2}}{1-\frac{2}{x^2}} = 0$$

(b) 0 (same process as part (a))

$$55. (a) \lim_{x \rightarrow \infty} \frac{7x^3}{x^3-3x^2+6x} = \lim_{x \rightarrow \infty} \frac{7}{1-\frac{3}{x}+\frac{6}{x^2}} = 7$$

(b) 7 (same process as part (a))

$$56. (a) \lim_{x \rightarrow \infty} \frac{1}{x^3-4x+1} = \lim_{x \rightarrow \infty} \frac{\frac{1}{x^3}}{1-\frac{4}{x^2}+\frac{1}{x^3}} = 0$$

(b) 0 (same process as part (a))

$$57. (a) \lim_{x \rightarrow \infty} \frac{10x^5+x^4+31}{x^6} = \lim_{x \rightarrow \infty} \frac{\frac{10}{x}+\frac{1}{x^2}+\frac{31}{x^6}}{1} = 0$$

(b) 0 (same process as part (a))

$$58. (a) \lim_{x \rightarrow \infty} \frac{9x^4+x}{2x^4+5x^2-x+6} = \lim_{x \rightarrow \infty} \frac{9+\frac{1}{x^3}}{2+\frac{5}{x^2}-\frac{1}{x}+\frac{6}{x^4}} = \frac{9}{2}$$

(b) $\frac{9}{2}$ (same process as part (a))

$$59. (a) \lim_{x \rightarrow \infty} \frac{-2x^3-2x+3}{3x^3+3x^2-5x} = \lim_{x \rightarrow \infty} \frac{-2-\frac{2}{x}+\frac{3}{x^3}}{3+\frac{3}{x}-\frac{5}{x^2}} = -\frac{2}{3}$$

(b) $-\frac{2}{3}$ (same process as part (a))

$$60. (a) \lim_{x \rightarrow \infty} \frac{-x^4}{x^4-7x^3+7x^2+9} = \lim_{x \rightarrow \infty} \frac{-1}{1-\frac{7}{x}+\frac{7}{x^2}+\frac{9}{x^4}} = -1$$

(b) -1 (same process as part (a))

$$61. \lim_{x \rightarrow \infty} \frac{2\sqrt{x}+x^{-1}}{3x-7} = \lim_{x \rightarrow \infty} \frac{\left(\frac{2}{x^{1/2}}\right)+\left(\frac{1}{x}\right)}{3-\frac{7}{x}} = 0$$

$$62. \lim_{x \rightarrow \infty} \frac{2+\sqrt{x}}{2-\sqrt{x}} = \lim_{x \rightarrow \infty} \frac{\left(\frac{2}{x^{1/2}}\right)+1}{\left(\frac{2}{x^{1/2}}\right)-1} = -1$$

$$63. \lim_{x \rightarrow -\infty} \frac{\sqrt[3]{x}-\sqrt[5]{x}}{\sqrt{x}+\sqrt[3]{x}} = \lim_{x \rightarrow -\infty} \frac{1-x^{(1/5)-(1/3)}}{1+x^{(1/5)-(1/3)}} = \lim_{x \rightarrow -\infty} \frac{1-\left(\frac{1}{x^{2/15}}\right)}{1+\left(\frac{1}{x^{2/15}}\right)} = 1$$

$$64. \lim_{x \rightarrow \infty} \frac{x^{-1}+x^{-4}}{x^{-2}-x^{-3}} = \lim_{x \rightarrow \infty} \frac{x+\frac{1}{x^3}}{1-\frac{1}{x}} = \infty$$

$$65. \lim_{x \rightarrow \infty} \frac{2x^{5/3}-x^{1/3}+7}{x^{8/5}+3x+\sqrt{x}} = \lim_{x \rightarrow \infty} \frac{2x^{1/15}-\frac{1}{x^{19/15}}+\frac{7}{x^{8/5}}}{1+\frac{3}{x^{3/5}}+\frac{1}{x^{11/10}}} = \infty$$

$$66. \lim_{x \rightarrow -\infty} \frac{\sqrt[3]{x}-5x+3}{2x+x^{2/3}-4} = \lim_{x \rightarrow -\infty} \frac{\frac{1}{x^{2/3}}-5+\frac{3}{x}}{2+\frac{1}{x^{1/3}}-\frac{4}{x}} = -\frac{5}{2}$$

67. Yes. If $\lim_{x \rightarrow a^+} f(x) = L = \lim_{x \rightarrow a^-} f(x)$, then $\lim_{x \rightarrow a} f(x) = L$. If $\lim_{x \rightarrow a^+} f(x) \neq \lim_{x \rightarrow a^-} f(x)$, then $\lim_{x \rightarrow a} f(x)$ does not exist.

68. Since $\lim_{x \rightarrow c} f(x) = L$ if and only if $\lim_{x \rightarrow c^+} f(x) = L$ and $\lim_{x \rightarrow c^-} f(x) = L$, then $\lim_{x \rightarrow c} f(x)$ can be found by calculating $\lim_{x \rightarrow c^+} f(x)$.

70 Chapter 2 Limits and Continuity

69. If f is an odd function of x , then $f(-x) = -f(x)$. Given $\lim_{x \rightarrow 0^+} f(x) = 3$, then $\lim_{x \rightarrow 0^-} f(x) = -3$.

70. If f is an even function of x , then $f(-x) = f(x)$. Given $\lim_{x \rightarrow 2^-} f(x) = 7$ then $\lim_{x \rightarrow -2^+} f(x) = 7$. However, nothing can be said about $\lim_{x \rightarrow -2^-} f(x)$ because we don't know $\lim_{x \rightarrow 2^+} f(x)$.

71. Yes. If $\lim_{x \rightarrow \infty} \frac{f(x)}{g(x)} = 2$ then the ratio of the polynomials' leading coefficients is 2, so $\lim_{x \rightarrow -\infty} \frac{f(x)}{g(x)} = 2$ as well.

72. Yes, it can have a horizontal or oblique asymptote.

73. At most 1 horizontal asymptote: If $\lim_{x \rightarrow \infty} \frac{f(x)}{g(x)} = L$, then the ratio of the polynomials' leading coefficients is L , so $\lim_{x \rightarrow -\infty} \frac{f(x)}{g(x)} = L$ as well.

$$\begin{aligned} 74. \lim_{x \rightarrow \infty} \sqrt{x^2 + x} - \sqrt{x^2 - x} &= \lim_{x \rightarrow \infty} \left[\sqrt{x^2 + x} - \sqrt{x^2 - x} \right] \cdot \left[\frac{\sqrt{x^2 + x} + \sqrt{x^2 - x}}{\sqrt{x^2 + x} + \sqrt{x^2 - x}} \right] = \lim_{x \rightarrow \infty} \frac{(x^2 + x) - (x^2 - x)}{\sqrt{x^2 + x} + \sqrt{x^2 - x}} \\ &= \lim_{x \rightarrow \infty} \frac{2x}{\sqrt{x^2 + x} + \sqrt{x^2 - x}} = \lim_{x \rightarrow \infty} \frac{2}{\sqrt{1 + \frac{1}{x}} + \sqrt{1 - \frac{1}{x}}} = \frac{2}{1+1} = 1 \end{aligned}$$

75. For any $\epsilon > 0$, take $N = 1$. Then for all $x > N$ we have that $|f(x) - k| = |k - k| = 0 < \epsilon$.

76. For any $\epsilon > 0$, take $N = 1$. Then for all $y < -N$ we have that $|f(x) - k| = |k - k| = 0 < \epsilon$.

77. $I = (5, 5 + \delta) \Rightarrow 5 < x < 5 + \delta$. Also, $\sqrt{x - 5} < \epsilon \Rightarrow x - 5 < \epsilon^2 \Rightarrow x < 5 + \epsilon^2$. Choose $\delta = \epsilon^2$
 $\Rightarrow \lim_{x \rightarrow 5^+} \sqrt{x - 5} = 0$.

78. $I = (4 - \delta, 4) \Rightarrow 4 - \delta < x < 4$. Also, $\sqrt{4 - x} < \epsilon \Rightarrow 4 - x < \epsilon^2 \Rightarrow x > 4 - \epsilon^2$. Choose $\delta = \epsilon^2$
 $\Rightarrow \lim_{x \rightarrow 4^-} \sqrt{4 - x} = 0$.

79. As $x \rightarrow 0^-$ the number x is always negative. Thus, $\left| \frac{x}{|x|} - (-1) \right| < \epsilon \Rightarrow \left| \frac{x}{-x} + 1 \right| < \epsilon \Rightarrow 0 < \epsilon$ which is always true independent of the value of x . Hence we can choose any $\delta > 0$ with $-\delta < x < 0 \Rightarrow \lim_{x \rightarrow 0^-} \frac{x}{|x|} = -1$.

80. Since $x \rightarrow 2^+$ we have $x > 2$ and $|x - 2| = x - 2$. Then, $\left| \frac{x-2}{|x-2|} - 1 \right| = \left| \frac{x-2}{x-2} - 1 \right| < \epsilon \Rightarrow 0 < \epsilon$
 which is always true so long as $x > 2$. Hence we can choose any $\delta > 0$, and thus $2 < x < 2 + \delta$
 $\Rightarrow \left| \frac{x-2}{|x-2|} - 1 \right| < \epsilon$. Thus, $\lim_{x \rightarrow 2^+} \frac{x-2}{|x-2|} = 1$.

81. (a) $\lim_{x \rightarrow 400^+} \lfloor x \rfloor = 400$. Just observe that if $400 < x < 401$, then $\lfloor x \rfloor = 400$. Thus if we choose $\delta = 1$, we have for any number $\epsilon > 0$ that $400 < x < 400 + \delta \Rightarrow |\lfloor x \rfloor - 400| = |400 - 400| = 0 < \epsilon$.

(b) $\lim_{x \rightarrow 400^-} \lfloor x \rfloor = 399$. Just observe that if $399 < x < 400$ then $\lfloor x \rfloor = 399$. Thus if we choose $\delta = 1$, we have for any number $\epsilon > 0$ that $400 - \delta < x < 400 \Rightarrow |\lfloor x \rfloor - 399| = |399 - 399| = 0 < \epsilon$.

(c) Since $\lim_{x \rightarrow 400^+} \lfloor x \rfloor \neq \lim_{x \rightarrow 400^-} \lfloor x \rfloor$ we conclude that $\lim_{x \rightarrow 400} \lfloor x \rfloor$ does not exist.

82. (a) $\lim_{x \rightarrow 0^+} f(x) = \lim_{x \rightarrow 0^+} \sqrt{x} = \sqrt{0} = 0$; $|\sqrt{x} - 0| < \epsilon \Rightarrow -\epsilon < \sqrt{x} < \epsilon \Rightarrow 0 < x < \epsilon^2$ for x positive. Choose $\delta = \epsilon^2$
 $\Rightarrow \lim_{x \rightarrow 0^+} f(x) = 0$.

- (b) $\lim_{x \rightarrow 0^-} f(x) = \lim_{x \rightarrow 0^-} x^2 \sin\left(\frac{1}{x}\right) = 0$ by the sandwich theorem since $-x^2 \leq x^2 \sin\left(\frac{1}{x}\right) \leq x^2$ for all $x \neq 0$.
 Since $|x^2 - 0| = |-x^2 - 0| = x^2 < \epsilon$ whenever $|x| < \sqrt{\epsilon}$, we choose $\delta = \sqrt{\epsilon}$ and obtain $|x^2 \sin\left(\frac{1}{x}\right) - 0| < \epsilon$ if $-\delta < x < 0$.
- (c) The function f has limit 0 at $x_0 = 0$ since both the right-hand and left-hand limits exist and equal 0.

83. $\lim_{x \rightarrow \pm\infty} x \sin \frac{1}{x} = \lim_{\theta \rightarrow 0} \frac{1}{\theta} \sin \theta = 1, \quad (\theta = \frac{1}{x})$
84. $\lim_{x \rightarrow -\infty} \frac{\cos \frac{1}{x}}{1 + \frac{1}{x}} = \lim_{\theta \rightarrow 0^-} \frac{\cos \theta}{1 + \theta} = \frac{1}{1} = 1, \quad (\theta = \frac{1}{x})$
85. $\lim_{x \rightarrow \pm\infty} \frac{3x+4}{2x-5} = \lim_{x \rightarrow \pm\infty} \frac{3 + \frac{4}{x}}{2 - \frac{5}{x}} = \lim_{t \rightarrow 0} \frac{3+4t}{2-5t} = \frac{3}{2}, \quad (t = \frac{1}{x})$
86. $\lim_{x \rightarrow \infty} \left(\frac{1}{x}\right)^{1/x} = \lim_{z \rightarrow 0^+} z^z = 1, \quad (z = \frac{1}{x})$
87. $\lim_{x \rightarrow \pm\infty} \left(3 + \frac{2}{x}\right) \left(\cos \frac{1}{x}\right) = \lim_{\theta \rightarrow 0} (3 + 2\theta)(\cos \theta) = (3)(1) = 3, \quad (\theta = \frac{1}{x})$
88. $\lim_{x \rightarrow \infty} \left(\frac{3}{x^2} - \cos \frac{1}{x}\right) \left(1 + \sin \frac{1}{x}\right) = \lim_{\theta \rightarrow 0^+} (3\theta^2 - \cos \theta)(1 + \sin \theta) = (0 - 1)(1 + 0) = -1, \quad (\theta = \frac{1}{x})$

2.5 INFINITE LIMITS AND VERTICAL ASYMPTOTES

1. $\lim_{x \rightarrow 0^+} \frac{1}{3x} = \infty$ $\left(\frac{\text{positive}}{\text{positive}}\right)$
2. $\lim_{x \rightarrow 0^-} \frac{5}{2x} = -\infty$ $\left(\frac{\text{positive}}{\text{negative}}\right)$
3. $\lim_{x \rightarrow 2^-} \frac{3}{x-2} = -\infty$ $\left(\frac{\text{positive}}{\text{negative}}\right)$
4. $\lim_{x \rightarrow 3^+} \frac{1}{x-3} = \infty$ $\left(\frac{\text{positive}}{\text{positive}}\right)$
5. $\lim_{x \rightarrow -8^+} \frac{2x}{x+8} = -\infty$ $\left(\frac{\text{negative}}{\text{positive}}\right)$
6. $\lim_{x \rightarrow -5^-} \frac{3x}{2x+10} = \infty$ $\left(\frac{\text{negative}}{\text{negative}}\right)$
7. $\lim_{x \rightarrow 7} \frac{4}{(x-7)^2} = \infty$ $\left(\frac{\text{positive}}{\text{positive}}\right)$
8. $\lim_{x \rightarrow 0} \frac{-1}{x^2(x+1)} = -\infty$ $\left(\frac{\text{negative}}{\text{positive-positive}}\right)$
9. (a) $\lim_{x \rightarrow 0^+} \frac{2}{3x^{1/3}} = \infty$
- (b) $\lim_{x \rightarrow 0^-} \frac{2}{3x^{1/3}} = -\infty$
10. (a) $\lim_{x \rightarrow 0^+} \frac{2}{x^{1/5}} = \infty$
- (b) $\lim_{x \rightarrow 0^-} \frac{2}{x^{1/5}} = -\infty$
11. $\lim_{x \rightarrow 0} \frac{4}{x^{2/3}} = \lim_{x \rightarrow 0} \frac{4}{(x^{1/3})^2} = \infty$
12. $\lim_{x \rightarrow 0} \frac{1}{x^{2/3}} = \lim_{x \rightarrow 0} \frac{1}{(x^{1/3})^2} = \infty$
13. $\lim_{x \rightarrow \left(\frac{\pi}{2}\right)^-} \tan x = \infty$
14. $\lim_{x \rightarrow \left(\frac{\pi}{2}\right)^+} \sec x = \infty$
15. $\lim_{\theta \rightarrow 0^-} (1 + \csc \theta) = -\infty$
16. $\lim_{\theta \rightarrow 0^+} (2 - \cot \theta) = -\infty$ and $\lim_{\theta \rightarrow 0^-} (2 - \cot \theta) = \infty$, so the limit does not exist
17. (a) $\lim_{x \rightarrow 2^+} \frac{1}{x^2-4} = \lim_{x \rightarrow 2^+} \frac{1}{(x+2)(x-2)} = \infty$ $\left(\frac{1}{\text{positive-positive}}\right)$
- (b) $\lim_{x \rightarrow 2^-} \frac{1}{x^2-4} = \lim_{x \rightarrow 2^-} \frac{1}{(x+2)(x-2)} = -\infty$ $\left(\frac{1}{\text{positive-negative}}\right)$

(c) $\lim_{x \rightarrow -2^+} \frac{1}{x^2-4} = \lim_{x \rightarrow -2^+} \frac{1}{(x+2)(x-2)} = -\infty$ $\left(\frac{1}{\text{positive-negative}}\right)$
 (d) $\lim_{x \rightarrow -2^-} \frac{1}{x^2-4} = \lim_{x \rightarrow -2^-} \frac{1}{(x+2)(x-2)} = \infty$ $\left(\frac{1}{\text{negative-negative}}\right)$

18. (a) $\lim_{x \rightarrow 1^+} \frac{x}{x^2-1} = \lim_{x \rightarrow 1^+} \frac{x}{(x+1)(x-1)} = \infty$ $\left(\frac{\text{positive}}{\text{positive-positive}}\right)$
 (b) $\lim_{x \rightarrow 1^-} \frac{x}{x^2-1} = \lim_{x \rightarrow 1^-} \frac{x}{(x+1)(x-1)} = -\infty$ $\left(\frac{\text{positive}}{\text{positive-negative}}\right)$
 (c) $\lim_{x \rightarrow -1^+} \frac{x}{x^2-1} = \lim_{x \rightarrow -1^+} \frac{x}{(x+1)(x-1)} = \infty$ $\left(\frac{\text{negative}}{\text{positive-negative}}\right)$
 (d) $\lim_{x \rightarrow -1^-} \frac{x}{x^2-1} = \lim_{x \rightarrow -1^-} \frac{x}{(x+1)(x-1)} = -\infty$ $\left(\frac{\text{negative}}{\text{negative-negative}}\right)$

19. (a) $\lim_{x \rightarrow 0^+} \frac{x^2}{2} - \frac{1}{x} = 0 + \lim_{x \rightarrow 0^+} \frac{1}{-x} = -\infty$ $\left(\frac{1}{\text{negative}}\right)$
 (b) $\lim_{x \rightarrow 0^-} \frac{x^2}{2} - \frac{1}{x} = 0 + \lim_{x \rightarrow 0^-} \frac{1}{-x} = \infty$ $\left(\frac{1}{\text{positive}}\right)$
 (c) $\lim_{x \rightarrow \sqrt[3]{2}} \frac{x^2}{2} - \frac{1}{x} = \frac{2^{2/3}}{2} - \frac{1}{2^{1/3}} = 2^{-1/3} - 2^{-1/3} = 0$
 (d) $\lim_{x \rightarrow -1} \frac{x^2}{2} - \frac{1}{x} = \frac{1}{2} - \left(\frac{1}{-1}\right) = \frac{3}{2}$

20. (a) $\lim_{x \rightarrow -2^+} \frac{x^2-1}{2x+4} = \infty$ $\left(\frac{\text{positive}}{\text{positive}}\right)$ (b) $\lim_{x \rightarrow -2^-} \frac{x^2-1}{2x+4} = -\infty$ $\left(\frac{\text{positive}}{\text{negative}}\right)$
 (c) $\lim_{x \rightarrow 1^+} \frac{x^2-1}{2x+4} = \lim_{x \rightarrow 1^+} \frac{(x+1)(x-1)}{2x+4} = \frac{2 \cdot 0}{2+4} = 0$
 (d) $\lim_{x \rightarrow 0^-} \frac{x^2-1}{2x+4} = \frac{-1}{4}$

21. (a) $\lim_{x \rightarrow 0^+} \frac{x^2-3x+2}{x^3-2x^2} = \lim_{x \rightarrow 0^+} \frac{(x-2)(x-1)}{x^2(x-2)} = -\infty$ $\left(\frac{\text{negative-negative}}{\text{positive-negative}}\right)$
 (b) $\lim_{x \rightarrow 2^+} \frac{x^2-3x+2}{x^3-2x^2} = \lim_{x \rightarrow 2^+} \frac{(x-2)(x-1)}{x^2(x-2)} = \lim_{x \rightarrow 2^+} \frac{x-1}{x^2} = \frac{1}{4}, x \neq 2$
 (c) $\lim_{x \rightarrow 2^-} \frac{x^2-3x+2}{x^3-2x^2} = \lim_{x \rightarrow 2^-} \frac{(x-2)(x-1)}{x^2(x-2)} = \lim_{x \rightarrow 2^-} \frac{x-1}{x^2} = \frac{1}{4}, x \neq 2$
 (d) $\lim_{x \rightarrow 2} \frac{x^2-3x+2}{x^3-2x^2} = \lim_{x \rightarrow 2} \frac{(x-2)(x-1)}{x^2(x-2)} = \lim_{x \rightarrow 2} \frac{x-1}{x^2} = \frac{1}{4}, x \neq 2$
 (e) $\lim_{x \rightarrow 0} \frac{x^2-3x+2}{x^3-2x^2} = \lim_{x \rightarrow 0} \frac{(x-2)(x-1)}{x^2(x-2)} = -\infty$ $\left(\frac{\text{negative-negative}}{\text{positive-negative}}\right)$

22. (a) $\lim_{x \rightarrow 2^+} \frac{x^2-3x+2}{x^3-4x} = \lim_{x \rightarrow 2^+} \frac{(x-2)(x-1)}{x(x-2)(x+2)} = \lim_{x \rightarrow 2^+} \frac{(x-1)}{x(x+2)} = \frac{1}{2(4)} = \frac{1}{8}$
 (b) $\lim_{x \rightarrow -2^+} \frac{x^2-3x+2}{x^3-4x} = \lim_{x \rightarrow -2^+} \frac{(x-2)(x-1)}{x(x-2)(x+2)} = \lim_{x \rightarrow -2^+} \frac{(x-1)}{x(x+2)} = \infty$ $\left(\frac{\text{negative}}{\text{negative-positive}}\right)$
 (c) $\lim_{x \rightarrow 0^-} \frac{x^2-3x+2}{x^3-4x} = \lim_{x \rightarrow 0^-} \frac{(x-2)(x-1)}{x(x-2)(x+2)} = \lim_{x \rightarrow 0^-} \frac{(x-1)}{x(x+2)} = \infty$ $\left(\frac{\text{negative}}{\text{negative-positive}}\right)$
 (d) $\lim_{x \rightarrow 1^+} \frac{x^2-3x+2}{x^3-4x} = \lim_{x \rightarrow 1^+} \frac{(x-2)(x-1)}{x(x-2)(x+2)} = \lim_{x \rightarrow 1^+} \frac{(x-1)}{x(x+2)} = \frac{0}{(1)(3)} = 0$
 (e) $\lim_{x \rightarrow 0^+} \frac{x-1}{x(x+2)} = -\infty$ $\left(\frac{\text{negative}}{\text{positive-positive}}\right)$
 and $\lim_{x \rightarrow 0^-} \frac{x-1}{x(x+2)} = \infty$ $\left(\frac{\text{negative}}{\text{negative-positive}}\right)$

so the function has no limit as $x \rightarrow 0$.

23. (a) $\lim_{t \rightarrow 0^+} \left[2 - \frac{3}{t^{1/3}}\right] = -\infty$ (b) $\lim_{t \rightarrow 0^-} \left[2 - \frac{3}{t^{1/3}}\right] = \infty$

24. (a) $\lim_{t \rightarrow 0^+} \left[\frac{1}{t^{3/5}} + 7\right] = \infty$ (b) $\lim_{t \rightarrow 0^-} \left[\frac{1}{t^{3/5}} + 7\right] = -\infty$

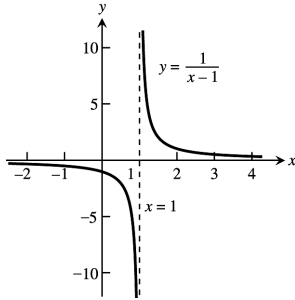
25. (a) $\lim_{x \rightarrow 0^+} \left[\frac{1}{x^{2/3}} + \frac{2}{(x-1)^{2/3}} \right] = \infty$

(c) $\lim_{x \rightarrow 1^+} \left[\frac{1}{x^{2/3}} + \frac{2}{(x-1)^{2/3}} \right] = \infty$

26. (a) $\lim_{x \rightarrow 0^+} \left[\frac{1}{x^{1/3}} - \frac{1}{(x-1)^{1/3}} \right] = \infty$

(c) $\lim_{x \rightarrow 1^+} \left[\frac{1}{x^{1/3}} - \frac{1}{(x-1)^{1/3}} \right] = -\infty$

27. $y = \frac{1}{x-1}$



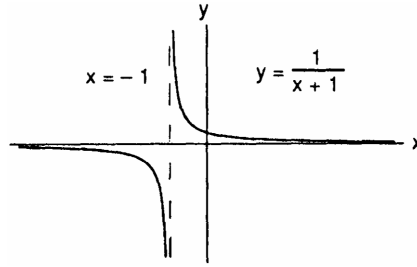
(b) $\lim_{x \rightarrow 0^-} \left[\frac{1}{x^{2/3}} + \frac{2}{(x-1)^{2/3}} \right] = \infty$

(d) $\lim_{x \rightarrow 1^-} \left[\frac{1}{x^{2/3}} + \frac{2}{(x-1)^{2/3}} \right] = \infty$

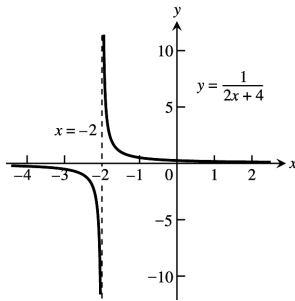
(b) $\lim_{x \rightarrow 0^-} \left[\frac{1}{x^{1/3}} - \frac{1}{(x-1)^{1/3}} \right] = -\infty$

(d) $\lim_{x \rightarrow 1^-} \left[\frac{1}{x^{1/3}} - \frac{1}{(x-1)^{1/3}} \right] = -\infty$

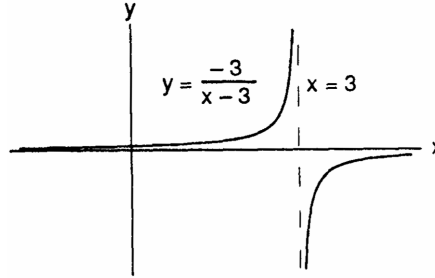
28. $y = \frac{1}{x+1}$



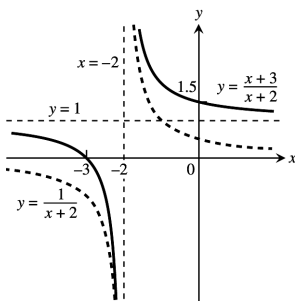
29. $y = \frac{1}{2x+4}$



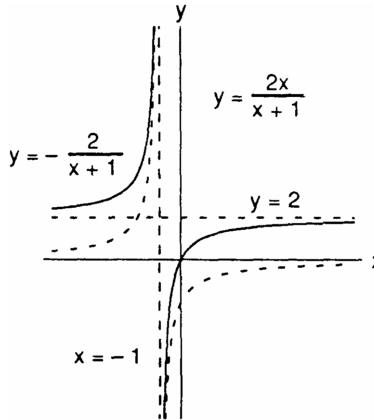
30. $y = \frac{-3}{x-3}$



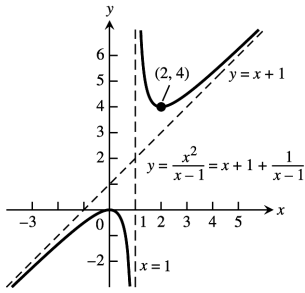
31. $y = \frac{x+3}{x+2} = 1 + \frac{1}{x+2}$



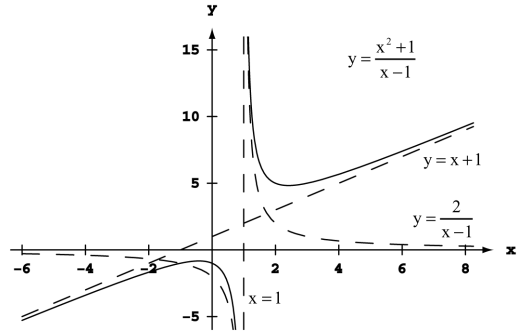
32. $y = \frac{2x}{x+1} = 2 - \frac{2}{x+1}$



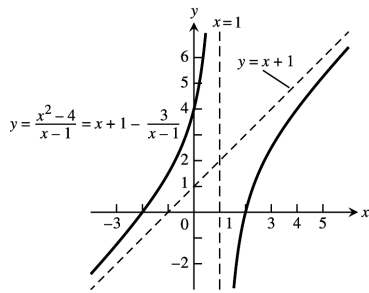
33. $y = \frac{x^2}{x-1} = x + 1 + \frac{1}{x-1}$



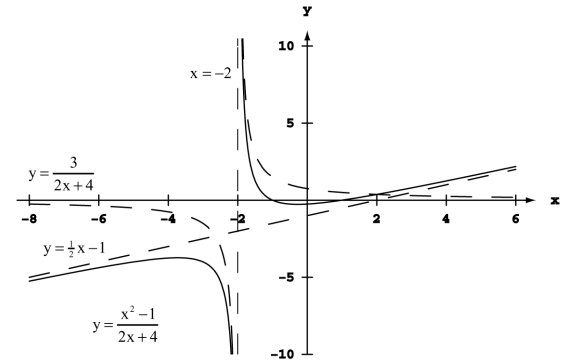
34. $y = \frac{x^2+1}{x-1} = x + 1 + \frac{2}{x-1}$



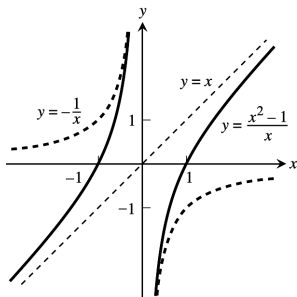
35. $y = \frac{x^2-4}{x-1} = x + 1 - \frac{3}{x-1}$



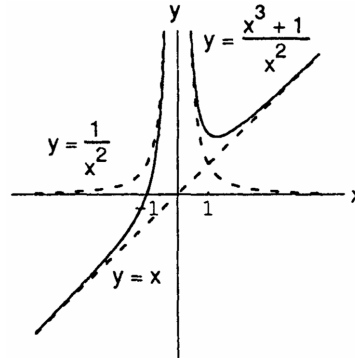
36. $y = \frac{x^2-1}{2x+4} = \frac{1}{2}x - 1 + \frac{3}{2x+4}$



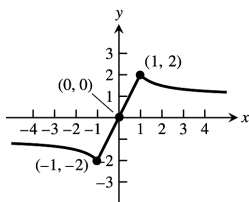
37. $y = \frac{x^2-1}{x} = x - \frac{1}{x}$



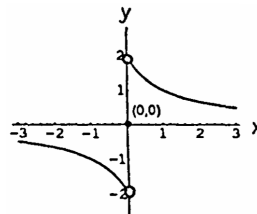
38. $y = \frac{x^3+1}{x^2} = x + \frac{1}{x^2}$



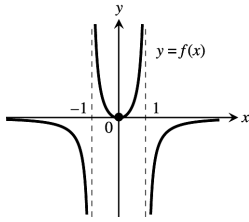
39. Here is one possibility.



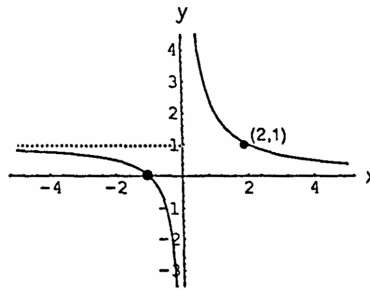
40. Here is one possibility.



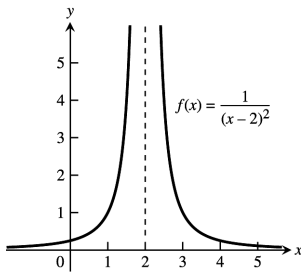
41. Here is one possibility.



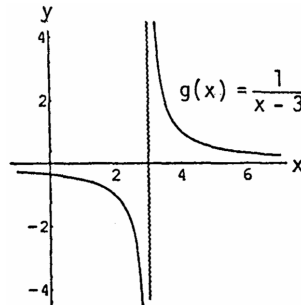
42. Here is one possibility.



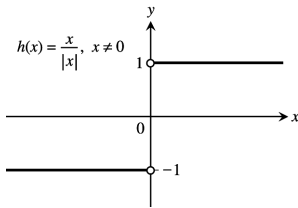
43. Here is one possibility.



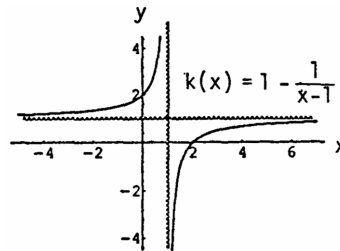
44. Here is one possibility.



45. Here is one possibility.



46. Here is one possibility.



47. For every real number $-B < 0$, we must find a $\delta > 0$ such that for all x , $0 < |x - 0| < \delta \Rightarrow \frac{-1}{x^2} < -B$. Now, $-\frac{1}{x^2} < -B < 0 \Leftrightarrow \frac{1}{x^2} > B > 0 \Leftrightarrow x^2 < \frac{1}{B} \Leftrightarrow |x| < \frac{1}{\sqrt{B}}$. Choose $\delta = \frac{1}{\sqrt{B}}$, then $0 < |x| < \delta \Rightarrow |x| < \frac{1}{\sqrt{B}} \Rightarrow \frac{-1}{x^2} < -B$ so that $\lim_{x \rightarrow 0} -\frac{1}{x^2} = -\infty$.

48. For every real number $B > 0$, we must find a $\delta > 0$ such that for all x , $0 < |x - 0| < \delta \Rightarrow \frac{1}{|x|} > B$. Now, $\frac{1}{|x|} > B > 0 \Leftrightarrow |x| < \frac{1}{B}$. Choose $\delta = \frac{1}{B}$. Then $0 < |x - 0| < \delta \Rightarrow |x| < \frac{1}{B} \Rightarrow \frac{1}{|x|} > B$ so that $\lim_{x \rightarrow 0} \frac{1}{|x|} = \infty$.

49. For every real number $-B < 0$, we must find a $\delta > 0$ such that for all x , $0 < |x - 3| < \delta \Rightarrow \frac{-2}{(x-3)^2} < -B$. Now, $\frac{-2}{(x-3)^2} < -B < 0 \Leftrightarrow \frac{2}{(x-3)^2} > B > 0 \Leftrightarrow \frac{(x-3)^2}{2} < \frac{1}{B} \Leftrightarrow (x-3)^2 < \frac{2}{B} \Leftrightarrow 0 < |x - 3| < \sqrt{\frac{2}{B}}$. Choose $\delta = \sqrt{\frac{2}{B}}$, then $0 < |x - 3| < \delta \Rightarrow \frac{-2}{(x-3)^2} < -B < 0$ so that $\lim_{x \rightarrow 3} \frac{-2}{(x-3)^2} = -\infty$.

50. For every real number $B > 0$, we must find a $\delta > 0$ such that for all x , $0 < |x - (-5)| < \delta \Rightarrow \frac{1}{(x+5)^2} > B$. Now, $\frac{1}{(x+5)^2} > B > 0 \Leftrightarrow (x+5)^2 < \frac{1}{B} \Leftrightarrow |x+5| < \frac{1}{\sqrt{B}}$. Choose $\delta = \frac{1}{\sqrt{B}}$. Then $0 < |x - (-5)| < \delta \Rightarrow |x+5| < \frac{1}{\sqrt{B}} \Rightarrow \frac{1}{(x+5)^2} > B$ so that $\lim_{x \rightarrow -5} \frac{1}{(x+5)^2} = \infty$.

51. (a) We say that $f(x)$ approaches infinity as x approaches x_0 from the left, and write $\lim_{x \rightarrow x_0^-} f(x) = \infty$, if for every positive number B , there exists a corresponding number $\delta > 0$ such that for all x , $x_0 - \delta < x < x_0 \Rightarrow f(x) > B$.
- (b) We say that $f(x)$ approaches minus infinity as x approaches x_0 from the right, and write $\lim_{x \rightarrow x_0^+} f(x) = -\infty$, if for every positive number B (or negative number $-B$) there exists a corresponding number $\delta > 0$ such that for all x , $x_0 < x < x_0 + \delta \Rightarrow f(x) < -B$.
- (c) We say that $f(x)$ approaches minus infinity as x approaches x_0 from the left, and write $\lim_{x \rightarrow x_0^-} f(x) = -\infty$, if for every positive number B (or negative number $-B$) there exists a corresponding number $\delta > 0$ such that for all x , $x_0 - \delta < x < x_0 \Rightarrow f(x) < -B$.

52. For $B > 0$, $\frac{1}{x} > B > 0 \Leftrightarrow x < \frac{1}{B}$. Choose $\delta = \frac{1}{B}$. Then $0 < x < \delta \Rightarrow 0 < x < \frac{1}{B} \Rightarrow \frac{1}{x} > B$ so that $\lim_{x \rightarrow 0^+} \frac{1}{x} = \infty$.

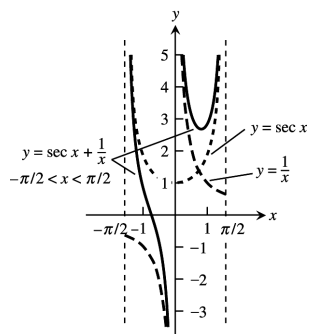
53. For $B > 0$, $\frac{1}{x} < -B < 0 \Leftrightarrow -\frac{1}{x} > B > 0 \Leftrightarrow -x < \frac{1}{B} \Leftrightarrow -\frac{1}{B} < x$. Choose $\delta = \frac{1}{B}$. Then $-\delta < x < 0 \Rightarrow -\frac{1}{B} < x \Rightarrow \frac{1}{x} < -B$ so that $\lim_{x \rightarrow 0^-} \frac{1}{x} = -\infty$.

54. For $B > 0$, $\frac{1}{x-2} < -B \Leftrightarrow -\frac{1}{x-2} > B \Leftrightarrow -(x-2) < \frac{1}{B} \Leftrightarrow x-2 > -\frac{1}{B} \Leftrightarrow x > 2 - \frac{1}{B}$. Choose $\delta = \frac{1}{B}$. Then $2 - \delta < x < 2 \Rightarrow -\delta < x - 2 < 0 \Rightarrow -\frac{1}{B} < x - 2 < 0 \Rightarrow \frac{1}{x-2} < -B < 0$ so that $\lim_{x \rightarrow 2^-} \frac{1}{x-2} = -\infty$.

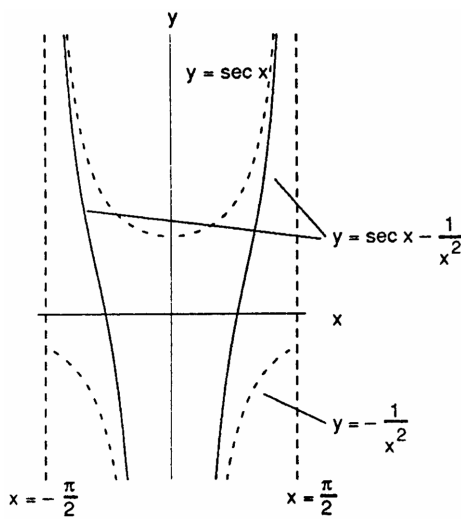
55. For $B > 0$, $\frac{1}{x-2} > B \Leftrightarrow 0 < x - 2 < \frac{1}{B}$. Choose $\delta = \frac{1}{B}$. Then $2 < x < 2 + \delta \Rightarrow 0 < x - 2 < \delta \Rightarrow 0 < x - 2 < \frac{1}{B} \Rightarrow \frac{1}{x-2} > B > 0$ so that $\lim_{x \rightarrow 2^+} \frac{1}{x-2} = \infty$.

56. For $B > 0$ and $0 < x < 1$, $\frac{1}{1-x^2} > B \Leftrightarrow 1 - x^2 < \frac{1}{B} \Leftrightarrow (1-x)(1+x) < \frac{1}{B}$. Now $\frac{1+x}{2} < 1$ since $x < 1$. Choose $\delta < \frac{1}{2B}$. Then $1 - \delta < x < 1 \Rightarrow -\delta < x - 1 < 0 \Rightarrow 1 - x < \delta < \frac{1}{2B} \Rightarrow (1-x)(1+x) < \frac{1}{B} \left(\frac{1+x}{2}\right) < \frac{1}{B} \Rightarrow \frac{1}{1-x^2} > B$ for $0 < x < 1$ and x near 1 $\Rightarrow \lim_{x \rightarrow 1^-} \frac{1}{1-x^2} = \infty$.

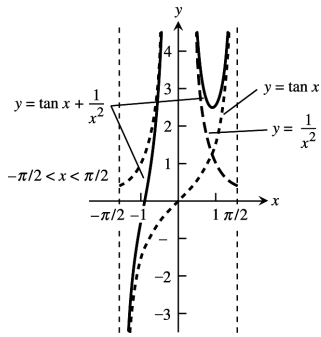
57. $y = \sec x + \frac{1}{x}$



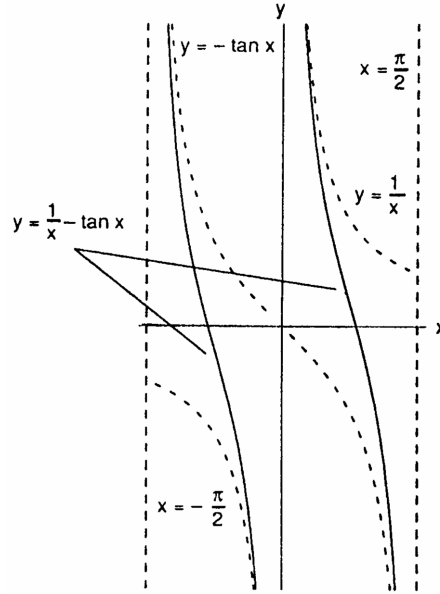
58. $y = \sec x - \frac{1}{x^2}$



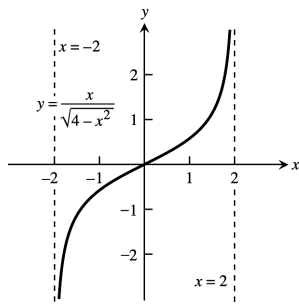
59. $y = \tan x + \frac{1}{x^2}$



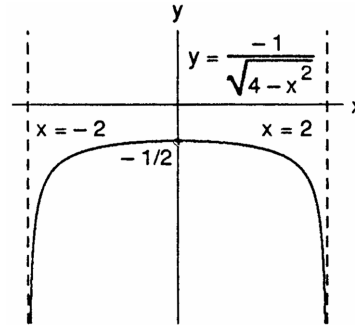
60. $y = \frac{1}{x} - \tan x$



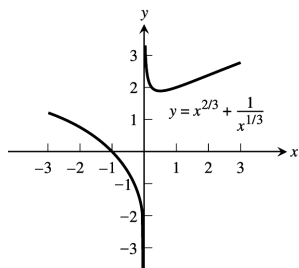
61. $y = \frac{x}{\sqrt{4-x^2}}$



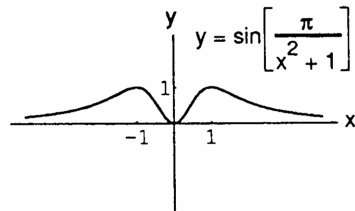
62. $y = \frac{-1}{\sqrt{4-x^2}}$



63. $y = x^{2/3} + \frac{1}{x^{1/3}}$



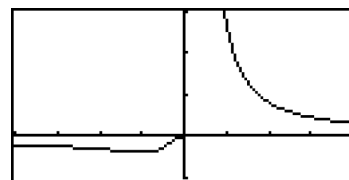
64. $y = \sin\left(\frac{\pi}{x^2+1}\right)$



65. The graph of $y = f\left(\frac{1}{x}\right) = \frac{1}{x}e^{1/x}$ is shown.

$$\lim_{x \rightarrow \infty} f(x) = \lim_{x \rightarrow 0^+} f\left(\frac{1}{x}\right) = \infty$$

$$\lim_{x \rightarrow -\infty} f(x) = \lim_{x \rightarrow 0^-} f\left(\frac{1}{x}\right) = 0$$

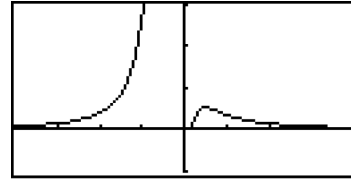


$[-4, 4]$ by $[-1, 3]$

66. The graph of $y = f\left(\frac{1}{x}\right) = \frac{1}{x^2}e^{-1/x}$ is shown.

$$\lim_{x \rightarrow \infty} f(x) = \lim_{x \rightarrow 0^+} f\left(\frac{1}{x}\right) = 0$$

$$\lim_{x \rightarrow -\infty} f(x) = \lim_{x \rightarrow 0^-} f\left(\frac{1}{x}\right) = \infty$$

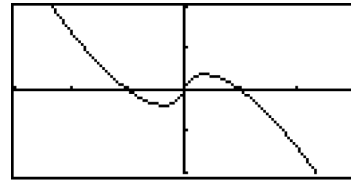


$[-4, 4]$ by $[-1, 3]$

67. The graph of $y = f\left(\frac{1}{x}\right) = x \ln \left| \frac{1}{x} \right|$ is shown.

$$\lim_{x \rightarrow \infty} f(x) = \lim_{x \rightarrow 0^+} f\left(\frac{1}{x}\right) = 0$$

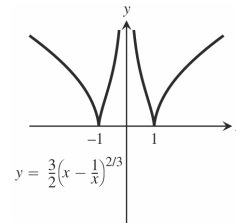
$$\lim_{x \rightarrow -\infty} f(x) = \lim_{x \rightarrow 0^-} f\left(\frac{1}{x}\right) = 0$$



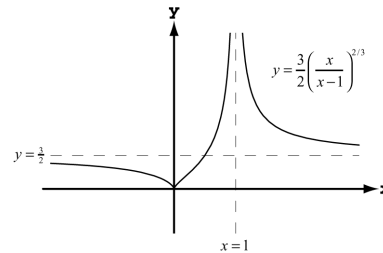
$[-3, 3]$ by $[-2, 2]$

68. Let $t = \frac{1}{x} \Rightarrow \lim_{x \rightarrow \infty} \frac{e^{1/x}}{\ln|x|} = \lim_{t \rightarrow 0^+} \frac{e^t}{\ln(1/t)} = \lim_{t \rightarrow 0^+} \frac{e^t}{\ln 1 - \ln t} = \lim_{t \rightarrow 0^+} -\frac{e^t}{\ln t} = 0$ (since $\lim_{t \rightarrow 0^+} e^t = 1$ and $\lim_{t \rightarrow 0^+} \ln t = -\infty$);
similarly, $\lim_{x \rightarrow -\infty} \frac{e^{1/x}}{\ln|x|} = 0$

69. (a) $y \rightarrow \infty$ (see accompanying graph)
 (b) $y \rightarrow \infty$ (see accompanying graph)
 (c) cusps at $x = \pm 1$ (see accompanying graph)



70. (a) $y \rightarrow 0$ and a cusp at $x = 0$ (see the accompanying graph)
 (b) $y \rightarrow \frac{3}{2}$ (see accompanying graph)
 (c) a vertical asymptote at $x = 1$ and contains the point $\left(-1, \frac{3}{2\sqrt[3]{4}}\right)$ (see accompanying graph)



2.6 CONTINUITY

- No, discontinuous at $x = 2$, not defined at $x = 2$
- No, discontinuous at $x = 3$, $1 = \lim_{x \rightarrow 3^-} g(x) \neq g(3) = 1.5$
- Continuous on $[-1, 3]$
- No, discontinuous at $x = 1$, $1.5 = \lim_{x \rightarrow 1^-} k(x) \neq \lim_{x \rightarrow 1^+} k(x) = 0$
- (a) Yes (b) Yes, $\lim_{x \rightarrow -1^+} f(x) = 0$
 (c) Yes (d) Yes

6. (a) Yes, $f(1) = 1$ (b) Yes, $\lim_{x \rightarrow 1} f(x) = 2$
 (c) No (d) No
7. (a) No (b) No
8. $[-1, 0) \cup (0, 1) \cup (1, 2) \cup (2, 3)$
9. $f(2) = 0$, since $\lim_{x \rightarrow 2^-} f(x) = -2(2) + 4 = 0 = \lim_{x \rightarrow 2^+} f(x)$
10. $f(1)$ should be changed to $2 = \lim_{x \rightarrow 1} f(x)$
11. Nonremovable discontinuity at $x = 1$ because $\lim_{x \rightarrow 1} f(x)$ fails to exist ($\lim_{x \rightarrow 1^-} f(x) = 1$ and $\lim_{x \rightarrow 1^+} f(x) = 0$).
 Removable discontinuity at $x = 0$ by assigning the number $\lim_{x \rightarrow 0} f(x) = 0$ to be the value of $f(0)$ rather than $f(0) = 1$.
12. Nonremovable discontinuity at $x = 1$ because $\lim_{x \rightarrow 1} f(x)$ fails to exist ($\lim_{x \rightarrow 1^-} f(x) = 2$ and $\lim_{x \rightarrow 1^+} f(x) = 1$).
 Removable discontinuity at $x = 2$ by assigning the number $\lim_{x \rightarrow 2} f(x) = 1$ to be the value of $f(2)$ rather than $f(2) = 2$.
13. Discontinuous only when $x - 2 = 0 \Rightarrow x = 2$ 14. Discontinuous only when $(x + 2)^2 = 0 \Rightarrow x = -2$
15. Discontinuous only when $x^2 - 4x + 3 = 0 \Rightarrow (x - 3)(x - 1) = 0 \Rightarrow x = 3$ or $x = 1$
16. Discontinuous only when $x^2 - 3x - 10 = 0 \Rightarrow (x - 5)(x + 2) = 0 \Rightarrow x = 5$ or $x = -2$
17. Continuous everywhere. ($|x - 1| + \sin x$ defined for all x ; limits exist and are equal to function values.)
18. Continuous everywhere. ($|x| + 1 \neq 0$ for all x ; limits exist and are equal to function values.)
19. Discontinuous only at $x = 0$
20. Discontinuous at odd integer multiples of $\frac{\pi}{2}$, i.e., $x = (2n - 1)\frac{\pi}{2}$, n an integer, but continuous at all other x .
21. Discontinuous when $2x$ is an integer multiple of π , i.e., $2x = n\pi$, n an integer $\Rightarrow x = \frac{n\pi}{2}$, n an integer, but continuous at all other x .
22. Discontinuous when $\frac{\pi x}{2}$ is an odd integer multiple of $\frac{\pi}{2}$, i.e., $\frac{\pi x}{2} = (2n - 1)\frac{\pi}{2}$, n an integer $\Rightarrow x = 2n - 1$, n an integer (i.e., x is an odd integer). Continuous everywhere else.
23. Discontinuous at odd integer multiples of $\frac{\pi}{2}$, i.e., $x = (2n - 1)\frac{\pi}{2}$, n an integer, but continuous at all other x .
24. Continuous everywhere since $x^4 + 1 \geq 1$ and $-1 \leq \sin x \leq 1 \Rightarrow 0 \leq \sin^2 x \leq 1 \Rightarrow 1 + \sin^2 x \geq 1$; limits exist and are equal to the function values.
25. Discontinuous when $2x + 3 < 0$ or $x < -\frac{3}{2} \Rightarrow$ continuous on the interval $[-\frac{3}{2}, \infty)$.

80 Chapter 2 Limits and Continuity

26. Discontinuous when $3x - 1 < 0$ or $x < \frac{1}{3} \Rightarrow$ continuous on the interval $[\frac{1}{3}, \infty)$.

27. Continuous everywhere: $(2x - 1)^{1/3}$ is defined for all x ; limits exist and are equal to function values.

28. Continuous everywhere: $(2 - x)^{1/5}$ is defined for all x ; limits exist and are equal to function values.

29. $\lim_{x \rightarrow \pi} \sin(x - \sin x) = \sin(\pi - \sin \pi) = \sin(\pi - 0) = \sin \pi = 0$, and function continuous at $x = \pi$.

30. $\lim_{t \rightarrow 0} \sin\left(\frac{\pi}{2} \cos(\tan t)\right) = \sin\left(\frac{\pi}{2} \cos(\tan(0))\right) = \sin\left(\frac{\pi}{2} \cos(0)\right) = \sin\left(\frac{\pi}{2}\right) = 1$, and function continuous at $t = 0$.

31. $\lim_{y \rightarrow 1} \sec(y \sec^2 y - \tan^2 y - 1) = \lim_{y \rightarrow 1} \sec(y \sec^2 y - \sec^2 y) = \lim_{y \rightarrow 1} \sec((y - 1) \sec^2 y) = \sec((1 - 1) \sec^2 1) = \sec 0 = 1$, and function continuous at $y = 1$.

32. $\lim_{x \rightarrow 0} \tan\left[\frac{\pi}{4} \cos(\sin x^{1/3})\right] = \tan\left[\frac{\pi}{4} \cos(\sin(0))\right] = \tan\left(\frac{\pi}{4} \cos(0)\right) = \tan\left(\frac{\pi}{4}\right) = 1$, and function continuous at $x = 0$.

33. $\lim_{x \rightarrow 0^+} \sin\left(\frac{\pi}{2} e^{\sqrt{x}}\right) = \sin\left(\frac{\pi}{2} e^0\right) = \sin\left(\frac{\pi}{2}\right) = 1$, and function is continuous at $x = 0$.

34. $\lim_{x \rightarrow 1} \cos^{-1}(\ln \sqrt{x}) = \cos^{-1}(\ln \sqrt{1}) = \cos^{-1}(0) = \frac{\pi}{2}$, and function is continuous at $x = 1$.

35. $g(x) = \frac{x^2 - 9}{x - 3} = \frac{(x+3)(x-3)}{(x-3)} = x + 3, x \neq 3 \Rightarrow g(3) = \lim_{x \rightarrow 3} (x + 3) = 6$

36. $h(t) = \frac{t^2 + 3t - 10}{t - 2} = \frac{(t+5)(t-2)}{t-2} = t + 5, t \neq 2 \Rightarrow h(2) = \lim_{t \rightarrow 2} (t + 5) = 7$

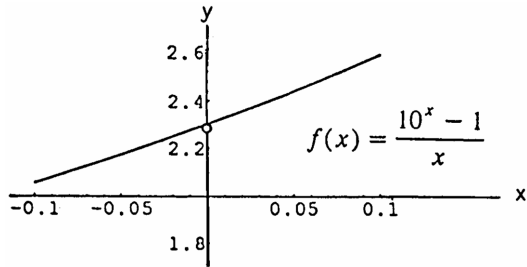
37. $f(s) = \frac{s^3 - 1}{s^2 - 1} = \frac{(s^2 + s + 1)(s - 1)}{(s + 1)(s - 1)} = \frac{s^2 + s + 1}{s + 1}, s \neq 1 \Rightarrow f(1) = \lim_{s \rightarrow 1} \left(\frac{s^2 + s + 1}{s + 1}\right) = \frac{3}{2}$

38. $g(x) = \frac{x^2 - 16}{x^2 - 3x - 4} = \frac{(x+4)(x-4)}{(x-4)(x+1)} = \frac{x+4}{x+1}, x \neq 4 \Rightarrow g(4) = \lim_{x \rightarrow 4} \left(\frac{x+4}{x+1}\right) = \frac{8}{5}$

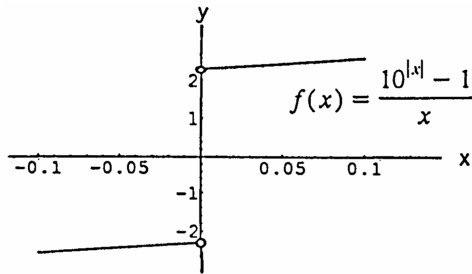
39. As defined, $\lim_{x \rightarrow 3^-} f(x) = (3)^2 - 1 = 8$ and $\lim_{x \rightarrow 3^+} (2a)(3) = 6a$. For $f(x)$ to be continuous we must have $6a = 8 \Rightarrow a = \frac{4}{3}$.

40. As defined, $\lim_{x \rightarrow -2^-} g(x) = -2$ and $\lim_{x \rightarrow -2^+} g(x) = b(-2)^2 = 4b$. For $g(x)$ to be continuous we must have $4b = -2 \Rightarrow b = -\frac{1}{2}$.

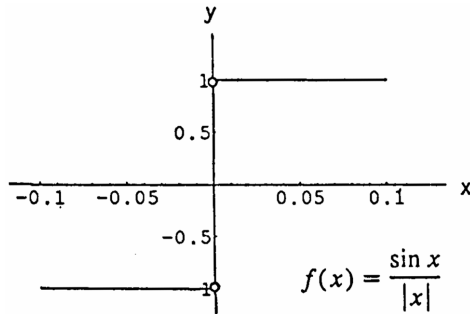
41. The function can be extended: $f(0) \approx 2.3$.



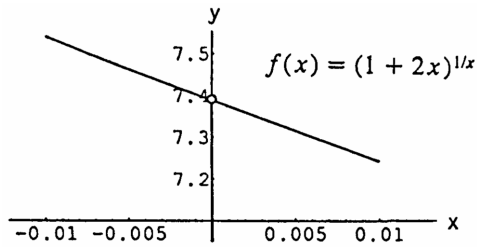
42. The function cannot be extended to be continuous at $x = 0$. If $f(0) \approx 2.3$, it will be continuous from the right. Or if $f(0) \approx -2.3$, it will be continuous from the left.



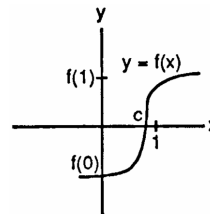
43. The function cannot be extended to be continuous at $x = 0$. If $f(0) = 1$, it will be continuous from the right. Or if $f(0) = -1$, it will be continuous from the left.



44. The function can be extended: $f(0) \approx 7.39$.



45. $f(x)$ is continuous on $[0, 1]$ and $f(0) < 0, f(1) > 0$
 \Rightarrow by the Intermediate Value Theorem $f(x)$ takes on every value between $f(0)$ and $f(1)$ \Rightarrow the equation $f(x) = 0$ has at least one solution between $x = 0$ and $x = 1$.



46. $\cos x = x \Rightarrow (\cos x) - x = 0$. If $x = -\frac{\pi}{2}$, $\cos(-\frac{\pi}{2}) - (-\frac{\pi}{2}) > 0$. If $x = \frac{\pi}{2}$, $\cos(\frac{\pi}{2}) - \frac{\pi}{2} < 0$. Thus $\cos x - x = 0$ for some x between $-\frac{\pi}{2}$ and $\frac{\pi}{2}$ according to the Intermediate Value Theorem, since the function $\cos x - x$ is continuous.

47. Let $f(x) = x^3 - 15x + 1$, which is continuous on $[-4, 4]$. Then $f(-4) = -3, f(-1) = 15, f(1) = -13$, and $f(4) = 5$. By the Intermediate Value Theorem, $f(x) = 0$ for some x in each of the intervals $-4 < x < -1, -1 < x < 1$, and $1 < x < 4$. That is, $x^3 - 15x + 1 = 0$ has three solutions in $[-4, 4]$. Since a polynomial of degree 3 can have at most 3 solutions, these are the only solutions.

48. Without loss of generality, assume that $a < b$. Then $F(x) = (x - a)^2(x - b)^2 + x$ is continuous for all values of x , so it is continuous on the interval $[a, b]$. Moreover $F(a) = a$ and $F(b) = b$. By the Intermediate Value Theorem, since $a < \frac{a+b}{2} < b$, there is a number c between a and b such that $F(x) = \frac{a+b}{2}$.

49. Answers may vary. Note that f is continuous for every value of x .

- (a) $f(0) = 10$, $f(1) = 1^3 - 8(1) + 10 = 3$. Since $3 < \pi < 10$, by the Intermediate Value Theorem, there exists a c so that $0 < c < 1$ and $f(c) = \pi$.
- (b) $f(0) = 10$, $f(-4) = (-4)^3 - 8(-4) + 10 = -22$. Since $-22 < -\sqrt{3} < 10$, by the Intermediate Value Theorem, there exists a c so that $-4 < c < 0$ and $f(c) = -\sqrt{3}$.
- (c) $f(0) = 10$, $f(1000) = (1000)^3 - 8(1000) + 10 = 999,992,010$. Since $10 < 5,000,000 < 999,992,010$, by the Intermediate Value Theorem, there exists a c so that $0 < c < 1000$ and $f(c) = 5,000,000$.

50. All five statements ask for the same information because of the intermediate value property of continuous functions.

- (a) A root of $f(x) = x^3 - 3x - 1$ is a point c where $f(c) = 0$.
- (b) The points where $y = x^3$ crosses $y = 3x + 1$ have the same y -coordinate, or $y = x^3 = 3x + 1$
 $\Rightarrow f(x) = x^3 - 3x - 1 = 0$.
- (c) $x^3 - 3x = 1 \Rightarrow x^3 - 3x - 1 = 0$. The solutions to the equation are the roots of $f(x) = x^3 - 3x - 1$.
- (d) The points where $y = x^3 - 3x$ crosses $y = 1$ have common y -coordinates, or $y = x^3 - 3x = 1$
 $\Rightarrow f(x) = x^3 - 3x - 1 = 0$.
- (e) The solutions of $x^3 - 3x - 1 = 0$ are those points where $f(x) = x^3 - 3x - 1$ has value 0.

51. Answers may vary. For example, $f(x) = \frac{\sin(x-2)}{x-2}$ is discontinuous at $x = 2$ because it is not defined there. However, the discontinuity can be removed because f has a limit (namely 1) as $x \rightarrow 2$.

52. Answers may vary. For example, $g(x) = \frac{1}{x+1}$ has a discontinuity at $x = -1$ because $\lim_{x \rightarrow -1} g(x)$ does not exist.

$$\left(\lim_{x \rightarrow -1^-} g(x) = -\infty \text{ and } \lim_{x \rightarrow -1^+} g(x) = +\infty. \right)$$

53. (a) Suppose x_0 is rational $\Rightarrow f(x_0) = 1$. Choose $\epsilon = \frac{1}{2}$. For any $\delta > 0$ there is an irrational number x (actually infinitely many) in the interval $(x_0 - \delta, x_0 + \delta) \Rightarrow f(x) = 0$. Then $0 < |x - x_0| < \delta$ but $|f(x) - f(x_0)| = 1 > \frac{1}{2} = \epsilon$, so $\lim_{x \rightarrow x_0} f(x)$ fails to exist $\Rightarrow f$ is discontinuous at x_0 rational.

On the other hand, x_0 irrational $\Rightarrow f(x_0) = 0$ and there is a rational number x in $(x_0 - \delta, x_0 + \delta) \Rightarrow f(x) = 1$. Again $\lim_{x \rightarrow x_0} f(x)$ fails to exist $\Rightarrow f$ is discontinuous at x_0 irrational. That is, f is discontinuous at every point.

(b) f is neither right-continuous nor left-continuous at any point x_0 because in every interval $(x_0 - \delta, x_0)$ or $(x_0, x_0 + \delta)$ there exist both rational and irrational real numbers. Thus neither limits $\lim_{x \rightarrow x_0^-} f(x)$ and

$\lim_{x \rightarrow x_0^+} f(x)$ exist by the same arguments used in part (a).

54. Yes. Both $f(x) = x$ and $g(x) = x - \frac{1}{2}$ are continuous on $[0, 1]$. However $\frac{f(x)}{g(x)}$ is undefined at $x = \frac{1}{2}$ since $g\left(\frac{1}{2}\right) = 0 \Rightarrow \frac{f(x)}{g(x)}$ is discontinuous at $x = \frac{1}{2}$.

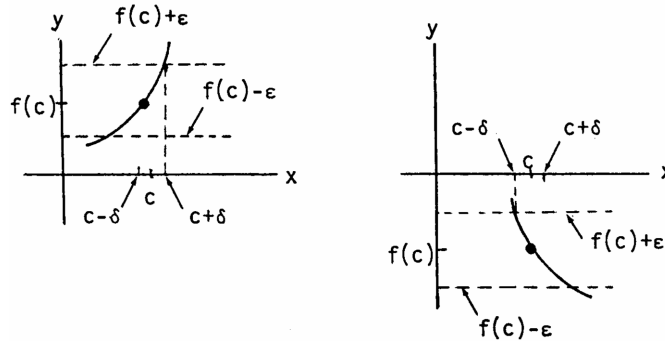
55. No. For instance, if $f(x) = 0$, $g(x) = \lceil x \rceil$, then $h(x) = 0(\lceil x \rceil) = 0$ is continuous at $x = 0$ and $g(x)$ is not.

56. Let $f(x) = \frac{1}{x-1}$ and $g(x) = x + 1$. Both functions are continuous at $x = 0$. The composition $f \circ g = f(g(x)) = \frac{1}{(x+1)-1} = \frac{1}{x}$ is discontinuous at $x = 0$, since it is not defined there. Theorem 10 requires that $f(x)$ be continuous at $g(0)$, which is not the case here since $g(0) = 1$ and f is undefined at 1.

57. Yes, because of the Intermediate Value Theorem. If $f(a)$ and $f(b)$ did have different signs then f would have to equal zero at some point between a and b since f is continuous on $[a, b]$.

58. Let $f(x)$ be the new position of point x and let $d(x) = f(x) - x$. The displacement function d is negative if x is the left-hand point of the rubber band and positive if x is the right-hand point of the rubber band. By the Intermediate Value Theorem, $d(x) = 0$ for some point in between. That is, $f(x) = x$ for some point x , which is then in its original position.
59. If $f(0) = 0$ or $f(1) = 1$, we are done (i.e., $c = 0$ or $c = 1$ in those cases). Then let $f(0) = a > 0$ and $f(1) = b < 1$ because $0 \leq f(x) \leq 1$. Define $g(x) = f(x) - x \Rightarrow g$ is continuous on $[0, 1]$. Moreover, $g(0) = f(0) - 0 = a > 0$ and $g(1) = f(1) - 1 = b - 1 < 0 \Rightarrow$ by the Intermediate Value Theorem there is a number c in $(0, 1)$ such that $g(c) = 0 \Rightarrow f(c) - c = 0$ or $f(c) = c$.

60. Let $\epsilon = \frac{|f(c)|}{2} > 0$. Since f is continuous at $x = c$ there is a $\delta > 0$ such that $|x - c| < \delta \Rightarrow |f(x) - f(c)| < \epsilon \Rightarrow f(c) - \epsilon < f(x) < f(c) + \epsilon$.
- If $f(c) > 0$, then $\epsilon = \frac{1}{2} f(c) \Rightarrow \frac{1}{2} f(c) < f(x) < \frac{3}{2} f(c) \Rightarrow f(x) > 0$ on the interval $(c - \delta, c + \delta)$.
- If $f(c) < 0$, then $\epsilon = -\frac{1}{2} f(c) \Rightarrow \frac{3}{2} f(c) < f(x) < \frac{1}{2} f(c) \Rightarrow f(x) < 0$ on the interval $(c - \delta, c + \delta)$.



61. By Exercises 52 in Section 2.3, we have $\lim_{x \rightarrow c} f(x) = L \Leftrightarrow \lim_{h \rightarrow 0} f(c + h) = L$. Thus, $f(x)$ is continuous at $x = c \Leftrightarrow \lim_{x \rightarrow c} f(x) = f(c) \Leftrightarrow \lim_{h \rightarrow 0} f(c + h) = f(c)$.
62. By Exercise 61, it suffices to show that $\lim_{h \rightarrow 0} \sin(c + h) = \sin c$ and $\lim_{h \rightarrow 0} \cos(c + h) = \cos c$.
- Now $\lim_{h \rightarrow 0} \sin(c + h) = \lim_{h \rightarrow 0} [(\sin c)(\cos h) + (\cos c)(\sin h)] = (\sin c) \left(\lim_{h \rightarrow 0} \cos h \right) + (\cos c) \left(\lim_{h \rightarrow 0} \sin h \right)$
- By Example 6 Section 2.2, $\lim_{h \rightarrow 0} \cos h = 1$ and $\lim_{h \rightarrow 0} \sin h = 0$. So $\lim_{h \rightarrow 0} \sin(c + h) = \sin c$ and thus $f(x) = \sin x$ is continuous at $x = c$. Similarly,
- $\lim_{h \rightarrow 0} \cos(c + h) = \lim_{h \rightarrow 0} [(\cos c)(\cos h) - (\sin c)(\sin h)] = (\cos c) \left(\lim_{h \rightarrow 0} \cos h \right) - (\sin c) \left(\lim_{h \rightarrow 0} \sin h \right) = \cos c$.
- Thus, $g(x) = \cos x$ is continuous at $x = c$.

- | | |
|------------------------------------------|-----------------------------------------|
| 63. $x \approx 1.8794, -1.5321, -0.3473$ | 64. $x \approx 1.4516, -0.8547, 0.4030$ |
| 65. $x \approx 1.7549$ | 66. $x \approx 1.5596$ |
| 67. $x \approx 3.5156$ | 68. $x \approx -3.9058, 3.8392, 0.0667$ |
| 69. $x \approx 0.7391$ | 70. $x \approx -1.8955, 0, 1.8955$ |

2.7 TANGENTS AND DERIVATIVES AT A POINT

1. $P_1: m_1 = 1, P_2: m_2 = 5$

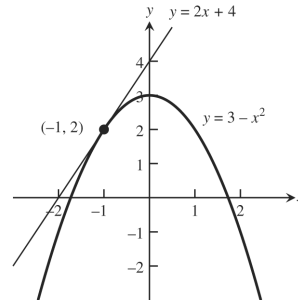
2. $P_1: m_1 = -2, P_2: m_2 = 0$

3. $P_1: m_1 = \frac{5}{2}, P_2: m_2 = -\frac{1}{2}$

4. $P_1: m_1 = 3, P_2: m_2 = -3$

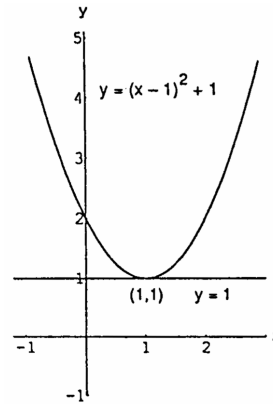
5.
$$m = \lim_{h \rightarrow 0} \frac{[3 - (-1+h)^2] - [3 - (-1)^2]}{h}$$

$$= \lim_{h \rightarrow 0} \frac{3 - (1 - 2h + h^2) - 2}{h} = \lim_{h \rightarrow 0} \frac{h(2-h)}{h} = 2;$$
 at $(-1, 2)$: $y = 2 + 2(x - (-1)) \Rightarrow y = 2x + 4$,
 tangent line



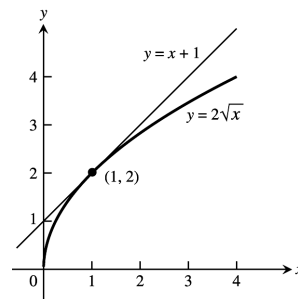
6.
$$m = \lim_{h \rightarrow 0} \frac{[(1+h-1)^2 + 1] - [(1-1)^2 + 1]}{h} = \lim_{h \rightarrow 0} \frac{h^2}{h}$$

$$= \lim_{h \rightarrow 0} h = 0;$$
 at $(1, 1)$: $y = 1 + 0(x - 1) \Rightarrow y = 1$,
 tangent line



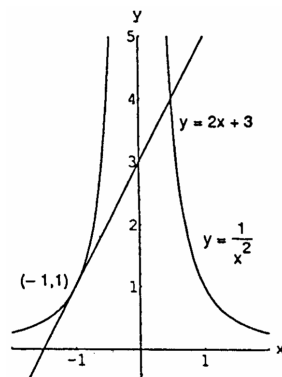
7.
$$m = \lim_{h \rightarrow 0} \frac{2\sqrt{1+h} - 2\sqrt{1}}{h} = \lim_{h \rightarrow 0} \frac{2\sqrt{1+h} - 2}{h} \cdot \frac{2\sqrt{1+h} + 2}{2\sqrt{1+h} + 2}$$

$$= \lim_{h \rightarrow 0} \frac{4(1+h) - 4}{2h(\sqrt{1+h} + 1)} = \lim_{h \rightarrow 0} \frac{2}{\sqrt{1+h} + 1} = 1;$$
 at $(1, 2)$: $y = 2 + 1(x - 1) \Rightarrow y = x + 1$, tangent line



8.
$$m = \lim_{h \rightarrow 0} \frac{\frac{1}{(-1+h)^2} - \frac{1}{(-1)^2}}{h} = \lim_{h \rightarrow 0} \frac{1 - (-1+h)^2}{h(-1+h)^2}$$

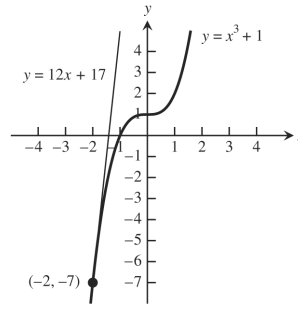
$$= \lim_{h \rightarrow 0} \frac{-(-2h + h^2)}{h(-1+h)^2} = \lim_{h \rightarrow 0} \frac{2-h}{(-1+h)^2} = 2;$$
 at $(-1, 1)$: $y = 1 + 2(x - (-1)) \Rightarrow y = 2x + 3$,
 tangent line



$$9. m = \lim_{h \rightarrow 0} \frac{(-2+h)^3 + 1 - ((-2)^3 + 1)}{h} = \lim_{h \rightarrow 0} \frac{-8 + 12h - 6h^2 + h^3 + 8}{h}$$

$$= \lim_{h \rightarrow 0} (12 - 6h + h^2) = 12;$$

at $(-2, -7)$: $y = -7 + 12(x - (-2)) \Rightarrow y = 12x + 17$,
tangent line

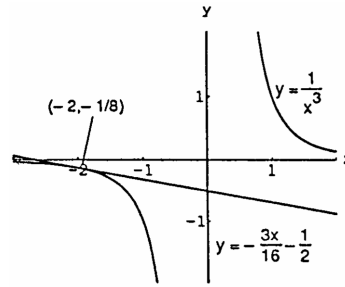


$$10. m = \lim_{h \rightarrow 0} \frac{\frac{1}{(-2+h)^3} - \frac{1}{(-2)^3}}{h} = \lim_{h \rightarrow 0} \frac{-8 - (-2+h)^3}{-8h(-2+h)^3}$$

$$= \lim_{h \rightarrow 0} \frac{-(12h - 6h^2 + h^3)}{-8h(-2+h)^3} = \lim_{h \rightarrow 0} \frac{12 - 6h + h^2}{8(-2+h)^3}$$

$$= \frac{12}{8(-8)} = -\frac{3}{16};$$

at $(-2, -\frac{1}{8})$: $y = -\frac{1}{8} - \frac{3}{16}(x - (-2))$
 $\Rightarrow y = -\frac{3}{16}x - \frac{1}{2}$, tangent line



$$11. m = \lim_{h \rightarrow 0} \frac{[(2+h)^2 + 1] - 5}{h} = \lim_{h \rightarrow 0} \frac{(5+4h+h^2) - 5}{h} = \lim_{h \rightarrow 0} \frac{h(4+h)}{h} = 4;$$

at $(2, 5)$: $y - 5 = 4(x - 2)$, tangent line

$$12. m = \lim_{h \rightarrow 0} \frac{[(1+h) - 2(1+h)^2] - (-1)}{h} = \lim_{h \rightarrow 0} \frac{(1+h-2-4h-2h^2)+1}{h} = \lim_{h \rightarrow 0} \frac{h(-3-2h)}{h} = -3;$$

at $(1, -1)$: $y + 1 = -3(x - 1)$, tangent line

$$13. m = \lim_{h \rightarrow 0} \frac{\frac{3+h}{(3+h)-2} - 3}{h} = \lim_{h \rightarrow 0} \frac{(3+h) - 3(h+1)}{h(h+1)} = \lim_{h \rightarrow 0} \frac{-2h}{h(h+1)} = -2;$$

at $(3, 3)$: $y - 3 = -2(x - 3)$, tangent line

$$14. m = \lim_{h \rightarrow 0} \frac{\frac{8}{(2+h)^2} - 2}{h} = \lim_{h \rightarrow 0} \frac{8 - 2(2+h)^2}{h(2+h)^2} = \lim_{h \rightarrow 0} \frac{8 - 2(4+4h+h^2)}{h(2+h)^2} = \lim_{h \rightarrow 0} \frac{-2h(4+h)}{h(2+h)^2} = \frac{-8}{4} = -2;$$

at $(2, 2)$: $y - 2 = -2(x - 2)$

$$15. m = \lim_{h \rightarrow 0} \frac{[(2+h)^3 - (2+h)] - 6}{h} = \lim_{h \rightarrow 0} \frac{(6+11h+6h^2+h^3) - 6}{h} = \lim_{h \rightarrow 0} \frac{h(11+6h+h^2)}{h} = 11;$$

at $(2, 6)$: $y - 6 = 11(x - 2)$, tangent line

$$16. m = \lim_{h \rightarrow 0} \frac{[(1+h)^3 + 3(1+h)] - 4}{h} = \lim_{h \rightarrow 0} \frac{(1+3h+3h^2+h^3+3+3h) - 4}{h} = \lim_{h \rightarrow 0} \frac{h(6+3h+h^2)}{h} = 6;$$

at $(1, 4)$: $y - 4 = 6(x - 1)$, tangent line

$$17. m = \lim_{h \rightarrow 0} \frac{\sqrt{4+h} - 2}{h} = \lim_{h \rightarrow 0} \frac{\sqrt{4+h} - 2}{h} \cdot \frac{\sqrt{4+h} + 2}{\sqrt{4+h} + 2} = \lim_{h \rightarrow 0} \frac{(4+h) - 4}{h(\sqrt{4+h} + 2)} = \lim_{h \rightarrow 0} \frac{h}{h(\sqrt{4+h} + 2)} = \frac{1}{\sqrt{4+2}}$$

$$= \frac{1}{4}; \text{ at } (4, 2): y - 2 = \frac{1}{4}(x - 4), \text{ tangent line}$$

$$18. m = \lim_{h \rightarrow 0} \frac{\sqrt{(8+h)+1} - 3}{h} = \lim_{h \rightarrow 0} \frac{\sqrt{9+h} - 3}{h} \cdot \frac{\sqrt{9+h} + 3}{\sqrt{9+h} + 3} = \lim_{h \rightarrow 0} \frac{(9+h) - 9}{h(\sqrt{9+h} + 3)} = \lim_{h \rightarrow 0} \frac{h}{h(\sqrt{9+h} + 3)}$$

$$= \frac{1}{\sqrt{9+3}} = \frac{1}{6}; \text{ at } (8, 3): y - 3 = \frac{1}{6}(x - 8), \text{ tangent line}$$

$$19. \text{ At } x = -1, y = 5 \Rightarrow m = \lim_{h \rightarrow 0} \frac{5(-1+h)^2 - 5}{h} = \lim_{h \rightarrow 0} \frac{5(1-2h+h^2) - 5}{h} = \lim_{h \rightarrow 0} \frac{5h(-2+h)}{h} = -10, \text{ slope}$$

$$20. \text{ At } x = 2, y = -3 \Rightarrow m = \lim_{h \rightarrow 0} \frac{[1 - (2+h)^2] - (-3)}{h} = \lim_{h \rightarrow 0} \frac{(1 - 4 - 4h - h^2) + 3}{h} = \lim_{h \rightarrow 0} \frac{-h(4+h)}{h} = -4, \text{ slope}$$

$$21. \text{ At } x = 3, y = \frac{1}{2} \Rightarrow m = \lim_{h \rightarrow 0} \frac{\frac{1}{(3+h)-1} - \frac{1}{2}}{h} = \lim_{h \rightarrow 0} \frac{2 - (2+h)}{2h(2+h)} = \lim_{h \rightarrow 0} \frac{-h}{2h(2+h)} = -\frac{1}{4}, \text{ slope}$$

$$22. \text{ At } x = 0, y = -1 \Rightarrow m = \lim_{h \rightarrow 0} \frac{\frac{h-1}{h+1} - (-1)}{h} = \lim_{h \rightarrow 0} \frac{(h-1) + (h+1)}{h(h+1)} = \lim_{h \rightarrow 0} \frac{2h}{h(h+1)} = 2, \text{ slope}$$

$$23. \text{ At a horizontal tangent the slope } m = 0 \Rightarrow 0 = m = \lim_{h \rightarrow 0} \frac{[(x+h)^2 + 4(x+h) - 1] - (x^2 + 4x - 1)}{h} \\ = \lim_{h \rightarrow 0} \frac{(x^2 + 2xh + h^2 + 4x + 4h - 1) - (x^2 + 4x - 1)}{h} = \lim_{h \rightarrow 0} \frac{(2xh + h^2 + 4h)}{h} = \lim_{h \rightarrow 0} (2x + h + 4) = 2x + 4;$$

$2x + 4 = 0 \Rightarrow x = -2$. Then $f(-2) = 4 - 8 - 1 = -5 \Rightarrow (-2, -5)$ is the point on the graph where there is a horizontal tangent.

$$24. 0 = m = \lim_{h \rightarrow 0} \frac{[(x+h)^3 - 3(x+h)] - (x^3 - 3x)}{h} = \lim_{h \rightarrow 0} \frac{(x^3 + 3x^2h + 3xh^2 + h^3 - 3x - 3h) - (x^3 - 3x)}{h} \\ = \lim_{h \rightarrow 0} \frac{3x^2h + 3xh^2 + h^3 - 3h}{h} = \lim_{h \rightarrow 0} (3x^2 + 3xh + h^2 - 3) = 3x^2 - 3; 3x^2 - 3 = 0 \Rightarrow x = -1 \text{ or } x = 1. \text{ Then} \\ f(-1) = 2 \text{ and } f(1) = -2 \Rightarrow (-1, 2) \text{ and } (1, -2) \text{ are the points on the graph where a horizontal tangent exists.}$$

$$25. -1 = m = \lim_{h \rightarrow 0} \frac{\frac{1}{(x+h)-1} - \frac{1}{x-1}}{h} = \lim_{h \rightarrow 0} \frac{(x-1) - (x+h-1)}{h(x-1)(x+h-1)} = \lim_{h \rightarrow 0} \frac{-h}{h(x-1)(x+h-1)} = -\frac{1}{(x-1)^2} \\ \Rightarrow (x-1)^2 = 1 \Rightarrow x^2 - 2x = 0 \Rightarrow x(x-2) = 0 \Rightarrow x = 0 \text{ or } x = 2. \text{ If } x = 0, \text{ then } y = -1 \text{ and } m = -1 \\ \Rightarrow y = -1 - (x-0) = -(x+1). \text{ If } x = 2, \text{ then } y = 1 \text{ and } m = -1 \Rightarrow y = 1 - (x-2) = -(x-3).$$

$$26. \frac{1}{4} = m = \lim_{h \rightarrow 0} \frac{\sqrt{x+h} - \sqrt{x}}{h} = \lim_{h \rightarrow 0} \frac{\sqrt{x+h} - \sqrt{x}}{h} \cdot \frac{\sqrt{x+h} + \sqrt{x}}{\sqrt{x+h} + \sqrt{x}} = \lim_{h \rightarrow 0} \frac{(x+h) - x}{h(\sqrt{x+h} + \sqrt{x})} \\ = \lim_{h \rightarrow 0} \frac{h}{h(\sqrt{x+h} + \sqrt{x})} = \frac{1}{2\sqrt{x}}. \text{ Thus, } \frac{1}{4} = \frac{1}{2\sqrt{x}} \Rightarrow \sqrt{x} = 2 \Rightarrow x = 4 \Rightarrow y = 2. \text{ The tangent line is} \\ y = 2 + \frac{1}{4}(x-4) = \frac{x}{4} + 1.$$

$$27. \lim_{h \rightarrow 0} \frac{f(2+h) - f(2)}{h} = \lim_{h \rightarrow 0} \frac{(100 - 4.9(2+h)^2) - (100 - 4.9(2)^2)}{h} = \lim_{h \rightarrow 0} \frac{-4.9(4 + 4h + h^2) + 4.9(4)}{h} \\ = \lim_{h \rightarrow 0} (-19.6 - 4.9h) = -19.6. \text{ The minus sign indicates the object is falling } \underline{\text{downward}} \text{ at a speed of} \\ 19.6 \text{ m/sec.}$$

$$28. \lim_{h \rightarrow 0} \frac{f(10+h) - f(10)}{h} = \lim_{h \rightarrow 0} \frac{3(10+h)^2 - 3(10)^2}{h} = \lim_{h \rightarrow 0} \frac{3(20h + h^2)}{h} = 60 \text{ ft/sec.}$$

$$29. \lim_{h \rightarrow 0} \frac{f(3+h) - f(3)}{h} = \lim_{h \rightarrow 0} \frac{\pi(3+h)^2 - \pi(3)^2}{h} = \lim_{h \rightarrow 0} \frac{\pi[9 + 6h + h^2 - 9]}{h} = \lim_{h \rightarrow 0} \pi(6+h) = 6\pi$$

$$30. \lim_{h \rightarrow 0} \frac{f(2+h) - f(2)}{h} = \lim_{h \rightarrow 0} \frac{\frac{4\pi}{3}(2+h)^3 - \frac{4\pi}{3}(2)^3}{h} = \lim_{h \rightarrow 0} \frac{\frac{4\pi}{3}[12h + 6h^2 + h^3]}{h} = \lim_{h \rightarrow 0} \frac{4\pi}{3}[12 + 6h + h^2] = 16\pi$$

$$31. \lim_{h \rightarrow 0} \frac{(m(x_0+h)+b) - (mx_0+b)}{h} = \lim_{h \rightarrow 0} \frac{mx_0 + mh + b - mx_0 - b}{h} = \lim_{h \rightarrow 0} \frac{mh}{h} = \lim_{h \rightarrow 0} m = m \\ y - (mx_0 + b) = m(x - x_0) \rightarrow y - mx_0 - b = mx - mx_0 \rightarrow y = mx + b$$

$$32. \lim_{h \rightarrow 0} \frac{\frac{1}{\sqrt{4+h}} - \frac{1}{2}}{h} = \lim_{h \rightarrow 0} \frac{\frac{2 - \sqrt{4+h}}{2\sqrt{4+h}}}{h} = \lim_{h \rightarrow 0} \frac{2 - \sqrt{4+h}}{2h\sqrt{4+h}} = \lim_{h \rightarrow 0} \frac{(2 - \sqrt{4+h})(2 + \sqrt{4+h})}{2h\sqrt{4+h}(2 + \sqrt{4+h})} = \lim_{h \rightarrow 0} \frac{4 - (4+h)}{2h\sqrt{4+h}(2 + \sqrt{4+h})} \\ = \lim_{h \rightarrow 0} \frac{-h}{2h\sqrt{4+h}(2 + \sqrt{4+h})} = \lim_{h \rightarrow 0} \frac{-1}{2\sqrt{4+h}(2 + \sqrt{4+h})} = \frac{-1}{2\sqrt{4+0}(2 + \sqrt{4+0})} = \frac{-1}{16} \rightarrow m = \frac{-1}{16}$$

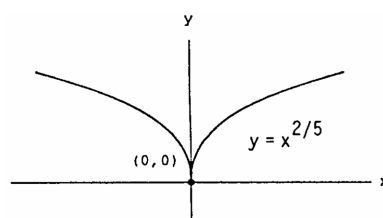
33. Slope at origin $= \lim_{h \rightarrow 0} \frac{f(0+h)-f(0)}{h} = \lim_{h \rightarrow 0} \frac{h^2 \sin(\frac{1}{h})}{h} = \lim_{h \rightarrow 0} h \sin(\frac{1}{h}) = 0 \Rightarrow$ yes, $f(x)$ does have a tangent at the origin with slope 0.

34. $\lim_{h \rightarrow 0} \frac{g(0+h)-g(0)}{h} = \lim_{h \rightarrow 0} \frac{h \sin(\frac{1}{h})}{h} = \lim_{h \rightarrow 0} \sin \frac{1}{h}$. Since $\lim_{h \rightarrow 0} \sin \frac{1}{h}$ does not exist, $f(x)$ has no tangent at the origin.

35. $\lim_{h \rightarrow 0^-} \frac{f(0+h)-f(0)}{h} = \lim_{h \rightarrow 0^-} \frac{-1-0}{h} = \infty$, and $\lim_{h \rightarrow 0^+} \frac{f(0+h)-f(0)}{h} = \lim_{h \rightarrow 0^+} \frac{1-0}{h} = \infty$. Therefore,
 $\lim_{h \rightarrow 0} \frac{f(0+h)-f(0)}{h} = \infty \Rightarrow$ yes, the graph of f has a vertical tangent at the origin.

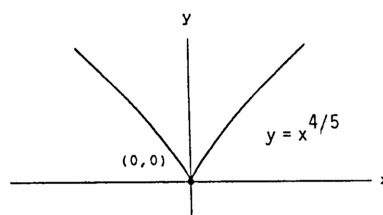
36. $\lim_{h \rightarrow 0^-} \frac{U(0+h)-U(0)}{h} = \lim_{h \rightarrow 0^-} \frac{0-1}{h} = \infty$, and $\lim_{h \rightarrow 0^+} \frac{U(0+h)-U(0)}{h} = \lim_{h \rightarrow 0^+} \frac{1-1}{h} = 0 \Rightarrow$ no, the graph of f does not have a vertical tangent at $(0, 1)$ because the limit does not exist.

37. (a) The graph appears to have a cusp at $x = 0$.



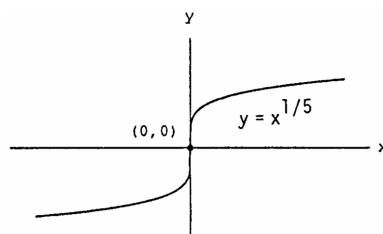
(b) $\lim_{h \rightarrow 0^-} \frac{f(0+h)-f(0)}{h} = \lim_{h \rightarrow 0^-} \frac{h^{2/5}-0}{h} = \lim_{h \rightarrow 0^-} \frac{1}{h^{3/5}} = -\infty$ and $\lim_{h \rightarrow 0^+} \frac{1}{h^{3/5}} = \infty \Rightarrow$ limit does not exist
 \Rightarrow the graph of $y = x^{2/5}$ does not have a vertical tangent at $x = 0$.

38. (a) The graph appears to have a cusp at $x = 0$.



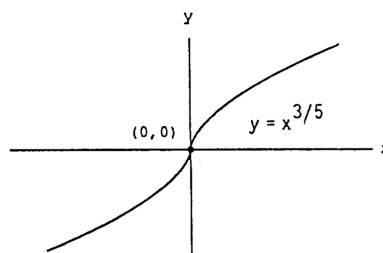
(b) $\lim_{h \rightarrow 0^-} \frac{f(0+h)-f(0)}{h} = \lim_{h \rightarrow 0^-} \frac{h^{4/5}-0}{h} = \lim_{h \rightarrow 0^-} \frac{1}{h^{1/5}} = -\infty$ and $\lim_{h \rightarrow 0^+} \frac{1}{h^{1/5}} = \infty \Rightarrow$ limit does not exist
 $\Rightarrow y = x^{4/5}$ does not have a vertical tangent at $x = 0$.

39. (a) The graph appears to have a vertical tangent at $x = 0$.



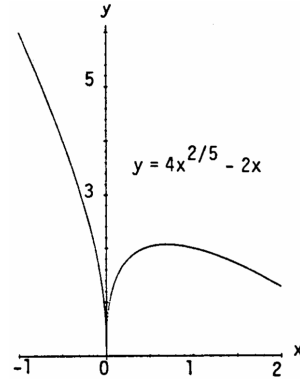
(b) $\lim_{h \rightarrow 0} \frac{f(0+h)-f(0)}{h} = \lim_{h \rightarrow 0} \frac{h^{1/5}-0}{h} = \lim_{h \rightarrow 0} \frac{1}{h^{4/5}} = \infty \Rightarrow y = x^{1/5}$ has a vertical tangent at $x = 0$.

40. (a) The graph appears to have a vertical tangent at $x = 0$.



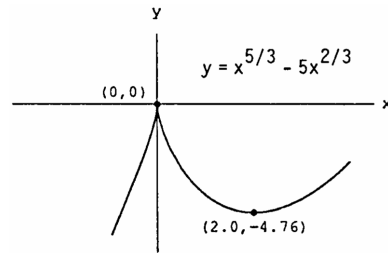
- (b) $\lim_{h \rightarrow 0} \frac{f(0+h)-f(0)}{h} = \lim_{h \rightarrow 0} \frac{h^{3/5}-0}{h} = \lim_{h \rightarrow 0} \frac{1}{h^{2/5}} = \infty \Rightarrow$ the graph of $y = x^{3/5}$ has a vertical tangent at $x = 0$.

41. (a) The graph appears to have a cusp at $x = 0$.



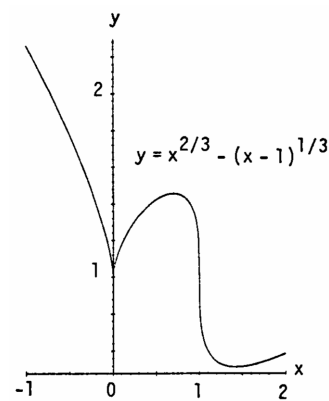
- (b) $\lim_{h \rightarrow 0^-} \frac{f(0+h)-f(0)}{h} = \lim_{h \rightarrow 0^-} \frac{4h^{2/5}-2h}{h} = \lim_{h \rightarrow 0^-} \frac{4}{h^{3/5}} - 2 = -\infty$ and $\lim_{h \rightarrow 0^+} \frac{4}{h^{3/5}} - 2 = \infty$
 \Rightarrow limit does not exist \Rightarrow the graph of $y = 4x^{2/5} - 2x$ does not have a vertical tangent at $x = 0$.

42. (a) The graph appears to have a cusp at $x = 0$.



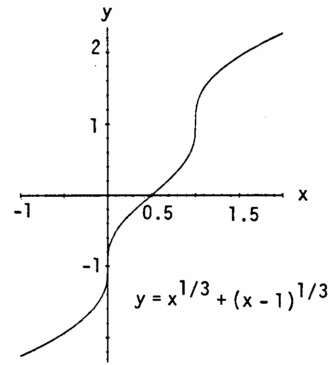
- (b) $\lim_{h \rightarrow 0} \frac{f(0+h)-f(0)}{h} = \lim_{h \rightarrow 0} \frac{h^{5/3}-5h^{2/3}}{h} = \lim_{h \rightarrow 0} h^{2/3} - \frac{5}{h^{1/3}} = 0 - \lim_{h \rightarrow 0} \frac{5}{h^{1/3}}$ does not exist \Rightarrow the graph of $y = x^{5/3} - 5x^{2/3}$ does not have a vertical tangent at $x = 0$.

43. (a) The graph appears to have a vertical tangent at $x = 1$ and a cusp at $x = 0$.



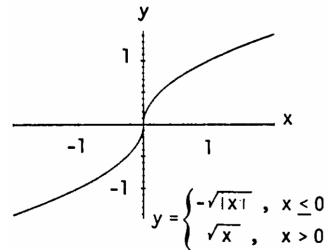
- (b) $x = 1$: $\lim_{h \rightarrow 0} \frac{(1+h)^{2/3} - (1+h-1)^{1/3} - 1}{h} = \lim_{h \rightarrow 0} \frac{(1+h)^{2/3} - h^{1/3} - 1}{h} = -\infty$
 $\Rightarrow y = x^{2/3} - (x-1)^{1/3}$ has a vertical tangent at $x = 1$;
 $x = 0$: $\lim_{h \rightarrow 0} \frac{f(0+h)-f(0)}{h} = \lim_{h \rightarrow 0} \frac{h^{2/3} - (h-1)^{1/3} - (-1)^{1/3}}{h} = \lim_{h \rightarrow 0} \left[\frac{1}{h^{1/3}} - \frac{(h-1)^{1/3}}{h} + \frac{1}{h} \right]$
 does not exist $\Rightarrow y = x^{2/3} - (x-1)^{1/3}$ does not have a vertical tangent at $x = 0$.

44. (a) The graph appears to have vertical tangents at $x = 0$ and $x = 1$.



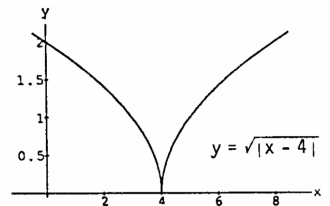
- (b) $x = 0$: $\lim_{h \rightarrow 0} \frac{f(0+h) - f(0)}{h} = \lim_{h \rightarrow 0} \frac{h^{1/3} + (h-1)^{1/3} - (-1)^{1/3}}{h} = \infty \Rightarrow y = x^{1/3} + (x-1)^{1/3}$ has a vertical tangent at $x = 0$;
 $x = 1$: $\lim_{h \rightarrow 0} \frac{f(1+h) - f(1)}{h} = \lim_{h \rightarrow 0} \frac{(1+h)^{1/3} + (1+h-1)^{1/3} - 1}{h} = \infty \Rightarrow y = x^{1/3} + (x-1)^{1/3}$ has a vertical tangent at $x = 1$.

45. (a) The graph appears to have a vertical tangent at $x = 0$.



- (b) $\lim_{h \rightarrow 0^+} \frac{f(0+h) - f(0)}{h} = \lim_{x \rightarrow 0^+} \frac{\sqrt{h} - 0}{h} = \lim_{h \rightarrow 0^+} \frac{1}{\sqrt{h}} = \infty$;
 $\lim_{h \rightarrow 0^-} \frac{f(0+h) - f(0)}{h} = \lim_{h \rightarrow 0^-} \frac{-\sqrt{|h|} - 0}{h} = \lim_{h \rightarrow 0^-} \frac{-\sqrt{|h|}}{-|h|} = \lim_{h \rightarrow 0^-} \frac{1}{\sqrt{|h|}} = \infty$
 $\Rightarrow y$ has a vertical tangent at $x = 0$.

46. (a) The graph appears to have a cusp at $x = 4$.



- (b) $\lim_{h \rightarrow 0^+} \frac{f(4+h) - f(4)}{h} = \lim_{h \rightarrow 0^+} \frac{\sqrt{4 - (4+h)} - 0}{h} = \lim_{h \rightarrow 0^+} \frac{\sqrt{|h|}}{h} = \lim_{h \rightarrow 0^+} \frac{1}{\sqrt{h}} = \infty$;
 $\lim_{h \rightarrow 0^-} \frac{f(4+h) - f(4)}{h} = \lim_{h \rightarrow 0^-} \frac{\sqrt{4 - (4+h)}}{h} = \lim_{h \rightarrow 0^-} \frac{\sqrt{|h|}}{-|h|} = \lim_{h \rightarrow 0^-} \frac{-1}{\sqrt{|h|}} = -\infty$
 $\Rightarrow y = \sqrt{4 - x}$ does not have a vertical tangent at $x = 4$.

- 47-50. Example CAS commands:

Maple:

```
f := x -> x^3 + 2*x; x0 := 0;
plot( f(x), x=x0-1/2..x0+3, color=black,          # part (a)
      title="Section 2.7, #47(a)" );
q := unapply( (f(x0+h)-f(x0))/h, h );           # part (b)
L := limit( q(h), h=0 );                       # part (c)
sec_lines := seq( f(x0)+q(h)*(x-x0), h=1..3 ); # part (d)
tan_line := f(x0) + L*(x-x0);
plot( [f(x),tan_line,sec_lines], x=x0-1/2..x0+3, color=black,
```

```
linestyle={1,2,5,6,7}, title="Section 2.7, #47(d)",
legend={"y=f(x)", "Tangent line at x=0", "Secant line (h=1)",
"Secant line (h=2)", "Secant line (h=3)"}];
```

Mathematica: (function and value for x0 may change)

```
Clear[f, m, x, h]
x0 = p;
f[x_] := Cos[x] + 4Sin[2x]
Plot[f[x], {x, x0 - 1, x0 + 3}]
dq[h_] := (f[x0+h] - f[x0])/h
m = Limit[dq[h], h -> 0]
ytan := f[x0] + m(x - x0)
y1 := f[x0] + dq[1](x - x0)
y2 := f[x0] + dq[2](x - x0)
y3 := f[x0] + dq[3](x - x0)
Plot[{f[x], ytan, y1, y2, y3}, {x, x0 - 1, x0 + 3}]
```

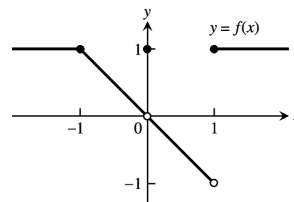
CHAPTER 2 PRACTICE EXERCISES

1. At $x = -1$: $\lim_{x \rightarrow -1^-} f(x) = \lim_{x \rightarrow -1^+} f(x) = 1$
 $\Rightarrow \lim_{x \rightarrow -1} f(x) = 1 = f(-1)$
 $\Rightarrow f$ is continuous at $x = -1$.

At $x = 0$: $\lim_{x \rightarrow 0^-} f(x) = \lim_{x \rightarrow 0^+} f(x) = 0 \Rightarrow \lim_{x \rightarrow 0} f(x) = 0$.
 But $f(0) = 1 \neq \lim_{x \rightarrow 0} f(x)$
 $\Rightarrow f$ is discontinuous at $x = 0$.

If we define $f(0) = 0$, then the discontinuity at $x = 0$ is removable.

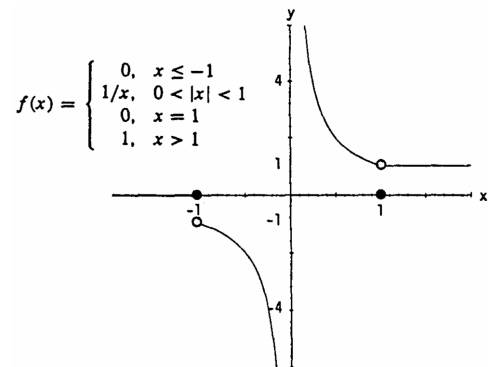
At $x = 1$: $\lim_{x \rightarrow 1^-} f(x) = -1$ and $\lim_{x \rightarrow 1^+} f(x) = 1$
 $\Rightarrow \lim_{x \rightarrow 1} f(x)$ does not exist
 $\Rightarrow f$ is discontinuous at $x = 1$.



2. At $x = -1$: $\lim_{x \rightarrow -1^-} f(x) = 0$ and $\lim_{x \rightarrow -1^+} f(x) = -1$
 $\Rightarrow \lim_{x \rightarrow -1} f(x)$ does not exist
 $\Rightarrow f$ is discontinuous at $x = -1$.

At $x = 0$: $\lim_{x \rightarrow 0^-} f(x) = -\infty$ and $\lim_{x \rightarrow 0^+} f(x) = \infty$
 $\Rightarrow \lim_{x \rightarrow 0} f(x)$ does not exist
 $\Rightarrow f$ is discontinuous at $x = 0$.

At $x = 1$: $\lim_{x \rightarrow 1^-} f(x) = \lim_{x \rightarrow 1^+} f(x) = 1 \Rightarrow \lim_{x \rightarrow 1} f(x) = 1$.
 But $f(1) = 0 \neq \lim_{x \rightarrow 1} f(x)$
 $\Rightarrow f$ is discontinuous at $x = 1$.
 If we define $f(1) = 1$, then the discontinuity at $x = 1$ is removable.



3. (a) $\lim_{t \rightarrow t_0} (3f(t)) = 3 \lim_{t \rightarrow t_0} f(t) = 3(-7) = -21$

(b) $\lim_{t \rightarrow t_0} (f(t))^2 = \left(\lim_{t \rightarrow t_0} f(t) \right)^2 = (-7)^2 = 49$

$$(c) \lim_{t \rightarrow t_0} (f(t) \cdot g(t)) = \lim_{t \rightarrow t_0} f(t) \cdot \lim_{t \rightarrow t_0} g(t) = (-7)(0) = 0$$

$$(d) \lim_{t \rightarrow t_0} \frac{f(t)}{g(t)-7} = \frac{\lim_{t \rightarrow t_0} f(t)}{\lim_{t \rightarrow t_0} (g(t)-7)} = \frac{\lim_{t \rightarrow t_0} f(t)}{\lim_{t \rightarrow t_0} g(t) - \lim_{t \rightarrow t_0} 7} = \frac{-7}{0-7} = 1$$

$$(e) \lim_{t \rightarrow t_0} \cos(g(t)) = \cos\left(\lim_{t \rightarrow t_0} g(t)\right) = \cos 0 = 1$$

$$(f) \lim_{t \rightarrow t_0} |f(t)| = \left| \lim_{t \rightarrow t_0} f(t) \right| = |-7| = 7$$

$$(g) \lim_{t \rightarrow t_0} (f(t) + g(t)) = \lim_{t \rightarrow t_0} f(t) + \lim_{t \rightarrow t_0} g(t) = -7 + 0 = -7$$

$$(h) \lim_{t \rightarrow t_0} \left(\frac{1}{f(t)}\right) = \frac{1}{\lim_{t \rightarrow t_0} f(t)} = \frac{1}{-7} = -\frac{1}{7}$$

$$4. (a) \lim_{x \rightarrow 0} -g(x) = -\lim_{x \rightarrow 0} g(x) = -\sqrt{2}$$

$$(b) \lim_{x \rightarrow 0} (g(x) \cdot f(x)) = \lim_{x \rightarrow 0} g(x) \cdot \lim_{x \rightarrow 0} f(x) = (\sqrt{2})\left(\frac{1}{2}\right) = \frac{\sqrt{2}}{2}$$

$$(c) \lim_{x \rightarrow 0} (f(x) + g(x)) = \lim_{x \rightarrow 0} f(x) + \lim_{x \rightarrow 0} g(x) = \frac{1}{2} + \sqrt{2}$$

$$(d) \lim_{x \rightarrow 0} \frac{1}{f(x)} = \frac{1}{\lim_{x \rightarrow 0} f(x)} = \frac{1}{\frac{1}{2}} = 2$$

$$(e) \lim_{x \rightarrow 0} (x + f(x)) = \lim_{x \rightarrow 0} x + \lim_{x \rightarrow 0} f(x) = 0 + \frac{1}{2} = \frac{1}{2}$$

$$(f) \lim_{x \rightarrow 0} \frac{f(x) \cdot \cos x}{x-1} = \frac{\lim_{x \rightarrow 0} f(x) \cdot \lim_{x \rightarrow 0} \cos x}{\lim_{x \rightarrow 0} x - \lim_{x \rightarrow 0} 1} = \frac{\left(\frac{1}{2}\right)(1)}{0-1} = -\frac{1}{2}$$

5. Since $\lim_{x \rightarrow 0} x = 0$ we must have that $\lim_{x \rightarrow 0} (4 - g(x)) = 0$. Otherwise, if $\lim_{x \rightarrow 0} (4 - g(x))$ is a finite positive number, we would have $\lim_{x \rightarrow 0^-} \left[\frac{4-g(x)}{x}\right] = -\infty$ and $\lim_{x \rightarrow 0^+} \left[\frac{4-g(x)}{x}\right] = \infty$ so the limit could not equal 1 as $x \rightarrow 0$. Similar reasoning holds if $\lim_{x \rightarrow 0} (4 - g(x))$ is a finite negative number. We conclude that $\lim_{x \rightarrow 0} g(x) = 4$.

$$6. 2 = \lim_{x \rightarrow -4} \left[x \lim_{x \rightarrow 0} g(x)\right] = \lim_{x \rightarrow -4} x \cdot \lim_{x \rightarrow -4} \left[\lim_{x \rightarrow 0} g(x)\right] = -4 \lim_{x \rightarrow -4} \left[\lim_{x \rightarrow 0} g(x)\right] = -4 \lim_{x \rightarrow 0} g(x)$$

(since $\lim_{x \rightarrow 0} g(x)$ is a constant) $\Rightarrow \lim_{x \rightarrow 0} g(x) = \frac{2}{-4} = -\frac{1}{2}$.

$$7. (a) \lim_{x \rightarrow c} f(x) = \lim_{x \rightarrow c} x^{1/3} = c^{1/3} = f(c) \text{ for every real number } c \Rightarrow f \text{ is continuous on } (-\infty, \infty).$$

$$(b) \lim_{x \rightarrow c} g(x) = \lim_{x \rightarrow c} x^{3/4} = c^{3/4} = g(c) \text{ for every nonnegative real number } c \Rightarrow g \text{ is continuous on } [0, \infty).$$

$$(c) \lim_{x \rightarrow c} h(x) = \lim_{x \rightarrow c} x^{-2/3} = \frac{1}{c^{2/3}} = h(c) \text{ for every nonzero real number } c \Rightarrow h \text{ is continuous on } (-\infty, 0) \text{ and } (0, \infty).$$

$$(d) \lim_{x \rightarrow c} k(x) = \lim_{x \rightarrow c} x^{-1/6} = \frac{1}{c^{1/6}} = k(c) \text{ for every positive real number } c \Rightarrow k \text{ is continuous on } (0, \infty)$$

$$8. (a) \bigcup_{n \in I} \left((n - \frac{1}{2})\pi, (n + \frac{1}{2})\pi\right), \text{ where } I = \text{the set of all integers.}$$

$$(b) \bigcup_{n \in I} (n\pi, (n+1)\pi), \text{ where } I = \text{the set of all integers.}$$

$$(c) (-\infty, \pi) \cup (\pi, \infty)$$

$$(d) (-\infty, 0) \cup (0, \infty)$$

$$9. (a) \lim_{x \rightarrow 0} \frac{x^2 - 4x + 4}{x^3 + 5x^2 - 14x} = \lim_{x \rightarrow 0} \frac{(x-2)(x-2)}{x(x+7)(x-2)} = \lim_{x \rightarrow 0} \frac{x-2}{x(x+7)}, x \neq 2; \text{ the limit does not exist because}$$

$$\lim_{x \rightarrow 0^-} \frac{x-2}{x(x+7)} = \infty \text{ and } \lim_{x \rightarrow 0^+} \frac{x-2}{x(x+7)} = -\infty$$

$$(b) \lim_{x \rightarrow 2} \frac{x^2 - 4x + 4}{x^3 + 5x^2 - 14x} = \lim_{x \rightarrow 2} \frac{(x-2)(x-2)}{x(x+7)(x-2)} = \lim_{x \rightarrow 2} \frac{x-2}{x(x+7)}, x \neq 2, \text{ and } \lim_{x \rightarrow 2} \frac{x-2}{x(x+7)} = \frac{0}{2(9)} = 0$$

$$10. (a) \lim_{x \rightarrow 0} \frac{x^2 + x}{x^3 + 2x^4 + x^3} = \lim_{x \rightarrow 0} \frac{x(x+1)}{x^3(x^2 + 2x + 1)} = \lim_{x \rightarrow 0} \frac{x+1}{x^2(x+1)(x+1)} = \lim_{x \rightarrow 0} \frac{1}{x^2(x+1)}, x \neq 0 \text{ and } x \neq -1.$$

$$\text{Now } \lim_{x \rightarrow 0^-} \frac{1}{x^2(x+1)} = \infty \text{ and } \lim_{x \rightarrow 0^+} \frac{1}{x^2(x+1)} = \infty \Rightarrow \lim_{x \rightarrow 0} \frac{x^2 + x}{x^3 + 2x^4 + x^3} = \infty.$$

(b) $\lim_{x \rightarrow -1} \frac{x^2 + x}{x^3 + 2x^2 + x^3} = \lim_{x \rightarrow -1} \frac{x(x+1)}{x^3(x^2 + 2x + 1)} = \lim_{x \rightarrow -1} \frac{1}{x^2(x+1)}$, $x \neq 0$ and $x \neq -1$. The limit does not exist because $\lim_{x \rightarrow -1^-} \frac{1}{x^2(x+1)} = -\infty$ and $\lim_{x \rightarrow -1^+} \frac{1}{x^2(x+1)} = \infty$.

$$11. \lim_{x \rightarrow 1} \frac{1 - \sqrt{x}}{1 - x} = \lim_{x \rightarrow 1} \frac{1 - \sqrt{x}}{(1 - \sqrt{x})(1 + \sqrt{x})} = \lim_{x \rightarrow 1} \frac{1}{1 + \sqrt{x}} = \frac{1}{2}$$

$$12. \lim_{x \rightarrow a} \frac{x^2 - a^2}{x^4 - a^4} = \lim_{x \rightarrow a} \frac{(x^2 - a^2)}{(x^2 + a^2)(x^2 - a^2)} = \lim_{x \rightarrow a} \frac{1}{x^2 + a^2} = \frac{1}{2a^2}$$

$$13. \lim_{h \rightarrow 0} \frac{(x+h)^2 - x^2}{h} = \lim_{h \rightarrow 0} \frac{(x^2 + 2hx + h^2) - x^2}{h} = \lim_{h \rightarrow 0} (2x + h) = 2x$$

$$14. \lim_{x \rightarrow 0} \frac{(x+h)^2 - x^2}{h} = \lim_{x \rightarrow 0} \frac{(x^2 + 2hx + h^2) - x^2}{h} = \lim_{x \rightarrow 0} (2x + h) = h$$

$$15. \lim_{x \rightarrow 0} \frac{\frac{1}{2+x} - \frac{1}{2}}{x} = \lim_{x \rightarrow 0} \frac{2 - (2+x)}{2x(2+x)} = \lim_{x \rightarrow 0} \frac{-1}{4+2x} = -\frac{1}{4}$$

$$16. \lim_{x \rightarrow 0} \frac{(2+x)^3 - 8}{x} = \lim_{x \rightarrow 0} \frac{(x^3 + 6x^2 + 12x + 8) - 8}{x} = \lim_{x \rightarrow 0} (x^2 + 6x + 12) = 12$$

$$17. \lim_{x \rightarrow 0} \frac{\tan 2x}{\tan \pi x} = \lim_{x \rightarrow 0} \frac{\sin 2x}{\cos 2x} \cdot \frac{\cos \pi x}{\sin \pi x} = \lim_{x \rightarrow 0} \left(\frac{\sin 2x}{2x} \right) \left(\frac{\cos \pi x}{\cos 2x} \right) \left(\frac{\pi x}{\sin \pi x} \right) \left(\frac{2x}{\pi x} \right) = 1 \cdot 1 \cdot 1 \cdot \frac{2}{\pi} = \frac{2}{\pi}$$

$$18. \lim_{x \rightarrow \pi^-} \csc x = \lim_{x \rightarrow \pi^-} \frac{1}{\sin x} = \infty \text{ and } \lim_{x \rightarrow \pi^+} \csc x = \lim_{x \rightarrow \pi^+} \frac{1}{\sin x} = -\infty \Rightarrow \lim_{x \rightarrow \pi} \csc x = \text{does not exist}$$

$$19. \lim_{x \rightarrow \pi} \sin \left(\frac{x}{2} + \sin x \right) = \sin \left(\frac{\pi}{2} + \sin \pi \right) = \sin \left(\frac{\pi}{2} \right) = 1$$

$$20. \lim_{x \rightarrow 1} e^{(x^2 + x - 2)} = e^0 = 1$$

$$21. \text{Let } x = t - 3 \Rightarrow \lim_{t \rightarrow 3^+} \ln(t - 3) = \lim_{x \rightarrow 0^+} \ln x = -\infty$$

$$22. \lim_{t \rightarrow 1} t^2 \ln(2 - \sqrt{t}) = \ln 1 = 0$$

$$23. -1 \leq \cos\left(\frac{\pi}{\theta}\right) \leq 1 \Rightarrow e^{-1} \leq e^{\cos(\pi/\theta)} \leq e^1 \Rightarrow \sqrt{\theta} e^{-1} \leq \sqrt{\theta} e^{\cos(\pi/\theta)} \leq \sqrt{\theta} e \Rightarrow \lim_{\theta \rightarrow 0^+} \sqrt{\theta} e^{\cos(\pi/\theta)} = 0 \text{ by the Sandwich Theorem}$$

$$24. \lim_{z \rightarrow 0^+} \frac{2e^{1/z}}{e^{1/z} + 1} = \lim_{z \rightarrow 0^+} \frac{2}{1 + e^{-1/z}} = \frac{2}{1+0} = 2$$

$$25. \lim_{x \rightarrow 0^+} [4g(x)]^{1/3} = 2 \Rightarrow \left[\lim_{x \rightarrow 0^+} 4g(x) \right]^{1/3} = 2 \Rightarrow \lim_{x \rightarrow 0^+} 4g(x) = 8, \text{ since } 2^3 = 8. \text{ Then } \lim_{x \rightarrow 0^+} g(x) = 2.$$

$$26. \lim_{x \rightarrow \sqrt{5}} \frac{1}{x + g(x)} = 2 \Rightarrow \lim_{x \rightarrow \sqrt{5}} (x + g(x)) = \frac{1}{2} \Rightarrow \sqrt{5} + \lim_{x \rightarrow \sqrt{5}} g(x) = \frac{1}{2} \Rightarrow \lim_{x \rightarrow \sqrt{5}} g(x) = \frac{1}{2} - \sqrt{5}$$

$$27. \lim_{x \rightarrow 1} \frac{3x^2 + 1}{g(x)} = \infty \Rightarrow \lim_{x \rightarrow 1} g(x) = 0 \text{ since } \lim_{x \rightarrow 1} (3x^2 + 1) = 4$$

$$28. \lim_{x \rightarrow -2} \frac{5 - x^2}{\sqrt{g(x)}} = 0 \Rightarrow \lim_{x \rightarrow -2} g(x) = \infty \text{ since } \lim_{x \rightarrow -2} (5 - x^2) = 1$$

$$29. \lim_{x \rightarrow \infty} \frac{2x+3}{5x+7} = \lim_{x \rightarrow \infty} \frac{2+\frac{3}{x}}{5+\frac{7}{x}} = \frac{2+0}{5+0} = \frac{2}{5}$$

$$30. \lim_{x \rightarrow -\infty} \frac{2x^2+3}{5x^2+7} = \lim_{x \rightarrow -\infty} \frac{2+\frac{3}{x^2}}{5+\frac{7}{x^2}} = \frac{2+0}{5+0} = \frac{2}{5}$$

$$31. \lim_{x \rightarrow -\infty} \frac{x^2-4x+8}{3x^3} = \lim_{x \rightarrow -\infty} \left(\frac{1}{3x} - \frac{4}{3x^2} + \frac{8}{3x^3} \right) = 0 - 0 + 0 = 0$$

$$32. \lim_{x \rightarrow \infty} \frac{1}{x^2-7x+1} = \lim_{x \rightarrow \infty} \frac{\frac{1}{x^2}}{1-\frac{7}{x}+\frac{1}{x^2}} = \frac{0}{1-0+0} = 0$$

$$33. \lim_{x \rightarrow -\infty} \frac{x^2-7x}{x+1} = \lim_{x \rightarrow -\infty} \frac{x-7}{1+\frac{1}{x}} = -\infty$$

$$34. \lim_{x \rightarrow \infty} \frac{x^4+x^3}{12x^3+128} = \lim_{x \rightarrow \infty} \frac{x+1}{12+\frac{128}{x^3}} = \infty$$

$$35. \lim_{x \rightarrow \infty} \frac{\sin x}{[x]} \leq \lim_{x \rightarrow \infty} \frac{1}{[x]} = 0 \text{ since } \text{int } x \rightarrow \infty \text{ as } x \rightarrow \infty \Rightarrow \lim_{x \rightarrow \infty} \frac{\sin x}{[x]} = 0.$$

$$36. \lim_{\theta \rightarrow \infty} \frac{\cos \theta - 1}{\theta} \leq \lim_{\theta \rightarrow \infty} \frac{2}{\theta} = 0 \Rightarrow \lim_{\theta \rightarrow \infty} \frac{\cos \theta - 1}{\theta} = 0.$$

$$37. \lim_{x \rightarrow \infty} \frac{x + \sin x + 2\sqrt{x}}{x + \sin x} = \lim_{x \rightarrow \infty} \frac{1 + \frac{\sin x}{x} + \frac{2}{\sqrt{x}}}{1 + \frac{\sin x}{x}} = \frac{1+0+0}{1+0} = 1$$

$$38. \lim_{x \rightarrow \infty} \frac{x^{2/3} + x^{-1}}{x^{2/3} + \cos^2 x} = \lim_{x \rightarrow \infty} \left(\frac{1 + x^{-5/3}}{1 + \frac{\cos^2 x}{x^{2/3}}} \right) = \frac{1+0}{1+0} = 1$$

$$39. \lim_{x \rightarrow \infty} e^{1/x} \cos\left(\frac{1}{x}\right) = e^0 \cdot \cos(0) = 1 \cdot 1 = 1$$

$$40. \lim_{t \rightarrow \infty} \ln\left(1 + \frac{1}{t}\right) = \ln 1 = 0$$

$$41. \lim_{x \rightarrow -\infty} \tan^{-1} x = -\frac{\pi}{2}$$

$$42. \lim_{t \rightarrow -\infty} e^{3t} \sin^{-1}\left(\frac{1}{t}\right) = 0 \cdot \sin^{-1}(0) = 0 \cdot 0 = 0$$

$$43. \text{ At } x = -1: \lim_{x \rightarrow -1^-} f(x) = \lim_{x \rightarrow -1^-} \frac{x(x^2-1)}{|x^2-1|}$$

$$= \lim_{x \rightarrow -1^-} \frac{x(x^2-1)}{x^2-1} = \lim_{x \rightarrow -1^-} x = -1, \text{ and}$$

$$\lim_{x \rightarrow -1^+} f(x) = \lim_{x \rightarrow -1^+} \frac{x(x^2-1)}{|x^2-1|} = \lim_{x \rightarrow -1^+} \frac{x(x^2-1)}{-(x^2-1)}$$

$$= \lim_{x \rightarrow -1^+} (-x) = -(-1) = 1. \text{ Since}$$

$$\lim_{x \rightarrow -1^-} f(x) \neq \lim_{x \rightarrow -1^+} f(x)$$

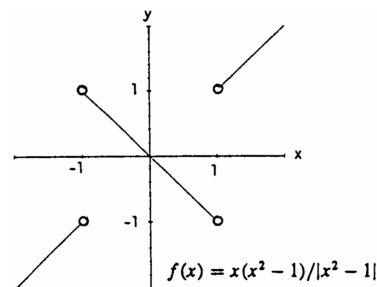
$$\Rightarrow \lim_{x \rightarrow -1} f(x) \text{ does not exist, the function } f \text{ cannot be}$$

extended to a continuous function at $x = -1$.

$$\text{ At } x = 1: \lim_{x \rightarrow 1^-} f(x) = \lim_{x \rightarrow 1^-} \frac{x(x^2-1)}{|x^2-1|} = \lim_{x \rightarrow 1^-} \frac{x(x^2-1)}{-(x^2-1)} = \lim_{x \rightarrow 1^-} (-x) = -1, \text{ and}$$

$$\lim_{x \rightarrow 1^+} f(x) = \lim_{x \rightarrow 1^+} \frac{x(x^2-1)}{|x^2-1|} = \lim_{x \rightarrow 1^+} \frac{x(x^2-1)}{x^2-1} = \lim_{x \rightarrow 1^+} x = 1. \text{ Again } \lim_{x \rightarrow 1} f(x) \text{ does not exist so } f$$

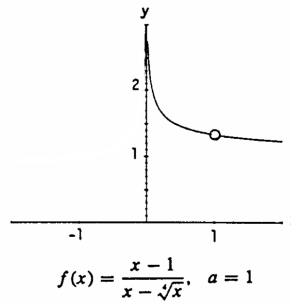
cannot be extended to a continuous function at $x = 1$ either.



$$44. \text{ The discontinuity at } x = 0 \text{ of } f(x) = \sin\left(\frac{1}{x}\right) \text{ is nonremovable because } \lim_{x \rightarrow 0} \sin\left(\frac{1}{x}\right) \text{ does not exist.}$$

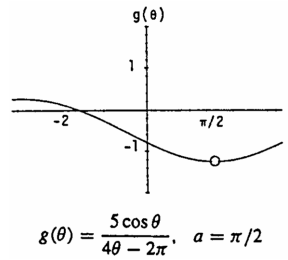
45. Yes, f does have a continuous extension to $a = 1$:

$$\text{define } f(1) = \lim_{x \rightarrow 1} \frac{x-1}{x-\sqrt[4]{x}} = \frac{4}{3}.$$



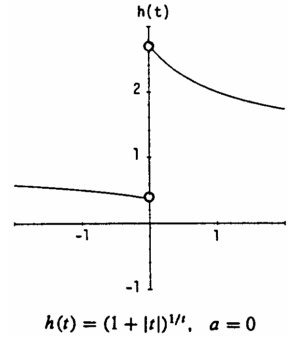
46. Yes, g does have a continuous extension to $a = \frac{\pi}{2}$:

$$g\left(\frac{\pi}{2}\right) = \lim_{\theta \rightarrow \frac{\pi}{2}} \frac{5 \cos \theta}{4\theta - 2\pi} = -\frac{5}{4}.$$



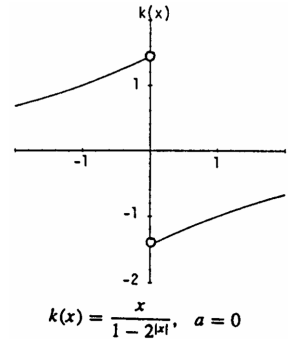
47. From the graph we see that $\lim_{t \rightarrow 0^-} h(t) \neq \lim_{t \rightarrow 0^+} h(t)$

so h cannot be extended to a continuous function at $a = 0$.



48. From the graph we see that $\lim_{x \rightarrow 0^-} k(x) \neq \lim_{x \rightarrow 0^+} k(x)$

so k cannot be extended to a continuous function at $a = 0$.



49. (a) $f(-1) = -1$ and $f(2) = 5 \Rightarrow f$ has a root between -1 and 2 by the Intermediate Value Theorem.

(b), (c) root is 1.32471795724

50. (a) $f(-2) = -2$ and $f(0) = 2 \Rightarrow f$ has a root between -2 and 0 by the Intermediate Value Theorem.

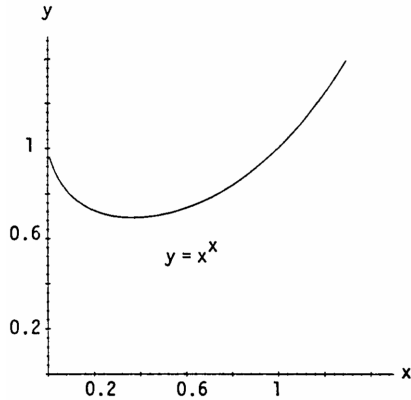
(b), (c) root is -1.76929235424

CHAPTER 2 ADDITIONAL AND ADVANCED EXERCISES

1. (a)	x	0.1	0.01	0.001	0.0001	0.00001
	x^x	0.7943	0.9550	0.9931	0.9991	0.9999

Apparently, $\lim_{x \rightarrow 0^+} x^x = 1$

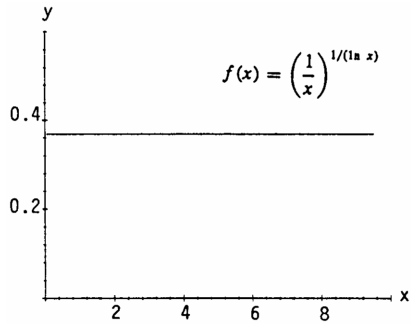
(b)



2. (a)	x	10	100	1000
	$(\frac{1}{x})^{1/(\ln x)}$	0.3679	0.3679	0.3679

Apparently, $\lim_{x \rightarrow \infty} (\frac{1}{x})^{1/(\ln x)} = 0.3678 = \frac{1}{e}$

(b)



$$3. \lim_{v \rightarrow c^-} L = \lim_{v \rightarrow c^-} L_0 \sqrt{1 - \frac{v^2}{c^2}} = L_0 \sqrt{1 - \frac{\lim_{v \rightarrow c^-} v^2}{c^2}} = L_0 \sqrt{1 - \frac{c^2}{c^2}} = 0$$

The left-hand limit was needed because the function L is undefined if $v > c$ (the rocket cannot move faster than the speed of light).

$$4. (a) \left| \frac{\sqrt{x}}{2} - 1 \right| < 0.2 \Rightarrow -0.2 < \frac{\sqrt{x}}{2} - 1 < 0.2 \Rightarrow 0.8 < \frac{\sqrt{x}}{2} < 1.2 \Rightarrow 1.6 < \sqrt{x} < 2.4 \Rightarrow 2.56 < x < 5.76.$$

$$(b) \left| \frac{\sqrt{x}}{2} - 1 \right| < 0.1 \Rightarrow -0.1 < \frac{\sqrt{x}}{2} - 1 < 0.1 \Rightarrow 0.9 < \frac{\sqrt{x}}{2} < 1.1 \Rightarrow 1.8 < \sqrt{x} < 2.2 \Rightarrow 3.24 < x < 4.84.$$

$$5. |10 + (t - 70) \times 10^{-4} - 10| < 0.0005 \Rightarrow |(t - 70) \times 10^{-4}| < 0.0005 \Rightarrow -0.0005 < (t - 70) \times 10^{-4} < 0.0005 \\ \Rightarrow -5 < t - 70 < 5 \Rightarrow 65^\circ < t < 75^\circ \Rightarrow \text{Within } 5^\circ \text{ F.}$$

6. We want to know in what interval to hold values of h to make V satisfy the inequality

$|V - 1000| = |36\pi h - 1000| \leq 10$. To find out, we solve the inequality:

$$|36\pi h - 1000| \leq 10 \Rightarrow -10 \leq 36\pi h - 1000 \leq 10 \Rightarrow 990 \leq 36\pi h \leq 1010 \Rightarrow \frac{990}{36\pi} \leq h \leq \frac{1010}{36\pi}$$

$\Rightarrow 8.8 \leq h \leq 8.9$, where 8.8 was rounded up, to be safe, and 8.9 was rounded down, to be safe.

The interval in which we should hold h is about $8.9 - 8.8 = 0.1$ cm wide (1 mm). With stripes 1 mm wide, we can expect to measure a liter of water with an accuracy of 1%, which is more than enough accuracy for cooking.

7. Show $\lim_{x \rightarrow 1} f(x) = \lim_{x \rightarrow 1} (x^2 - 7) = -6 = f(1)$.

Step 1: $|(x^2 - 7) + 6| < \epsilon \Rightarrow -\epsilon < x^2 - 1 < \epsilon \Rightarrow 1 - \epsilon < x^2 < 1 + \epsilon \Rightarrow \sqrt{1 - \epsilon} < x < \sqrt{1 + \epsilon}$.

Step 2: $|x - 1| < \delta \Rightarrow -\delta < x - 1 < \delta \Rightarrow -\delta + 1 < x < \delta + 1$.

Then $-\delta + 1 = \sqrt{1 - \epsilon}$ or $\delta + 1 = \sqrt{1 + \epsilon}$. Choose $\delta = \min \left\{ 1 - \sqrt{1 - \epsilon}, \sqrt{1 + \epsilon} - 1 \right\}$, then

$0 < |x - 1| < \delta \Rightarrow |(x^2 - 7) - (-6)| < \epsilon$ and $\lim_{x \rightarrow 1} f(x) = -6$. By the continuity test, $f(x)$ is continuous at $x = 1$.

8. Show $\lim_{x \rightarrow \frac{1}{4}} g(x) = \lim_{x \rightarrow \frac{1}{4}} \frac{1}{2x} = 2 = g\left(\frac{1}{4}\right)$.

Step 1: $\left| \frac{1}{2x} - 2 \right| < \epsilon \Rightarrow -\epsilon < \frac{1}{2x} - 2 < \epsilon \Rightarrow 2 - \epsilon < \frac{1}{2x} < 2 + \epsilon \Rightarrow \frac{1}{4 - 2\epsilon} > x > \frac{1}{4 + 2\epsilon}$.

Step 2: $\left| x - \frac{1}{4} \right| < \delta \Rightarrow -\delta < x - \frac{1}{4} < \delta \Rightarrow -\delta + \frac{1}{4} < x < \delta + \frac{1}{4}$.

Then $-\delta + \frac{1}{4} = \frac{1}{4 + 2\epsilon} \Rightarrow \delta = \frac{1}{4} - \frac{1}{4 + 2\epsilon} = \frac{\epsilon}{4(2 + \epsilon)}$, or $\delta + \frac{1}{4} = \frac{1}{4 - 2\epsilon} \Rightarrow \delta = \frac{1}{4 - 2\epsilon} - \frac{1}{4} = \frac{\epsilon}{4(2 - \epsilon)}$.

Choose $\delta = \frac{\epsilon}{4(2 + \epsilon)}$, the smaller of the two values. Then $0 < \left| x - \frac{1}{4} \right| < \delta \Rightarrow \left| \frac{1}{2x} - 2 \right| < \epsilon$ and $\lim_{x \rightarrow \frac{1}{4}} \frac{1}{2x} = 2$.

By the continuity test, $g(x)$ is continuous at $x = \frac{1}{4}$.

9. Show $\lim_{x \rightarrow 2} h(x) = \lim_{x \rightarrow 2} \sqrt{2x - 3} = 1 = h(2)$.

Step 1: $\left| \sqrt{2x - 3} - 1 \right| < \epsilon \Rightarrow -\epsilon < \sqrt{2x - 3} - 1 < \epsilon \Rightarrow 1 - \epsilon < \sqrt{2x - 3} < 1 + \epsilon \Rightarrow \frac{(1 - \epsilon)^2 + 3}{2} < x < \frac{(1 + \epsilon)^2 + 3}{2}$.

Step 2: $|x - 2| < \delta \Rightarrow -\delta < x - 2 < \delta$ or $-\delta + 2 < x < \delta + 2$.

Then $-\delta + 2 = \frac{(1 - \epsilon)^2 + 3}{2} \Rightarrow \delta = 2 - \frac{(1 - \epsilon)^2 + 3}{2} = \frac{1 - (1 - \epsilon)^2}{2} = \epsilon - \frac{\epsilon^2}{2}$, or $\delta + 2 = \frac{(1 + \epsilon)^2 + 3}{2}$

$\Rightarrow \delta = \frac{(1 + \epsilon)^2 + 3}{2} - 2 = \frac{(1 + \epsilon)^2 - 1}{2} = \epsilon + \frac{\epsilon^2}{2}$. Choose $\delta = \epsilon - \frac{\epsilon^2}{2}$, the smaller of the two values. Then,

$0 < |x - 2| < \delta \Rightarrow \left| \sqrt{2x - 3} - 1 \right| < \epsilon$, so $\lim_{x \rightarrow 2} \sqrt{2x - 3} = 1$. By the continuity test, $h(x)$ is continuous at $x = 2$.

10. Show $\lim_{x \rightarrow 5} F(x) = \lim_{x \rightarrow 5} \sqrt{9 - x} = 2 = F(5)$.

Step 1: $\left| \sqrt{9 - x} - 2 \right| < \epsilon \Rightarrow -\epsilon < \sqrt{9 - x} - 2 < \epsilon \Rightarrow 9 - (2 - \epsilon)^2 > x > 9 - (2 + \epsilon)^2$.

Step 2: $0 < |x - 5| < \delta \Rightarrow -\delta < x - 5 < \delta \Rightarrow -\delta + 5 < x < \delta + 5$.

Then $-\delta + 5 = 9 - (2 + \epsilon)^2 \Rightarrow \delta = (2 + \epsilon)^2 - 4 = \epsilon^2 + 2\epsilon$, or $\delta + 5 = 9 - (2 - \epsilon)^2 \Rightarrow \delta = 4 - (2 - \epsilon)^2 = \epsilon^2 - 2\epsilon$.

Choose $\delta = \epsilon^2 - 2\epsilon$, the smaller of the two values. Then, $0 < |x - 5| < \delta \Rightarrow \left| \sqrt{9 - x} - 2 \right| < \epsilon$, so

$\lim_{x \rightarrow 5} \sqrt{9 - x} = 2$. By the continuity test, $F(x)$ is continuous at $x = 5$.

11. Suppose L_1 and L_2 are two different limits. Without loss of generality assume $L_2 > L_1$. Let $\epsilon = \frac{1}{3}(L_2 - L_1)$.

Since $\lim_{x \rightarrow x_0} f(x) = L_1$ there is a $\delta_1 > 0$ such that $0 < |x - x_0| < \delta_1 \Rightarrow |f(x) - L_1| < \epsilon \Rightarrow -\epsilon < f(x) - L_1 < \epsilon$

$\Rightarrow -\frac{1}{3}(L_2 - L_1) + L_1 < f(x) < \frac{1}{3}(L_2 - L_1) + L_1 \Rightarrow 4L_1 - L_2 < 3f(x) < 2L_1 + L_2$. Likewise, $\lim_{x \rightarrow x_0} f(x) = L_2$

so there is a δ_2 such that $0 < |x - x_0| < \delta_2 \Rightarrow |f(x) - L_2| < \epsilon \Rightarrow -\epsilon < f(x) - L_2 < \epsilon$

$\Rightarrow -\frac{1}{3}(L_2 - L_1) + L_2 < f(x) < \frac{1}{3}(L_2 - L_1) + L_2 \Rightarrow 2L_2 + L_1 < 3f(x) < 4L_2 - L_1$

$\Rightarrow L_1 - 4L_2 < -3f(x) < -2L_2 - L_1$. If $\delta = \min \{ \delta_1, \delta_2 \}$ both inequalities must hold for $0 < |x - x_0| < \delta$:

$\left. \begin{array}{l} 4L_1 - L_2 < 3f(x) < 2L_1 + L_2 \\ L_1 - 4L_2 < -3f(x) < -2L_2 - L_1 \end{array} \right\} \Rightarrow 5(L_1 - L_2) < 0 < L_1 - L_2$. That is, $L_1 - L_2 < 0$ and $L_1 - L_2 > 0$,

a contradiction.

12. Suppose $\lim_{x \rightarrow c} f(x) = L$. If $k = 0$, then $\lim_{x \rightarrow c} kf(x) = \lim_{x \rightarrow c} 0 = 0 = 0 \cdot \lim_{x \rightarrow c} f(x)$ and we are done.

If $k \neq 0$, then given any $\epsilon > 0$, there is a $\delta > 0$ so that $0 < |x - c| < \delta \Rightarrow |f(x) - L| < \frac{\epsilon}{|k|} \Rightarrow |k||f(x) - L| < \epsilon$
 $\Rightarrow |k(f(x) - L)| < \epsilon \Rightarrow |(kf(x)) - (kL)| < \epsilon$. Thus, $\lim_{x \rightarrow c} kf(x) = kL = k\left(\lim_{x \rightarrow c} f(x)\right)$.

13. (a) Since $x \rightarrow 0^+$, $0 < x^3 < x < 1 \Rightarrow (x^3 - x) \rightarrow 0^- \Rightarrow \lim_{x \rightarrow 0^+} f(x^3 - x) = \lim_{y \rightarrow 0^-} f(y) = B$ where $y = x^3 - x$.
 (b) Since $x \rightarrow 0^-$, $-1 < x < x^3 < 0 \Rightarrow (x^3 - x) \rightarrow 0^+ \Rightarrow \lim_{x \rightarrow 0^-} f(x^3 - x) = \lim_{y \rightarrow 0^+} f(y) = A$ where $y = x^3 - x$.
 (c) Since $x \rightarrow 0^+$, $0 < x^4 < x^2 < 1 \Rightarrow (x^2 - x^4) \rightarrow 0^+ \Rightarrow \lim_{x \rightarrow 0^+} f(x^2 - x^4) = \lim_{y \rightarrow 0^+} f(y) = A$ where $y = x^2 - x^4$.
 (d) Since $x \rightarrow 0^-$, $-1 < x < 0 \Rightarrow 0 < x^4 < x^2 < 1 \Rightarrow (x^2 - x^4) \rightarrow 0^+ \Rightarrow \lim_{x \rightarrow 0^-} f(x^2 - x^4) = A$ as in part (c).

14. (a) True, because if $\lim_{x \rightarrow a} (f(x) + g(x))$ exists then $\lim_{x \rightarrow a} (f(x) + g(x)) - \lim_{x \rightarrow a} f(x) = \lim_{x \rightarrow a} [(f(x) + g(x)) - f(x)] = \lim_{x \rightarrow a} g(x)$ exists, contrary to assumption.

(b) False; for example take $f(x) = \frac{1}{x}$ and $g(x) = -\frac{1}{x}$. Then neither $\lim_{x \rightarrow 0} f(x)$ nor $\lim_{x \rightarrow 0} g(x)$ exists, but

$$\lim_{x \rightarrow 0} (f(x) + g(x)) = \lim_{x \rightarrow 0} \left(\frac{1}{x} - \frac{1}{x}\right) = \lim_{x \rightarrow 0} 0 = 0 \text{ exists.}$$

(c) True, because $g(x) = |x|$ is continuous $\Rightarrow g(f(x)) = |f(x)|$ is continuous (it is the composite of continuous functions).

(d) False; for example let $f(x) = \begin{cases} -1, & x \leq 0 \\ 1, & x > 0 \end{cases} \Rightarrow f(x)$ is discontinuous at $x = 0$. However $|f(x)| = 1$ is continuous at $x = 0$.

15. Show $\lim_{x \rightarrow -1} f(x) = \lim_{x \rightarrow -1} \frac{x^2 - 1}{x + 1} = \lim_{x \rightarrow -1} \frac{(x+1)(x-1)}{(x+1)} = -2, x \neq -1$.

Define the continuous extension of $f(x)$ as $F(x) = \begin{cases} \frac{x^2 - 1}{x + 1}, & x \neq -1 \\ -2, & x = -1 \end{cases}$. We now prove the limit of $f(x)$ as $x \rightarrow -1$

exists and has the correct value.

Step 1: $\left| \frac{x^2 - 1}{x + 1} - (-2) \right| < \epsilon \Rightarrow -\epsilon < \frac{(x+1)(x-1)}{(x+1)} + 2 < \epsilon \Rightarrow -\epsilon < (x - 1) + 2 < \epsilon, x \neq -1 \Rightarrow -\epsilon - 1 < x < \epsilon - 1$.

Step 2: $|x - (-1)| < \delta \Rightarrow -\delta < x + 1 < \delta \Rightarrow -\delta - 1 < x < \delta - 1$.

Then $-\delta - 1 = -\epsilon - 1 \Rightarrow \delta = \epsilon$, or $\delta - 1 = \epsilon - 1 \Rightarrow \delta = \epsilon$. Choose $\delta = \epsilon$. Then $0 < |x - (-1)| < \delta$

$\Rightarrow \left| \frac{x^2 - 1}{x + 1} - (-2) \right| < \epsilon \Rightarrow \lim_{x \rightarrow -1} F(x) = -2$. Since the conditions of the continuity test are met by $F(x)$, then $f(x)$ has a continuous extension to $F(x)$ at $x = -1$.

16. Show $\lim_{x \rightarrow 3} g(x) = \lim_{x \rightarrow 3} \frac{x^2 - 2x - 3}{2x - 6} = \lim_{x \rightarrow 3} \frac{(x-3)(x+1)}{2(x-3)} = 2, x \neq 3$.

Define the continuous extension of $g(x)$ as $G(x) = \begin{cases} \frac{x^2 - 2x - 3}{2x - 6}, & x \neq 3 \\ 2, & x = 3 \end{cases}$. We now prove the limit of $g(x)$ as

$x \rightarrow 3$ exists and has the correct value.

Step 1: $\left| \frac{x^2 - 2x - 3}{2x - 6} - 2 \right| < \epsilon \Rightarrow -\epsilon < \frac{(x-3)(x+1)}{2(x-3)} - 2 < \epsilon \Rightarrow -\epsilon < \frac{x+1}{2} - 2 < \epsilon, x \neq 3 \Rightarrow 3 - 2\epsilon < x < 3 + 2\epsilon$.

Step 2: $|x - 3| < \delta \Rightarrow -\delta < x - 3 < \delta \Rightarrow 3 - \delta < x < \delta + 3$.

Then, $3 - \delta = 3 - 2\epsilon \Rightarrow \delta = 2\epsilon$, or $\delta + 3 = 3 + 2\epsilon \Rightarrow \delta = 2\epsilon$. Choose $\delta = 2\epsilon$. Then $0 < |x - 3| < \delta$

$\Rightarrow \left| \frac{x^2 - 2x - 3}{2x - 6} - 2 \right| < \epsilon \Rightarrow \lim_{x \rightarrow 3} \frac{(x-3)(x+1)}{2(x-3)} = 2$. Since the conditions of the continuity test hold for $G(x)$,

$g(x)$ can be continuously extended to $G(x)$ at $x = 3$.

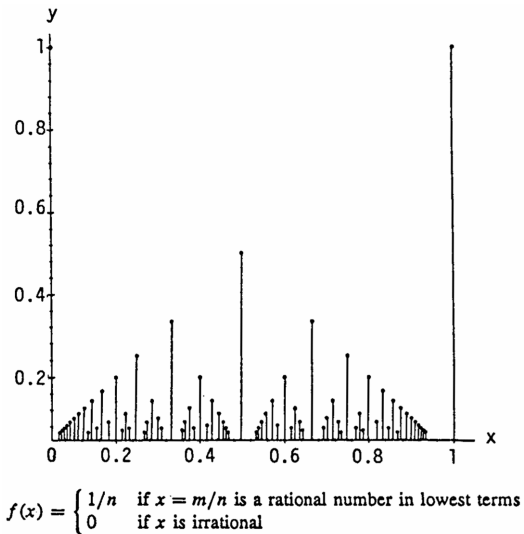
17. (a) Let $\epsilon > 0$ be given. If x is rational, then $f(x) = x \Rightarrow |f(x) - 0| = |x - 0| < \epsilon \Leftrightarrow |x - 0| < \epsilon$; i.e., choose $\delta = \epsilon$. Then $|x - 0| < \delta \Rightarrow |f(x) - 0| < \epsilon$ for x rational. If x is irrational, then $f(x) = 0 \Rightarrow |f(x) - 0| < \epsilon \Leftrightarrow 0 < \epsilon$ which is true no matter how close irrational x is to 0, so again we can choose $\delta = \epsilon$. In either case,

given $\epsilon > 0$ there is a $\delta = \epsilon > 0$ such that $0 < |x - 0| < \delta \Rightarrow |f(x) - 0| < \epsilon$. Therefore, f is continuous at $x = 0$.

- (b) Choose $x = c > 0$. Then within any interval $(c - \delta, c + \delta)$ there are both rational and irrational numbers. If c is rational, pick $\epsilon = \frac{c}{2}$. No matter how small we choose $\delta > 0$ there is an irrational number x in $(c - \delta, c + \delta) \Rightarrow |f(x) - f(c)| = |0 - c| = c > \frac{c}{2} = \epsilon$. That is, f is not continuous at any rational $c > 0$. On the other hand, suppose c is irrational $\Rightarrow f(c) = 0$. Again pick $\epsilon = \frac{c}{2}$. No matter how small we choose $\delta > 0$ there is a rational number x in $(c - \delta, c + \delta)$ with $|x - c| < \frac{c}{2} = \epsilon \Leftrightarrow \frac{c}{2} < x < \frac{3c}{2}$. Then $|f(x) - f(c)| = |x - 0| = |x| > \frac{c}{2} = \epsilon \Rightarrow f$ is not continuous at any irrational $c > 0$.
- If $x = c < 0$, repeat the argument picking $\epsilon = \frac{|c|}{2} = \frac{-c}{2}$. Therefore f fails to be continuous at any nonzero value $x = c$.

18. (a) Let $c = \frac{m}{n}$ be a rational number in $[0, 1]$ reduced to lowest terms $\Rightarrow f(c) = \frac{1}{n}$. Pick $\epsilon = \frac{1}{2n}$. No matter how small $\delta > 0$ is taken, there is an irrational number x in the interval $(c - \delta, c + \delta) \Rightarrow |f(x) - f(c)| = |0 - \frac{1}{n}| = \frac{1}{n} > \frac{1}{2n} = \epsilon$. Therefore f is discontinuous at $x = c$, a rational number.
- (b) Now suppose c is an irrational number $\Rightarrow f(c) = 0$. Let $\epsilon > 0$ be given. Notice that $\frac{1}{2}$ is the only rational number reduced to lowest terms with denominator 2 and belonging to $[0, 1]$; $\frac{1}{3}$ and $\frac{2}{3}$ the only rationals with denominator 3 belonging to $[0, 1]$; $\frac{1}{4}$ and $\frac{3}{4}$ with denominator 4 in $[0, 1]$; $\frac{1}{5}, \frac{2}{5}, \frac{3}{5}$ and $\frac{4}{5}$ with denominator 5 in $[0, 1]$; etc. In general, choose N so that $\frac{1}{N} < \epsilon \Rightarrow$ there exist only finitely many rationals in $[0, 1]$ having denominator $\leq N$, say r_1, r_2, \dots, r_p . Let $\delta = \min \{|c - r_i| : i = 1, \dots, p\}$. Then the interval $(c - \delta, c + \delta)$ contains no rational numbers with denominator $\leq N$. Thus, $0 < |x - c| < \delta \Rightarrow |f(x) - f(c)| = |f(x) - 0| = |f(x)| \leq \frac{1}{N} < \epsilon \Rightarrow f$ is continuous at $x = c$ irrational.

- (c) The graph looks like the markings on a typical ruler when the points $(x, f(x))$ on the graph of $f(x)$ are connected to the x -axis with vertical lines.



19. Yes. Let R be the radius of the equator (earth) and suppose at a fixed instant of time we label noon as the zero point, 0 , on the equator $\Rightarrow 0 + \pi R$ represents the midnight point (at the same exact time). Suppose x_1 is a point on the equator “just after” noon $\Rightarrow x_1 + \pi R$ is simultaneously “just after” midnight. It seems reasonable that the temperature T at a point just after noon is hotter than it would be at the diametrically opposite point just after midnight: That is, $T(x_1) - T(x_1 + \pi R) > 0$. At exactly the same moment in time pick x_2 to be a point just before midnight $\Rightarrow x_2 + \pi R$ is just before noon. Then $T(x_2) - T(x_2 + \pi R) < 0$. Assuming the temperature function T is continuous along the equator (which is reasonable), the Intermediate Value Theorem says there is a point c between 0 (noon) and πR (simultaneously midnight) such that $T(c) - T(c + \pi R) = 0$; i.e., there is always a pair of antipodal points on the earth's equator where the temperatures are the same.

$$20. \lim_{x \rightarrow c} f(x)g(x) = \lim_{x \rightarrow c} \frac{1}{4} [(f(x) + g(x))^2 - (f(x) - g(x))^2] = \frac{1}{4} \left[\left(\lim_{x \rightarrow c} (f(x) + g(x)) \right)^2 - \left(\lim_{x \rightarrow c} (f(x) - g(x)) \right)^2 \right]$$

$$= \frac{1}{4} (3^2 - (-1)^2) = 2.$$

$$21. (a) \lim_{a \rightarrow 0} r_+(a) = \lim_{a \rightarrow 0} \frac{-1 + \sqrt{1+a}}{a} = \lim_{a \rightarrow 0} \left(\frac{-1 + \sqrt{1+a}}{a} \right) \left(\frac{-1 - \sqrt{1+a}}{-1 - \sqrt{1+a}} \right)$$

$$= \lim_{a \rightarrow 0} \frac{1 - (1+a)}{a(-1 - \sqrt{1+a})} = \frac{-1}{-1 - \sqrt{1+0}} = \frac{1}{2}$$

$$\lim_{a \rightarrow -1^+} r_+(a) = \lim_{a \rightarrow -1^+} \frac{1 - (1+a)}{a(-1 - \sqrt{1+a})} = \lim_{a \rightarrow -1} \frac{-a}{a(-1 - \sqrt{1+a})} = \frac{-1}{-1 - \sqrt{0}} = 1$$

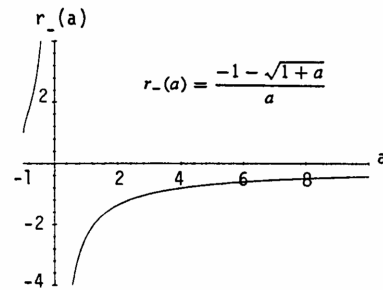
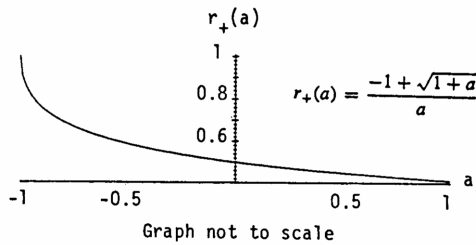
$$(b) \lim_{a \rightarrow 0^-} r_-(a) = \lim_{a \rightarrow 0^-} \frac{-1 - \sqrt{1+a}}{a} = \lim_{a \rightarrow 0^-} \left(\frac{-1 - \sqrt{1+a}}{a} \right) \left(\frac{-1 + \sqrt{1+a}}{-1 + \sqrt{1+a}} \right)$$

$$= \lim_{a \rightarrow 0^-} \frac{1 - (1+a)}{a(-1 + \sqrt{1+a})} = \lim_{a \rightarrow 0^-} \frac{-a}{a(-1 + \sqrt{1+a})} = \lim_{a \rightarrow 0^-} \frac{-1}{-1 + \sqrt{1+a}} = \infty \text{ (because the denominator is always negative);}$$

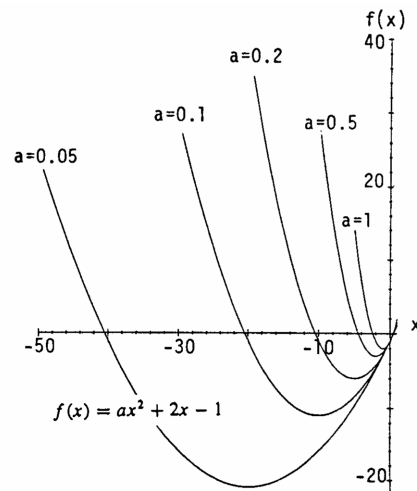
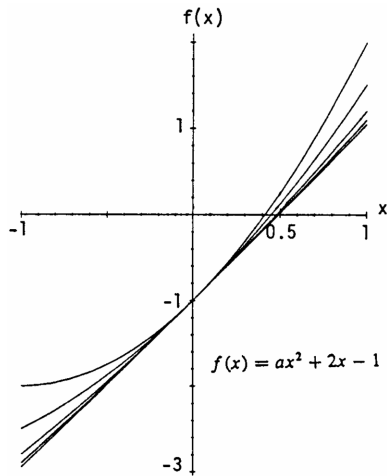
$$\lim_{a \rightarrow 0^+} r_-(a) = \lim_{a \rightarrow 0^+} \frac{-1}{-1 + \sqrt{1+a}} = -\infty \text{ (because the denominator is always positive). Therefore, } \lim_{a \rightarrow 0} r_-(a) \text{ does not exist.}$$

$$\lim_{a \rightarrow -1^+} r_-(a) = \lim_{a \rightarrow -1^+} \frac{-1 - \sqrt{1+a}}{a} = \lim_{a \rightarrow -1^+} \frac{-1}{-1 + \sqrt{1+a}} = 1$$

(c)



(d)



22. $f(x) = x + 2 \cos x \Rightarrow f(0) = 0 + 2 \cos 0 = 2 > 0$ and $f(-\pi) = -\pi + 2 \cos(-\pi) = -\pi - 2 < 0$. Since $f(x)$ is continuous on $[-\pi, 0]$, by the Intermediate Value Theorem, $f(x)$ must take on every value between $[-\pi - 2, 2]$. Thus there is some number c in $[-\pi, 0]$ such that $f(c) = 0$; i.e., c is a solution to $x + 2 \cos x = 0$.

23. (a) The function f is bounded on D if $f(x) \geq M$ and $f(x) \leq N$ for all x in D . This means $M \leq f(x) \leq N$ for all x in D . Choose B to be $\max\{|M|, |N|\}$. Then $|f(x)| \leq B$. On the other hand, if $|f(x)| \leq B$, then $-B \leq f(x) \leq B \Rightarrow f(x) \geq -B$ and $f(x) \leq B \Rightarrow f(x)$ is bounded on D with $N = B$ an upper bound and $M = -B$ a lower bound.

(b) Assume $f(x) \leq N$ for all x and that $L > N$. Let $\epsilon = \frac{L-N}{2}$. Since $\lim_{x \rightarrow x_0} f(x) = L$ there is a $\delta > 0$ such that $0 < |x - x_0| < \delta \Rightarrow |f(x) - L| < \epsilon \Leftrightarrow L - \epsilon < f(x) < L + \epsilon \Leftrightarrow L - \frac{L-N}{2} < f(x) < L + \frac{L-N}{2}$
 $\Leftrightarrow \frac{L+N}{2} < f(x) < \frac{3L-N}{2}$. But $L > N \Rightarrow \frac{L+N}{2} > N \Rightarrow N < f(x)$ contrary to the boundedness assumption $f(x) \leq N$. This contradiction proves $L \leq N$.

(c) Assume $M \leq f(x)$ for all x and that $L < M$. Let $\epsilon = \frac{M-L}{2}$. As in part (b), $0 < |x - x_0| < \delta$
 $\Rightarrow L - \frac{M-L}{2} < f(x) < L + \frac{M-L}{2} \Leftrightarrow \frac{3L-M}{2} < f(x) < \frac{M+L}{2} < M$, a contradiction.

24. (a) If $a \geq b$, then $a - b \geq 0 \Rightarrow |a - b| = a - b \Rightarrow \max\{a, b\} = \frac{a+b}{2} + \frac{|a-b|}{2} = \frac{a+b}{2} + \frac{a-b}{2} = \frac{2a}{2} = a$.
 If $a \leq b$, then $a - b \leq 0 \Rightarrow |a - b| = -(a - b) = b - a \Rightarrow \max\{a, b\} = \frac{a+b}{2} + \frac{|a-b|}{2} = \frac{a+b}{2} + \frac{b-a}{2} = \frac{2b}{2} = b$.

(b) Let $\min\{a, b\} = \frac{a+b}{2} - \frac{|a-b|}{2}$.

25. $\lim_{x \rightarrow 0} \frac{\sin(1 - \cos x)}{x} = \lim_{x \rightarrow 0} \frac{\sin(1 - \cos x)}{1 - \cos x} \cdot \frac{1 - \cos x}{x} \cdot \frac{1 + \cos x}{1 + \cos x} = \lim_{x \rightarrow 0} \frac{\sin(1 - \cos x)}{1 - \cos x} \cdot \lim_{x \rightarrow 0} \frac{1 - \cos^2 x}{x(1 + \cos x)} = 1 \cdot \lim_{x \rightarrow 0} \frac{\sin^2 x}{x(1 + \cos x)}$
 $= \lim_{x \rightarrow 0} \frac{\sin x}{x} \cdot \frac{\sin x}{1 + \cos x} = 1 \cdot \left(\frac{0}{2}\right) = 0$.

26. $\lim_{x \rightarrow 0^+} \frac{\sin x}{\sin \sqrt{x}} = \lim_{x \rightarrow 0^+} \frac{\sin x}{x} \cdot \frac{\sqrt{x}}{\sin \sqrt{x}} \cdot \frac{x}{\sqrt{x}} = 1 \cdot \lim_{x \rightarrow 0^+} \frac{1}{\left(\frac{\sin \sqrt{x}}{\sqrt{x}}\right)} \cdot \lim_{x \rightarrow 0^+} \sqrt{x} = 1 \cdot 0 \cdot 0 = 0$.

27. $\lim_{x \rightarrow 0} \frac{\sin(\sin x)}{x} = \lim_{x \rightarrow 0} \frac{\sin(\sin x)}{\sin x} \cdot \frac{\sin x}{x} = \lim_{x \rightarrow 0} \frac{\sin(\sin x)}{\sin x} \cdot \lim_{x \rightarrow 0} \frac{\sin x}{x} = 1 \cdot 1 = 1$.

28. $\lim_{x \rightarrow 0} \frac{\sin(x^2 + x)}{x} = \lim_{x \rightarrow 0} \frac{\sin(x^2 + x)}{x^2 + x} \cdot (x + 1) = \lim_{x \rightarrow 0} \frac{\sin(x^2 + x)}{x^2 + x} \cdot \lim_{x \rightarrow 0} (x + 1) = 1 \cdot 1 = 1$

29. $\lim_{x \rightarrow 2} \frac{\sin(x^2 - 4)}{x - 2} = \lim_{x \rightarrow 2} \frac{\sin(x^2 - 4)}{x^2 - 4} \cdot (x + 2) = \lim_{x \rightarrow 2} \frac{\sin(x^2 - 4)}{x^2 - 4} \cdot \lim_{x \rightarrow 2} (x + 2) = 1 \cdot 4 = 4$

30. $\lim_{x \rightarrow 9} \frac{\sin(\sqrt{x} - 3)}{x - 9} = \lim_{x \rightarrow 9} \frac{\sin(\sqrt{x} - 3)}{\sqrt{x} - 3} \cdot \frac{1}{\sqrt{x} + 3} = \lim_{x \rightarrow 9} \frac{\sin(\sqrt{x} - 3)}{\sqrt{x} - 3} \cdot \lim_{x \rightarrow 9} \frac{1}{\sqrt{x} + 3} = 1 \cdot \frac{1}{6} = \frac{1}{6}$